

SHEET 1

PENANG SANGAM HIGH SCHOOL  
YEAR 9  
BASIC TECHNOLOGY

WORKSHEET – 2

QUESTION 1

MULTIPLE CHOICE

1. Ear muffs are used in order to protect your ears from

- A. dust
- B. getting wet
- C. wood chips
- D. excessive noise

2. The symbol given on right is known as

- A. earth
- B. sawn timber
- C. hardcore fill
- D. dressed timber



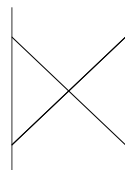
3. The technical drawing instrument given on the right is

- A. Tee-Square
- B. Axe-square
- C. 30° Set-Square
- D. 60° Set-Square




4. The symbol given on right is known as

- A. switch socket
- B. One way switch
- C. illuminating lamp
- D. wall mounted lamp




QUESTION 2

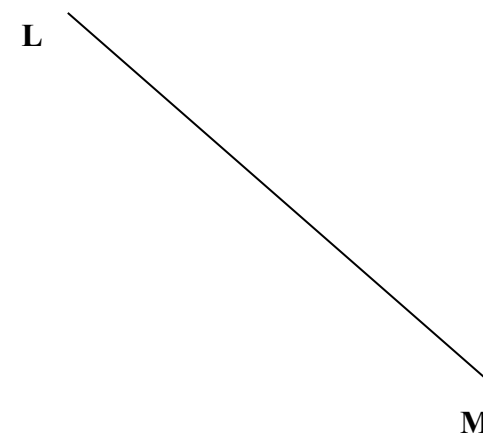
A. Divide the given line EF into three parts.



B. Bisect the given line LM.



C. Quadrisect the given line LM.



THE END