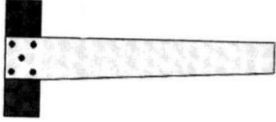


BA SANGAM COLLEGE
YEAR 10
BASIC TECHNOLOGY
WORKSHEET 2

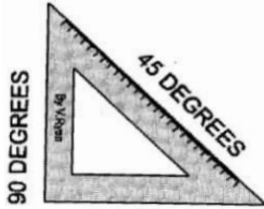
(Attempt the questions at the back of your exercise book)


Name and give the uses of the following Instruments.

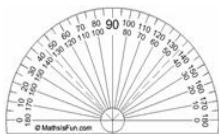















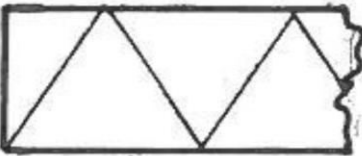


A. Write the correct name of the symbols on the space provided.











B. Write any five safety rules to be followed in the workshop

1. _____

2. _____

3. _____

4. _____

5. _____
