

**RAVIRAVI SANGAM SCHOOL**


**YEAR 2**

**NUMERACY**

**WORKSHEET 1**


**QUESTION 1-** Ordering numbers- write these numbers in descending order( biggest to smallest)

43	8	77	62
----	---	----	----



--	--	--	--

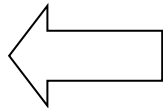
25	60	3	49
----	----	---	----



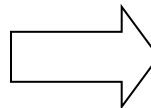
--	--	--	--

**QUESTION 2- SHAPES / DIRECTION-** Draw shapes with curved lines on left side and shapes with straight lines on right side.

**Left**



**Right**



**QUESTION 3-** Write the number names for these numerals.

61- \_\_\_\_\_

53 - \_\_\_\_\_

97 - \_\_\_\_\_

24 - \_\_\_\_\_

12 - \_\_\_\_\_

38 - \_\_\_\_\_