

**1076 NADI SANGAM SCHOOL**





**SOLUTION 2 ELEMENTARY**

**Year -6**






**(28/6/21-03/7/21)**

**SECTION A**

**Name these science equipment below**

			
<b><u>Beaker</u></b>	<b><u>Thermometer</u></b>	<b><u>Tongs</u></b>	<b><u>Conical Flask</u></b>

**Draw these science equipment's.**

Tripod stand	Test tube	Bunsen burner	Gauze mat	Measuring cylinder
 _____	 _____	 _____	 _____	 _____

## **SHORT ANSWER QUESTIONS**

1. What is a thermometer used for?

Thermometer is used for measuring the temperature.

2. What is the:

a. boiling point-100°C

b. freezing point-0°C

3. What is a matter?

Matter is everything around us.

4. Name three states of matter.

a. Solid

b. Liquid

c. Gas

5. What is needed to change solid to liquid to gas?

Heating

### **Name the processes**

1. Liquid to gas- evaporation

2. Gas to liquid- condensation

3. Solid to liquid- melting

4. Liquid to solid- freezing

5. Solid to gas - sublimation

6. Gas to solid- deposition

*....THE END....*