

Ba Sangam College

Year 11

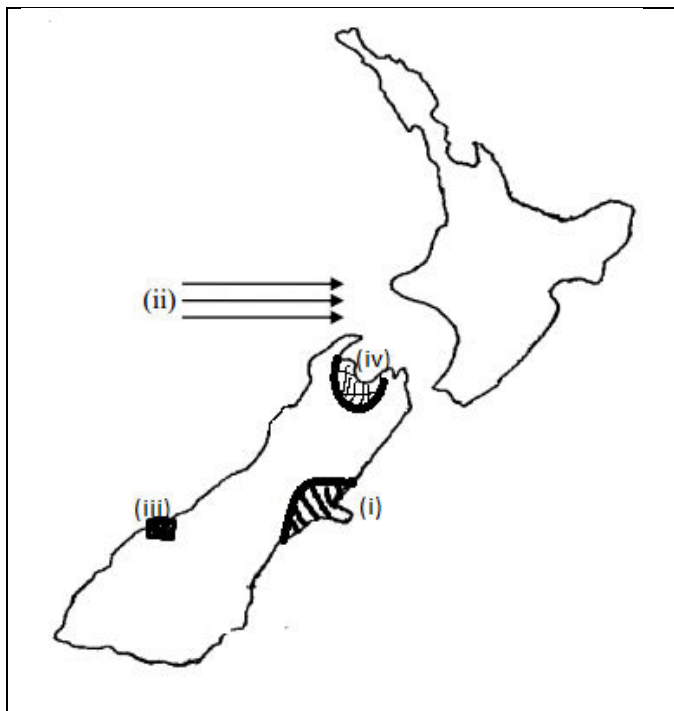
Geography

Worksheet 5

A. Mapping

(a) Use the map of New Zealand given below and your knowledge to identify the features marked (i) to (iv) that are described as follows

- (i) This rain shadow area
- (ii) This prevailing wind
- (iii) This mountain with the lowest temperature
- (iv) This area that receives the most sunshine hours

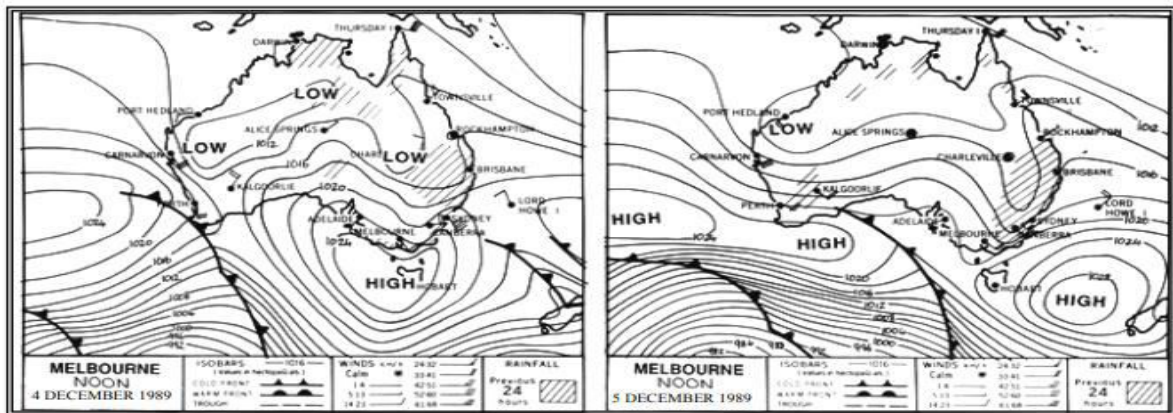


(b) On the outline map of Fiji locate and name:

- (i) An island group prone to drought in western Viti Levu.
- (ii) The sugar city in the leeward side.

B. Synoptic Chart Interpretation

Use the weather map given below and your own knowledge to answer the questions that follow.

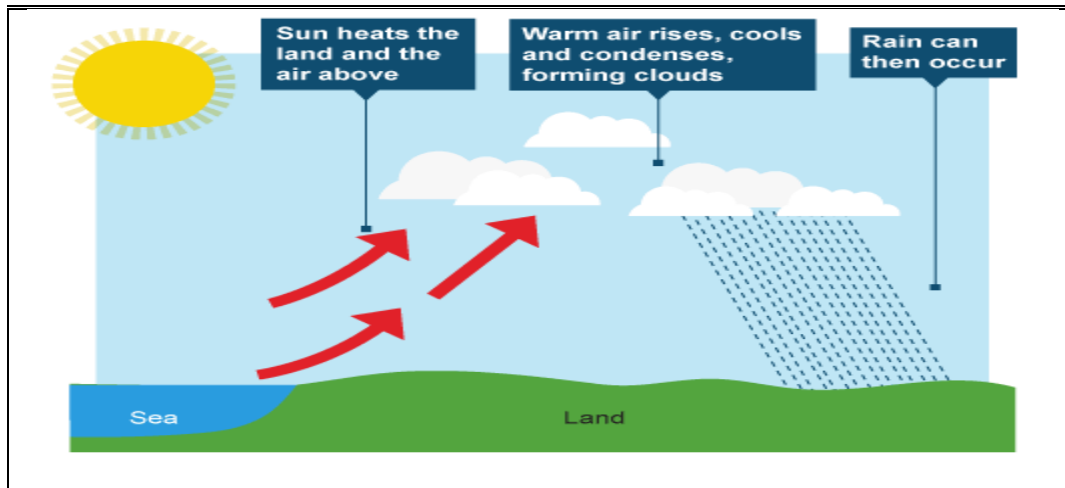


Source: Mapping and Statistical Skills for Secondary Students, Scott, L. & Laws, K., 1991.

Describe the weather condition for Australia over the two – day period.

C. Resource Interpretation

Use the resource given below and your own knowledge to answer the questions that follow.



Source: <https://www.google.com>

- Identify the type of rainfall and state how this type of rainfall occurs.
- Discuss what happens in this type of rainfall?

D. Essay

With reference to either Fiji or New Zealand, discuss the three earth modification processes by humans and discuss its impact on the environment.

The End