

UCIWAI SANGAM SCHOOL

YEAR 3 - ENGLISH

HOME LEARNING WORKSHEET NO. 3 SOLUTION

ARTICLES

An article is used to introduce a noun. For example: the, a, an.

- Sometimes we use **the** before the noun. **For example:** the rubber, the fish, the phone, the pillow.

Write **the** below these words.

- a. **the** book b. **the** cat c. **the** man d. **the** tree

- Sometimes we use **a** or **an** before the nouns. For example: a car, a man, a tree, an octopus, an umbrella, an elephant.

Write **a** before these words.

- a. **a** book b. **a** cat c. **a** girl d. **a** tree


Use **an** before words beginning with a, e, l, o, u.

Write **an** before these words.

- a. **an** iguana b. **an** eye c. **an** orange

UCIWAI SANGAM SCHOOLYEAR 3 – MATHEMATICSHOME LEARNING WORKSHEET NO. 3 SOLUTION**FRACTIONS- REPRESENTING HALF AND QUARTERS**



- ❖ This shape has four equal parts.
- ❖ One part out of the four parts is shaded; we say **one quarter** is shaded.
- ❖ One quarter is written as $\frac{1}{4}$ in fraction.



- ❖ This shape has 4 equal parts.
- ❖ Two parts out of the four parts are shaded; we say **two quarters** is shaded.
- ❖ Two quarters is written as $\frac{2}{4}$ or $\frac{1}{2}$ in fraction.

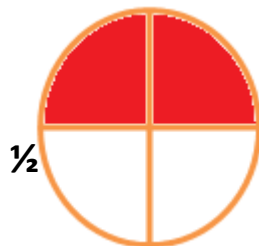

**ACTIVITY**

- ✓ (Tick) the shape that represents $\frac{1}{4}$
- X (cross) the shapes that shows $\frac{2}{4}$



X

Colour the fraction under each shape.

 $\frac{1}{4}$ 

UCIWAI SANGAM SCHOOL

YEAR 3 – HEALTHY LIVING

HOME LEARNING WORKSHEET NO. 3 SOLUTION

LISTENING WHEN SOMEONE IS TALKING

Activity – True/False

1. A good listener sees the world through the eyes of others. **True**
2. It is not polite to listen when someone is talking. **False**
3. We use our eyes to listen. **False**
4. Listen when someone is talking to you. **True**

UCIWAI SANGAM SCHOOL WEEKLY HOMESTUDY 2021

YEARS 3

WORKSHEET:3 SOLUTIONS

NAME: _____

HINDIActivity:1. Matras: सभी अक्षरों में दिए गए मात्रा लगाओ ।

ि बि नि मि फि दि गि खि
 ै दौ सौ नौ कौ भौ लौ पौ

2. Vocabs: Write with four different colours.

चक्की चक्की चक्की चक्की चक्की
 मिठाई मिठाई मिठाई मिठाई मिठाई
 तुरंत तुरंत तुरंत तुरंत तुरंत
 झपटी झपटी झपटी झपटी झपटी
 सौप सौप सौप सौप सौप


३भ Reading:4. Matching: कौन किस के साथ ?

बुढिया पकौडी
 मक्खी रोटी
 बिल्ली चक्की
 कुत्ता मिठाई

5. Complete these: कविता में किस के बाद कौन आया?

सब से पहले मक्खी आई ।
 उस के बाद बिल्ली आई ।
 उस के बाद कुत्ता आया ।
 अंत में बकरा आया ।

6. Drawing: बुढ़िया को परेशान करने कौन कौन आए ? उन के चित्र बनाओ ।



UCIWAI SANGAM SCHOOL

YEAR 3 – SOCIAL STUDIES

HOME LEARNING WORKSHEET NO. 3 Solution

CULTURE- My Religion

Your place of worship? (Answers will depend on the religion of the child)



Church



Gurudwara



Temple



Mosque

QUESTION

1. Name your place of worship.

Answer will depend upon the Religion of the child

2. State the place of worship for the following;

a. Christians- **Church**

c. sikh - **Gurudwara**

b. Hindus - **Temple**

d. muslims- **Mosque**

UCIWAI SANGAM SCHOOL

Ministry of Education Registration No. 1078

LEARNING WORKSHEETS 3

ANSWER SCHEME

SUBJECT : VOSA VAKAVITI

KALASI : 3

STRAND : 1 Wilivola

SUB STRAND : 1.1 Wilivola kei na volavola

Ulutaga : Yaca ni Siga ena Veimacawa

1. Vola na yaca dodonu ni siga ena loma ni macawa

1. Moni ti

2. Tu si ti

3. Vu ke lulu

4. Lotu levu

5. Vaka rau buka

6. Vakarau wai

7. Sigatabu

2. Droinitaka ka rokataka na veika ko cakava ena SIGATABU

UCIWAI SANGAM SCHOOL
YEAR 3 – ELEMENTARY SCIENCE
HOME LEARNING WORKSHEET NO. 3 SOLUTION

MATTER-PROPERTIES OF SOME MATERIALS

Some materials and their properties.

Name of material	Their properties
Plastic	Soft, light, water proof, easily folded and unfolded
Wood	Strong, hard, brown in colour.
Glass	Transparent, fragile, hard and brittle
Rubber band	Stretchable
Water	Liquid, tasteless, no smell, colourless.

QUESTIONS

1. What are some properties of materials?

An object has different properties such as colour, strength, texture, smell, hardness, flexibility, elasticity, malleability, magnetism.

2. Give examples of at least 2 materials that has the following properties.

Answer will vary

- a. Hard- rock

glass

- b. Soft- **plastic**

cotton

- c. Strong **wood**

metal

- d. Brown **wood**

cloth