

2034 NANUKU SANGAM SCHOOL
YEAR 3 MATHEMATICS
WORKSHEET 2

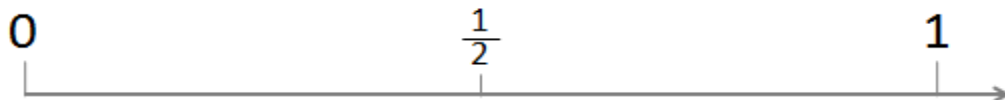
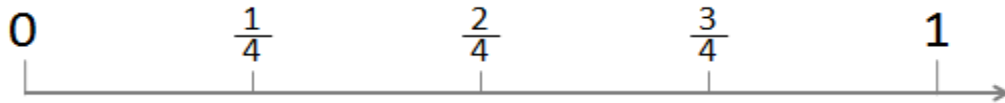
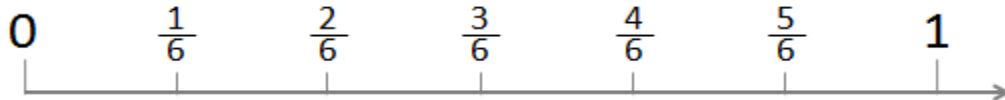
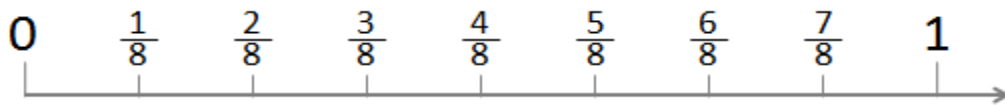
Subject: Mathematics
Week : 2

Year/Level: 3

Name: _____

Strand	Numbers
Sub-Strand	Fractions
Content Learning Outcome (CLO)	Express and show the link of fractions as part of a whole in addition and subtraction using number lines and in problem solving.

Lesson Notes:



ACTIVITY

1. How many quarters will equal half?

_____.

2. How many thirds equal to one?

_____.

3. Study the number line above and put in the correct sign $<$, $>$ or $=$ in the

a). $\frac{2}{4}$ $\frac{1}{3}$

b). $\frac{2}{6}$ $\frac{1}{2}$

c). $\frac{4}{8}$ $\frac{2}{4}$