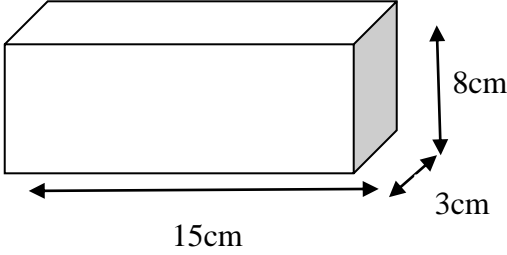
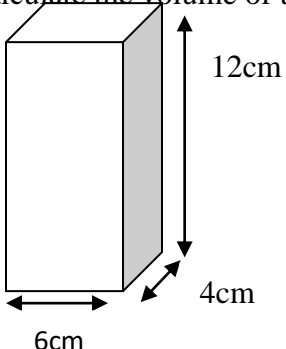
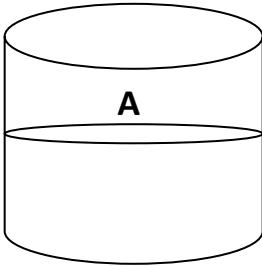
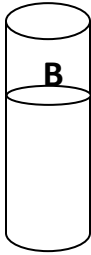


No:	Question	Working	Answer
1.	Convert each of the following to the unit given in brackets. a) 7L = _____ ml b) 6 ½ L = _____ ml c) 69 500ml = _____ L		
2.	Calculate the volume of these cuboids in cm <sup>3</sup> and then convert it into ml. a) 		
3.	b) Calculate the volume of these cuboids in cm <sup>3</sup> 		
4.	<div style="display: flex; justify-content: space-around; align-items: center;"> <div style="text-align: center;">  <p>½ full of water</p> </div> <div style="text-align: center;">  <p>¾ full of water</p> </div> </div> <p>If <b>Tank A</b> has the capacity of <b>1.8L</b> and <b>Tank B</b> has <b>1.6L</b> of water when full, then calculate the volume of water in each tank. Write your answer in <b>ml</b>.</p>		