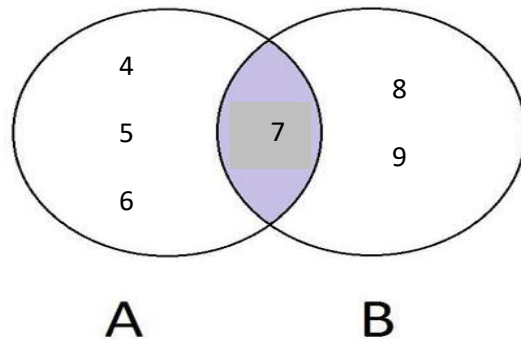


1076 NADI SANGAM SCHOOL
YEAR 4 MATHEMATICS SOLUTIONS NO. 2, 2021

Section B. (Work out your answers)

1. Study the diagram below then answer the questions num.



List:

- a) Set A: { **4, 5, 6, 7** }.
- b) Set B: { **7, 8, 9** }.
- c) Set A∪B: { **4, 5, 6, 7, 8, 9** }.
- d) Set A∩ B: { **7** }.
- e) $n(A) = \underline{4}$
- f) $n(B) = \underline{3}$

2. Use the diagram below to answer the following questions

| | | | | | |
|-----------|-----------|-----------|-----------|-----------|-----------|
| 60 | 20 | 90 | 10 | 50 | 30 |
|-----------|-----------|-----------|-----------|-----------|-----------|

a) Arrange the numbers in ascending order

10, 20, 30, 50, 60, 90.

b) Arrange the numbers in descending order

90, 60, 50, 30, 20, 10

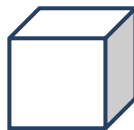
3. Label the shapes given below

a).




_____ **Triangle** _____

b).



_____ **Cube** _____

c).



_____ **Cylinder** _____

4. Study the table below and answer the questions that follow

The table shows the subject marks of three students in Year 402 at Nadi Sangam.

| Subjects | Iva | Esha | Munil |
|-------------|-----|------|-------|
| Mathematics | 50 | 40 | 46 |
| English | 45 | 45 | 45 |
| Science | 44 | 50 | 48 |
| Spelling | 47 | 47 | 50 |
| Art | 50 | 49 | 48 |
| Total | 236 | 231 | 237 |

a. Who scored 50 marks in Science?

_____ **Esha** _____

b. Who scored the lowest mark in Science?

_____ **Iva** _____

c. Who scored the highest mark in Spelling?

_____ **Munil** _____

d. How many marks did Munil score in Mathematics?

_____ **46** _____

e. Which subject did the three children score the same marks?

_____ **English** _____

f. How many marks did Esha score in all the subjects?

_____ **231** _____

5. Round the following numbers to the nearest tens

a. 23 = **20**

b. 87 = **90**

c. 31 = **30**

d. 2 = **0**

e. 99 = **100**