

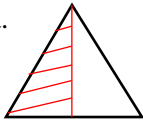
**2036 Penang Sangam Primary School**  
**Year 3**  
**Mathematics**  
**Worksheet 4 - Solution**

STRAND	Number and Numeration
SUB-STARND	Fractions
CONTENT LEARNING OUTCOME	Draw half ( $\frac{1}{2}$ ), a third ( $\frac{1}{3}$ ) as part of a whole on a circle, square and rectangle.

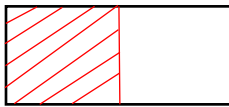
Questions

1. Colour half ( $\frac{1}{2}$ ) of the given shapes.

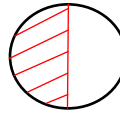
a.



b.



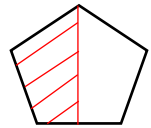
c.



d.

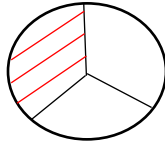


e.

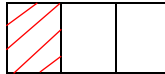


2. Colour one- third( $\frac{1}{3}$ ) of the given shapes.

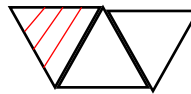
a.



b.



c.



d.

