

SANGAM SKM COLLEGE NADI

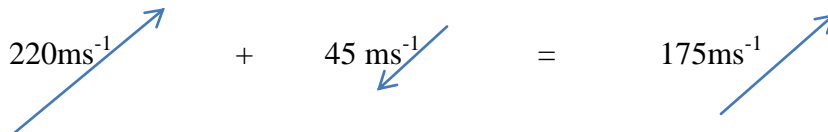
YEAR 12

PHYSICS

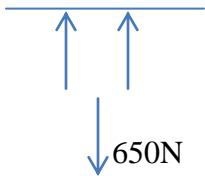
WORKSHEET 2

ANSWERS

1.

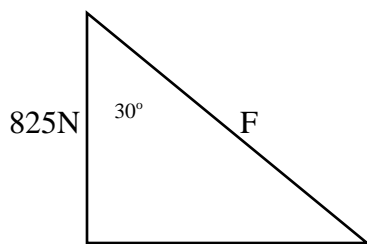


2.



Equilibrium and both arms are same length so equal tension $T_1 = T_2 = 325\text{N}$

3.



$$\cos \theta = \frac{a}{h}$$

$$\cos 30^\circ = \frac{825}{h}$$

$$H = 952.63\text{N}$$