







SANGAM SKM COLLEGE - NADI
YEAR 12 TECHNICAL DRAWING WORKSHEET
WEEK 4 2021 - SOLUTIONS

Draw freehand sketches of the following diagrams, label its parts and evaluate choosing one of the headings from the list.

Picture to sketch	Your free hand sketch (parts labelled)	Evaluate on any ONE given below Material, Aesthetics, Cost, Functionality and safety
		<p>Material – Materials are locally available. Materials used are – 14 mm Plywood, wooden drive screws, PVA Glue and varnish</p>
		<p>Aesthetics</p> <p>The project is painted black. Two coats are applied for a shiny appearance.</p>
		<p>safety</p> <p>Overhead umbrella provides sun shelter.</p>