


SUVA SANGAM COLLEGE
Year 12: APPLIED TECHNOLOGY
PORTAL WORKSHEET 8

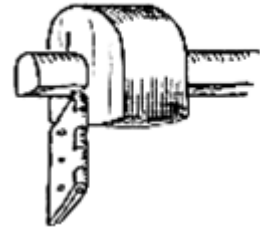
ACTIVITY

a. Explain the process of fixing hinge shown below:

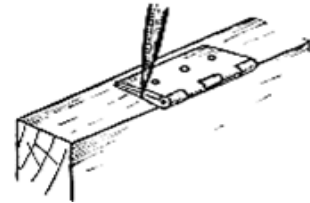
i. _____




ii. _____



iii. _____



b. Name the lock shown below and write down the use.



Name: _____

