

## HOME STUDY PACKAGE

School: Labasa Sangam (SKM) College

Subject: Basic Technology

Worksheet Number 1/ week 7

Due Date: 6<sup>th</sup> September 2021

Year/Level: 10

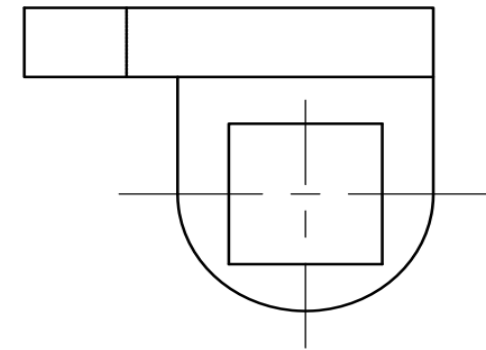
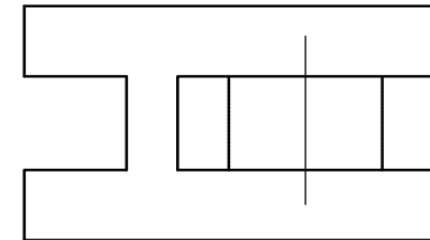
Student Name: \_\_\_\_\_

Date : 16<sup>th</sup> – 20<sup>th</sup> August 2021

GIVEN : The Orthographic views of a shaped block in First Angle projection

REQUIRED:

- (i) Label the 2 views correctly.
- (ii) Using the given dimensions, draw the shaped block in ISOMETRIC drawing, Take measurements from the drawing. Use 'O' as your starting point

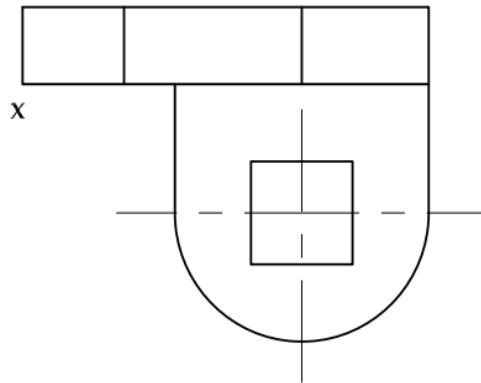
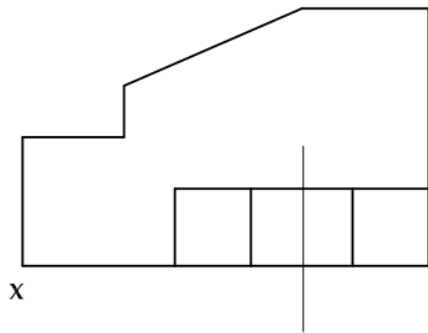


1	Guidelines shown	1	
2	Correct printing	1	
3	Correct line work	1	
4	Correct starting point used	1	
5	Correct line work	1	
6	Accuracy (L, W & H)	2	
7	Correct shape	2	
8	Neatness	1	

GIVEN : The Orthographic views of a shaped block in First Angle projection

**REQUIRED:**

- (iii) Label the 2 views correctly.
- (iv) Using the given dimensions, draw the shaped block in ISOMETRIC drawing, Take measurements from the drawing. Use 'O' as your starting point



1	Guidelines shown	1	
2	Correct printing	1	
3	Correct line work	1	
4	Correct starting point used	1	
5	Correct line work	1	
6	Accuracy (L, W & H)	2	
7	Correct shape	2	
8	Neatness	1	

