

MARKS: 25

YEAR:1\_\_\_

NAME: \_\_\_\_\_

**Section A**

**Punctuations**

**(3 Marks)**

**Rewrite the sentence using capital letters and full stop.**

1. a hot cup of tea

**A hot cup of tea.**

2. this is a boy

**This is a boy.**

3. i am in year one

**I am in year one.**

**Section B**

**Fill in the Blanks**

**(5 Marks)**

1. My name is **Mrs Pillay.**

2. I am a **girl.** (boy / girl)

3. I am in year **103.** (103 / 101 / 102)

4. I go to **Lovu Sangam** school. I **love** my school.

**Section C**

**Matching**








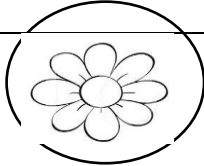

**(4 Marks)**

Match the capital letters with their small letters.

M		x
S		e
X		b
B		m



**Section D****Circle****(3 Marks)**

Circle a picture of the starting sound.

p			
s			
f			


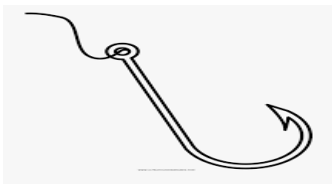
**Section E****Word Shape****( 10 Marks)**

hook	fish	mango	grapes	caterpillar
------	------	-------	--------	-------------



c	a	t	e	r	p	i	l	l	a	r
---	---	---	---	---	---	---	---	---	---	---

f	i	s	h
---	---	---	---



H	o	o	k
---	---	---	---

M	a	n	g	o
---	---	---	---	---

g	r	a	p	e	s
---	---	---	---	---	---







**1075 LOVU SANGAM SCHOOL**  
**TERM 2 YEAR 1 WEEK 8**  
**ASSESSMENT 1 LEARNING TO KNOW ( MATHS)**


**NAME :** \_\_\_\_\_

**YEAR :** 1 \_\_\_\_\_


**1. MATCHING** Match the given shapes to its correct names **8m**


	<ul style="list-style-type: none"><li>• Star</li></ul>
	<ul style="list-style-type: none"><li>• Triangle</li></ul>
	<ul style="list-style-type: none"><li>• Circle</li></ul>
	<ul style="list-style-type: none"><li>• Square</li></ul>

**2. Look at the length of each lines. Colour on the measurement boxes up to the right length to match each line. 8m**





1	2	3	4	5	6	7	8
---	---	---	---	---	---	---	---



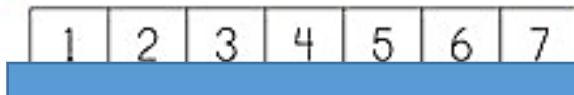



1	2	3	4	5	6	7	8
---	---	---	---	---	---	---	---






1	2	3	4	5	6	7	8
---	---	---	---	---	---	---	---





1	2	3	4	5	6	7	8
---	---	---	---	---	---	---	---











**3. Circle the biggest number from the box. 1m**

7	3	6	8
---	---	---	---













4. Circle the **smallest** number in the box. 1m

20   10   11   6

5. Add the dots and write the sum in the given box. 4m

	+		=	4
	+		=	4
	+		=	7
	+		=	5

6. Arrange the numbers from smallest to the biggest. 3m

				0   4   6   8
				2   4   7   9
				1   3   5   8

MARKS: 25




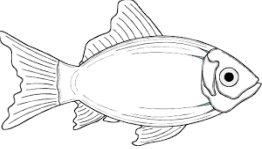


YEAR 1 \_\_\_\_\_

YACAMU: ANSWER SHEET
















Wasewase A Wirina na matanivola lailai. (3 na maka)

A	U	a	V
K	h	s	k
N	n	b	i

Wasewase B Veisataka na i yaloyalo vata kei na rorogo. (5 na maka)

		i
		vi
		bu
		wa
		ku

Wasewase C: Rokataka na i yaloyalo vata kei na i tekitekivu ni rorogo. (5 na maka)

lo			
ga			
ma			
se			
ta			

Wasewase D Tabaiyaloyalotaka mai kei na rokataka. (12 na maka)

		
keke	mama	sili
		
vale	vava	bebe



--	--	--

MARKS: 25

YEAR:1\_\_

NAME: \_\_\_\_\_

Section A

Word Shape

(6 Marks)



H o p p i n g



N u r s e

hopping  
umbrella  
nurse



U m b r e l l a

Section B

Matching

(4 Marks)

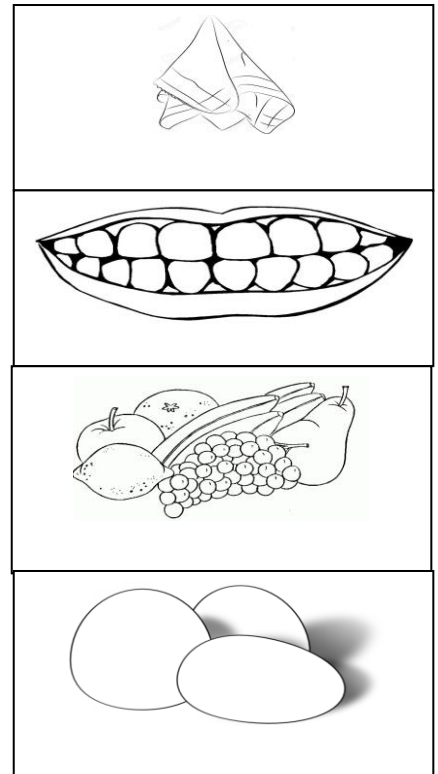
Match the picture with the name.

fruits

eggs

teeth



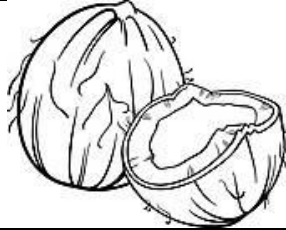


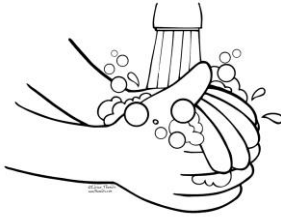
handkerchief



Section D

Fill in the Blanks

(6 Marks)


			share
eyes	face	coconut	eye
			hands
share	helping	hands	face
			coconut
			helping

Section E

Draw and Colour

(9 Marks)


apple (2 marks)



playing with friends (3 marks)



carrot (2 m)



towel (2 marks)





**1075 LOVU SANGAM SCHOOL**  
**TERM 2 YEAR 1 WEEK 8**  
**ASSESSMENT 1 LANGUAGE AND LITERACY (HINDI)**

25

**NAME:** \_\_\_\_\_

**YEAR : 1** \_\_\_\_\_










1. अक्षरों को जोड़ कर लिखिए

6m

क + ल =	कल
ह + म =	हम
ए + क =	एक

2. दिए गए चित्र कनिचे लिखो :

एकवचन या बहुवचन 9m

 एकवचन	 बहुवचन	 बहुवचन
 बहुवचन	 बहुवचन	 एकवचन
 एकवचन	 एकवचन	 एकवचन

3. 7m

7

मिलान करो और चित्र में रंग भरो

क  
उ  
ऊ  
इ  
आ  
ओ  
अ

4. दिए गए शब्दों को सही लिंग से मेल करो। डम

मोर	→	मामी
मामा	→	राजा
रानी	→	मोरनी

1075 Lovu Sangam School  
Term 2 Assessment 1  
Spiritual and Moral Development

Year: 1\_\_ Marks:

25

Name: \_\_\_\_\_

Section A

Multiple Choice

Circle the correct answer (4 marks)

1. Whom should you inform first if you get hurt in school?

. teacher

B. brother

C. sister

2. How do I-Taukei people greet each other?

A. namaste

. bula

C. hello

3. Which of the following is a good value?

A. rude

B. hate

. respect

4. Hardwork leads to \_\_\_\_\_.

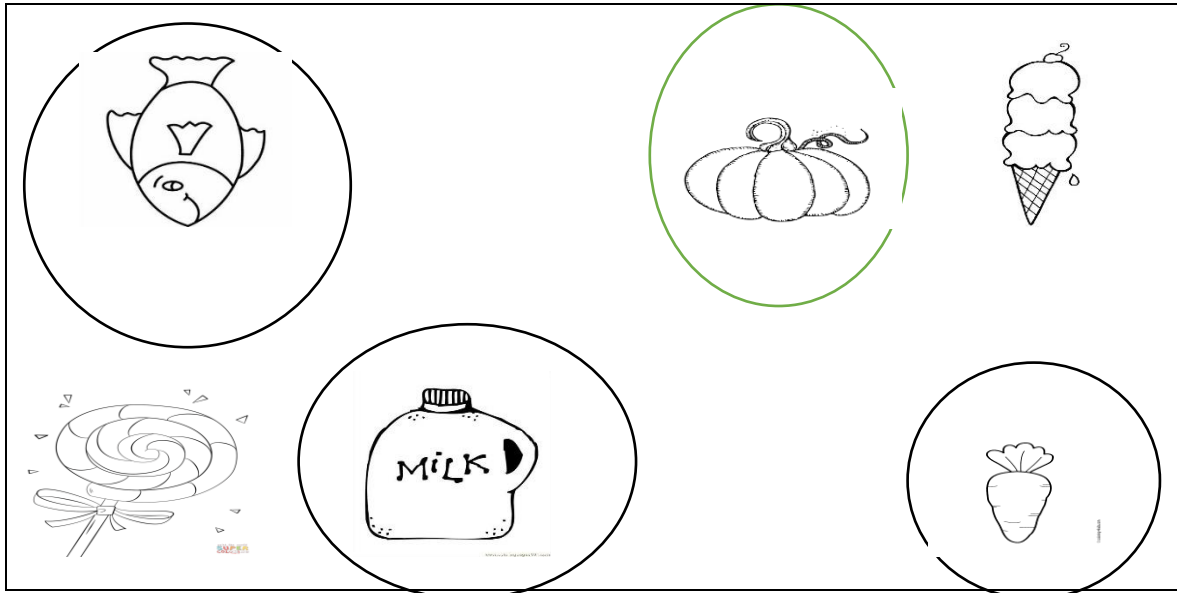
success

B. failure

C. disappointment

Section B. Circle the foods that are good for our health

(4 marks)



Section C

Fill in the missing letters

(5marks)

1. L o v e

2. H e l p

3. S h a r e

4. R e s p e c t

5. H o n e s t y

Section D

Write: good /bad

(5marks)

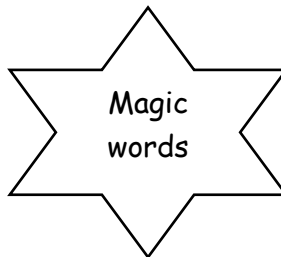
1. Respect each other. good
2. Kick your pets. bad
3. Fasten your seat belt in vehicles. good
4. Talk back to your siblings. bad
5. Invite your friends to your birthday party. good

Section E Choose 5 magic words from the list below

(5marks)

Thank you	What	Please	Move	Excuse me
Sshhh	May I	Shut up	I'm sorry	Shift

1. Thank you
2. May I
3. Please



4. I'm sorry
5. Excuse me

Section F

Draw and colour

(2marks)

<p>Taking care of your pet</p> 	<p>Helping the poor cross the road</p> 
--	---



Year: 1\_\_ Marks:

25

Name: \_\_\_\_\_

Section A      Multiple Choice      Circle the correct answer (5 marks)

- \_\_\_\_\_ is not allowed in school.  
A.  Chewing gum      B. Book      C. Water bottle
- Birthdays are celebrated to bring \_\_\_\_\_ together.  
A. schools      B. plants      C.  families
- Which of the following object can cause fire?  
A. spoon      B.  matches      C. knife
- A sailor \_\_\_\_\_ the ship.  
A. flies      B.  sails      C. drives
- A friend who helps us when we are sick is a \_\_\_\_\_.  
A. fireman      B.  nurse      C. teacher

Section B      Matching      Match column A to column B (3 marks)

Column A

Column B

- Bath with \_\_\_\_\_ and water
- Rainy Weather
- It gives meat



Section C

Write Yes and No for these questions

(5 marks)

1. All the people in a family are related. yes
2. A banana is bad for our health. no
3. A mango plant has seeds in it. no
4. We use sunglasses when it rains. no
5. Play with matches. no

Section D

Underline the correct answers

(5 marks)

1. Throw rubbish in the (bin / basin).
2. A (farmer / dentist) takes care of our oral health.
3. We give gifts on someone's (funeral / birthday).
4. Have a safe and (clean / dirty) classroom.
5. Fertilizers makes (houses/ plants) grow.

Section E

Answer the following questions


(3 marks)

1. Name a thing from your environment e.g a tree. Animals, people, buildings, houses, cars
2. Who is your best friend? Name of anyone
3. Give an example of a sharp object? Pencil, knife, compass, fork

Section F

Write the correct name for these pictures

(4 marks)




Fire extinguisher



pineapple



t- shirt



traffic light

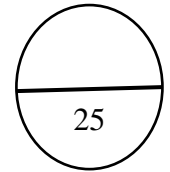
Fire extinguisher

T- shirt

Pineapple

Traffic light

**1075 LOVU SANGAM SCHOOL**  
**TERM 2 YEAR 1 WEEK 8**  
**ASSESSMENT 1 AESTHETIC ARTS AND CREATIVITY ( PEMAC)**



**NAME :** \_\_\_\_\_

**YEAR : 1** \_\_\_\_\_

**Section A**

**Multiple Choice**

Circle the correct answer.

10m

1. What were some of the things that we used to make a butterfly at home?



Empty toilet paper roll

B. pot plant

2. Which picture shows a pen holder?

A.



3. Wise man made his house upon a \_\_\_\_\_.

A. Sand



. rock

4. Turtle have very hard \_\_\_\_\_ to protect themselves.



Shell

B. rock

5. Pleasant sounds makes us feel very \_\_\_\_\_.




. Happy

B. sad

**Section B**

**Short Answer Questions**


1. Draw and colour the turtle that we made at home. 5m



2. Read , colour and trace

6m

## READ and COLOR



This is Princess Camilla.

She has brown hair.

She wears golden crown.

Her dress is pink and yellow.

She wears a blue belt.

Write her name

CAMILIA

3. Write yes or no

4m

Write yes for the statement that is correct.

Write No if the statement is incorrect or wrong.

Read	Yes / no
Butterflies don't have wings.	<u>no</u>
Fish live inside a tree.	<u>no</u>
Turtles can swim.	<u>yes</u>
Butterflies can fly.	<u>yes</u>

Year: 1\_\_ Marks:

25

Name: \_\_\_\_\_

Section A

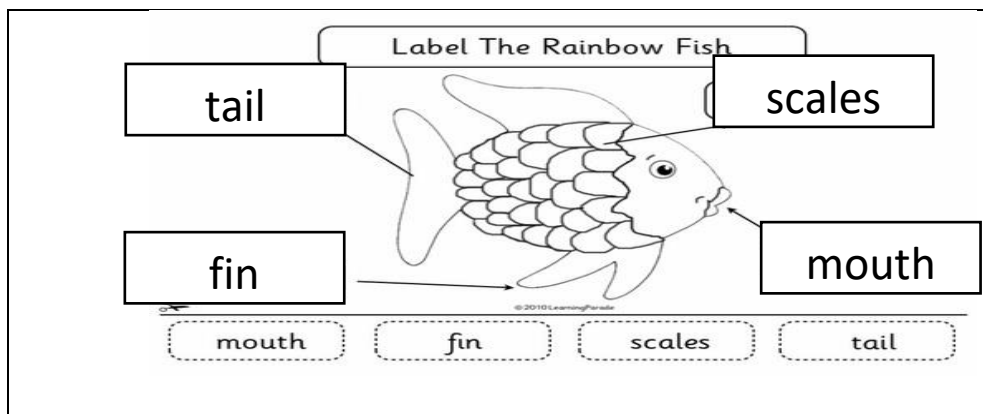
Multiple Choice

Circle the correct answer (4 marks)

1. A cat is an animal with \_\_\_\_ legs?  
 A. 2                      B. 3                      C. 4
2. \_\_\_\_\_ is a living thing that gives us food and oxygen.  
 A. Plant                      B. Sun                      C. Soil
3. Our environment is our \_\_\_\_\_.  
A. house                      B. home                       C. surrounding
4. A \_\_\_\_\_ makes seeds.  
A. stem                       B. fruit                      C. root

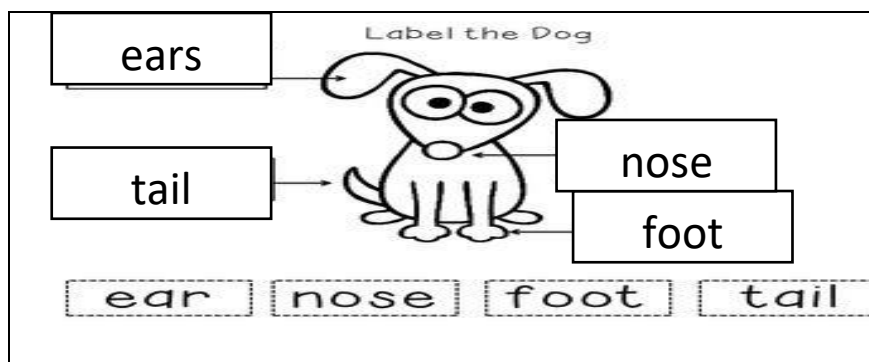
Section B: (I) Label the parts of a Fish

(4marks)



Section B: (II) Label the parts of a Dog

(4marks)



Section C

Write Yes and No for these questions

(5 marks)

1. There are 3 states of matter. yes
2. Crabs are found in the mangrove swamp. yes
3. Chair is a natural material. no
4. The place where an organism lives is called its habitat. yes
5. The sun is very cold. no

Section D

Answer the following questions



(4 marks)

1. Where does a fish live? water
2. What is a balloon filled with? Is it solid, liquid or gas? gas
3. Give an example of a natural material? Sun, water, tress, people, animals, air, stones, stars, moon
4. Opening the door is a pushing or pulling force? Pulling force

Section E

Write the correct labels under each pictures

(4 marks)

	
Pulling force	Pushing force

Pushing Force	Pulling Force
---------------	---------------