



**SECTION B****GRAMMAR****20 marks****PART A Underline the noun in each sentence. (5marks)**

1. This is an apple.
2. I want to eat that pie.
3. Those books on the shelves are old.
4. These boys should clean their fingernails.
5. Our parents said that we should be careful.

**Part B****MATCHING****5 marks****Match the problems in list B with the problems in list.****LIST A**

1. To get something \_\_\_\_\_
2. Gather \_\_\_\_\_
3. Leader of a group \_\_\_\_\_
4. Makes smaller \_\_\_\_\_
5. In place of \_\_\_\_\_

**LIST B**

- A. Instead
- B. Reduces
- C. President
- D. Collect
- E. Receives

**Part C****SORTING WORDS****6 marks (1/2 mk each)****Sort the words in the box into Nouns, Verbs, and Adverbs.**

run	tables	laugh	Loudly
dogs	sweetly	books	Jump
neatly	sing	quickly	Bags

**Nouns****Verbs****Adverbs**

_____	_____	_____
_____	_____	_____
_____	_____	_____
_____	_____	_____

**Part D****SPELLING****4 marks****Circle the correct spelling.**

1. Water                      woter                      wooter
2. Maneey                      money                      monney
3. Shool                      scool                      school

4. Teechers

teachers

teachar

**1075 LOVU SANGAM SCHOOL**  
**MATHEMATICS**

**TOTAL MARKS: 25**

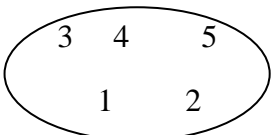
**YEAR: 4**

**NAME: \_\_\_\_\_**

**TIME: 60 MINUTES**

25

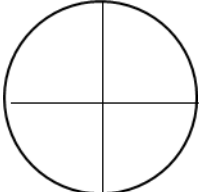
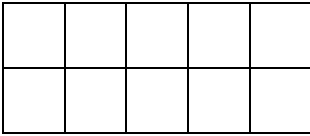
**Questions are 1 mark each**

	QUESTION	WORKING	ANSWER
	<b>Choose the correct sign for questions 1 - 2 ( &gt;, &lt; or = ) (4 marks)</b>		
1.	$10 - 5$ _____ $4 + 7$		
2.	$\frac{1}{2}$ _____ $\frac{1}{8}$		
	<b>Write TRUE or FALSE (3 - 5) ( 6 marks)</b>		
3.	$25 - 5 = 10 + 10$		
4.	$3 \times 6 = 21$		
5.	Set A      The cardinal number of Set A is 5. 		

**Fill in the blanks for questions 6- 20**

**(15 marks)**

6.	$\frac{1}{4}$ = _____ 8		-----
7.	$16 +$ _____ $= 21$		-----
8.	7 hundreds + 3 tens + 2 ones = _____		-----
9.	Complete the sequence 2, 4, 6 , 8, 10 , _____, 14		-----
10.	66 rounded off to the nearest tens is _____.		-----
11.	3 tens + 15 ones = _____		-----
12.	$\frac{8}{10}$ as a decimal fraction is _____		-----
13.	. Samu had 30 marbles. Sam gave him 18 marbles. How many		

marbles does he have altogether?		-----
14. 20 children paid 20c each as bus fare for a picnic. How much did they pay altogether?		-----
15.     2461 + 5338 _____		
16. 587 rounded to the nearest hundred is -----		
17. $\frac{6}{10} - \frac{3}{10} =$ _____		
18. Shade the fraction given below   $\frac{1}{2}$		
19. Solve: 3. 5 + 0.8 = _____		
20. Shade 0.3 of the following figure :  		

**SHORT TEST**

**Marks:25**

**HEALTH SCIENCE**

**Name:** \_\_\_\_\_

**Year 4**

**Section A: Fill In The Blanks. ( 5 marks )**

1. As boys and girls grow, there are some \_\_\_\_\_ happening in their bodies.
2. A \_\_\_\_\_ meal is a meal that consist of the right amount of food from the three food groups.
3. The longest bone in our body is called the \_\_\_\_\_.
4. The digestive process begins in the \_\_\_\_\_.
5. When we cough or sneeze, use a \_\_\_\_\_.

handkerchief	mouth	femur	balanced	changes
--------------	-------	-------	----------	---------

**Section B: True or False ( 5 marks )**

1. Brush your teeth after every meal. \_\_\_\_\_
2. The fresher the food, the better it is for our health. \_\_\_\_\_
3. We can get dalo from the butcher. \_\_\_\_\_
4. Water is important to the body. \_\_\_\_\_
5. You can suffer from typhoid if you drink water. \_\_\_\_\_

**SECTION C : MATCHING ( 5 marks )**

- |                       |     |              |
|-----------------------|-----|--------------|
| 1. Airborne disease   | ___ | A. cabbage   |
| 2. Vegetable          | ___ | B. measles   |
| 3. Dirty water        | ___ | C. river     |
| 4. Source of water    | ___ | D. fish      |
| 5. Body Building Food | ___ | E. dysentery |

**SECTION D** : Answer these questions. ( 5 marks )

1. How many bones are there in our body ?  
\_\_\_\_\_.
2. Name a food which you can plant at home.  
\_\_\_\_\_.

3. Name one source of drinking water.

\_\_\_\_\_.

4. Write down two home rules

\_\_\_\_\_

\_\_\_\_\_

**SECTION E** : Draw and colour. ( 5 marks )

Draw 3 types of exercise you do at home.

--	--	--

Draw 2 of your favorite fruit.

--	--

**1075 LOVU SANGAM SCHOOL**

**ASSESSMENT**

**HINDI**

YEAR: 40.....

NAME:.....

MARKS: ...../ 25

**पहला भाग: दिए गए शब्दों के बहुवचन लिखो ।**

5 marks

- |                  |                  |
|------------------|------------------|
| 1. लड़की - _____ | 2. कहानी - _____ |
| 3. मुछली - _____ | 4. रानी - _____  |
| 5. कपड़ा - _____ |                  |

**दूसरा भाग: भाषा अभ्यास**

(5 marks)

सही शब्दों से वाक्यों को पूरा करो ।

- |                           |                 |
|---------------------------|-----------------|
| 1. रमन _____ है ।         | दौड़ता / दौड़ती |
| 2. मौसी _____ गई ।        | चला / चली       |
| 3. पिताजी पाठशाला _____ । | जाएगी / जाएंगे  |
| 4. सरस _____ है ।         | खेलती / खेलता   |
| 5. माँ खाना _____ है ।    | खाता / खाती     |

**तीसरा भाग: इन शब्दों के विलोम शब्द लिखिए ।**

(5 marks)

- |                  |       |
|------------------|-------|
| १. सुबह - _____  | दिन   |
| २. लड़का - _____ | बाहर  |
| ३. अंदर - _____  | पतला  |
| ४. रात - _____   | शाम   |
| ५. मोटा - _____  | लड़की |

**चौथा भाग : इन शब्दों के समान अर्थ वाले शब्द लिखिए: (5 marks)**

- खाना \_\_\_\_\_
- लड़का \_\_\_\_\_
- धरती \_\_\_\_\_
- जानवर \_\_\_\_\_
- घर \_\_\_\_\_



पाँचवा भाग: सही शब्द चुन कर लिखो।  
( का, के, की, कि, को )

(5 marks)

१. माँ ने कहा ----- पिताजी आए हैं ।
२. शेर ----- बच्चे को मज़ा आया ।
३. नाना ----- पानी दो ।
४. शेर ----- बच्चा सो रहा था ।
५. सरस ----- माँ बीमार है ।

**LOVU SANGAM SCHOOL**

**SHORT TEST**

**I-TAUKEI**

YACAMU: \_\_\_\_\_

KALASI : 4

MAKA : /25

WASEWASE A : Tuvana vakadodonu na vosa era. ( 5 na maka )

1. loloba - \_\_\_\_\_
2. canini- \_\_\_\_\_
3. gucidu- \_\_\_\_\_
4. lacita- \_\_\_\_\_
5. gilavu- \_\_\_\_\_

WASEWASE B : Vola na vosa Veibasai. ( 5 na maka )

1. tabogo- \_\_\_\_\_
2. vagagalu- \_\_\_\_\_
3. vakaraitaka- \_\_\_\_\_
4. vakawaletaka- \_\_\_\_\_
5. makawa- \_\_\_\_\_

vou	qarauna	laurai	vosavosa	vunitaka
-----	---------	--------	----------	----------

WASEWASE C : Vakacavara na i yatu vosa. ( 5 na maka )

1. Keitou na \_\_\_\_\_  
\_\_\_\_\_.
2. A volia ko \_\_\_\_\_  
\_\_\_\_\_.
3. E dodonu me da \_\_\_\_\_  
\_\_\_\_\_.

4. Sa rui levu dina \_\_\_\_\_  
\_\_\_\_\_.
5. Ke levu na \_\_\_\_\_  
\_\_\_\_\_.

**WASEWASE D :** Na I wiliwili vaka – viti. ( 5 na maka )

1. 10 na tabua \_ \_\_\_\_\_
2. 10 na ibe- \_\_\_\_\_
3. 10 na masi - \_\_\_\_\_
4. 10 na vuaka - \_\_\_\_\_
5. 10 na vonu- \_\_\_\_\_

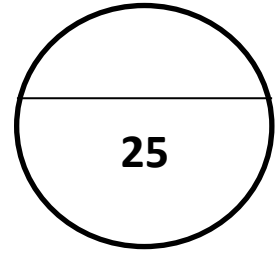
**WASEWASE E** : Tabaka ka rokataka mai e 5 na kakana ko sa bau tea tu e yasa ni vale. Vola talega na yacana. ( 5 na maka )

--	--	--	--	--

NAME: \_\_\_\_\_

YEAR: 4

**Section A**      **Multiple Choice**      (5marks)



**Read and Circle the best answer of the following questions**

1. A friend always \_\_\_\_\_ each other.

A. hate

B. fight

C. help

2. Those who live close to us are our \_\_\_\_\_.

A. neighbours

B. housegirl

C. enemies.

3. Children go to this place to learn.

A. church

B. shops

C. school.

4. The coming together of a man and a woman as husband and wife is known as \_\_\_\_\_.

A. wedding

B. birthday

C. hair-cutting

5. A Hindu festival also known as the festival of light.

A. Diwali

B. Holi

C. Christmas

**Section B****Matching****5 Marks**

**Match the problems in list B with the problems in list.**

**LIST A**

1. Butcher - \_\_\_\_\_
2. Doctor - \_\_\_\_\_
3. Fireman- \_\_\_\_\_
4. Policeman- \_\_\_\_\_
5. Teacher- \_\_\_\_\_

**LIST B**

- A. teach us in school
- B. help us in town
- C. stop the fire
- D. give us medicine
- E. cut the meat

**Section C****Fill In the Blanks****10 Marks**

**Fill in the blanks to complete the story.**

Hello! My name is \_\_\_\_\_.

I am \_\_\_\_\_ years old.

I am in year \_\_\_\_\_ and I attend \_\_\_\_\_.

My best friend is \_\_\_\_\_.

She/ He lives at \_\_\_\_\_.

My best friend goes to \_\_\_\_\_ school.

I like my best friend because \_\_\_\_\_.

My friend likes to \_\_\_\_\_.

When I grow up I want to be a \_\_\_\_\_.

**Section D****True or False****5 Marks**

**Write True or False in the space provided.**

1. Everyone in the family has a role to play. \_\_\_\_\_
2. All the people in the family are not related. \_\_\_\_\_
3. Respect your elders and people in the community. \_\_\_\_\_

4. We need to keep our environment clean and tidy. \_\_\_\_\_
5. Without rules everything will go wrong. \_\_\_\_\_

**1075 LOVU SANGAM SCHOOL**

**ASSESSMENT**

**ELEMENTARY SCIENCE**

Name: \_\_\_\_\_ Year: \_\_\_\_\_ Marks Attained: \_\_\_\_\_/25

**Section A Multiple Choice (10 marks)**

1. An example of a fossil fuel is \_\_\_\_\_.

- A. wind                      B. coal                      C. wave                      D. solar

2. \_\_\_\_\_ is the ability or fuel required to do something.

- A. Energy                      B. Permanent                      C. Source                      D. Sunlight

3. An electric toaster changes electricity to \_\_\_\_\_.

- A. generator                      B. electric                      C. mechanical                      D. heat

4. Which one of the following is the correct sequence of burning a wood.

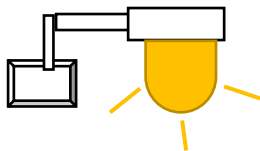
A. Ash     $\Longrightarrow$     Charcoal     $\Longrightarrow$     Firewood

B. firewood     $\Longrightarrow$     Charcoal     $\Longrightarrow$     Ash

C. Charcoal     $\Longrightarrow$     Firewood     $\Longrightarrow$     Ash

D. Firewood     $\Longrightarrow$     Ash     $\Longrightarrow$     Charcoal

5. Describe the correct energy transfer.



A. An electric toaster changes electricity to heat

B. A car engine changes fuel to mechanical energy.

C. An electric current changes electricity to light.

D. Chemical energy to electricity.

**SECTION B****SHORT ANSWERS**

1. Name four different sources of energy. (4 marks)

a. ----- b.-----

c.----- d. -----

2. Label the energy transformations correctly. The answers are given in brackets.  
(10 marks)

a) Hydroelectric dams ( \_\_\_\_\_ energy – \_\_\_\_\_ energy).  
( electric / stored)

b) Electric generator ( \_\_\_\_\_ work – \_\_\_\_\_ energy).  
(mechanical / electric)

c) Battery (electricity) ( \_\_\_\_\_ energy – \_\_\_\_\_ energy).  
(electric / mechanical)

d) Fire ( \_\_\_\_\_ energy- \_\_\_\_\_ )  
(heat and light/ chemical)

e) Wave power ( \_\_\_\_\_ energy – \_\_\_\_\_ energy)  
(electric/ mechanical)

3. List one way you can conserve energy at home. (1 mark)

\_\_\_\_\_  
\_\_\_\_\_

THE END.....