

1075 LOVU SANGAM SCHOOL
ASSESSMENT ONE – YEAR 6
ENGLISH

MARKS: 50

NAME: _____

SECTION A

COMPREHENSION PASSAGE

(5M)

Read the passage carefully and circle the correct answer.

The Cunning Fox and the Stupid Crow

One morning, a dirty black crow stole a piece of meat from a butcher. She took the meat in her beak and flew away. Later, she stopped and perched on a branch to enjoy her meal.

A hungry fox happened to be passing by. He saw the crow with the meat. He thought of a plan to steal the meat from the crow.

He said to the crow, “You are such a beautiful bird. If your voice is as fine as your looks, you could be the Queen of all birds.”

The crow wanted to be the queen, so she opened her beak to make a sound. The piece of meat fell from her beak. The fox snatched up the meat and said. “You silly bird. You really think that you could be the Queen of all birds? Don’t believe everything that you hear!”

1. The crow stole the meat from a _____.
A. hunter B. butcher C. cobbler D. fisherman
2. The crow stopped on a _____ to eat the meat.
A. bridge B. box C. branch D. hut
3. A hungry _____ saw the crow with the meat.
A. goat B. cow C. tiger D. fox
4. The piece of meat fell when the crow _____.
A. opened her beak B. flew away
C. began to jump D. fell down
5. Finally, who ate the meat?
A. The goat B. The crow C. The fox D. The tiger

SECTION B

GRAMMAR

(10m)

Circle the letter of the correct answer

1. I _____ anything since breakfast and I am very hungry.
A. don’t eat B. didn’t eat
C. hadn’t eat D. haven’t eaten
2. If I had enough money, I _____ buy an ice cream.
A. can B. will C. may D. would

3. The baby was born _____ the Lautoka Hospital.
A. at B. for C. on D. from
4. In the word “impolite”, **im** means
A. bad B. not C. one D. often
5. The harbor is very shallow. They’ll have to _____ it to allow big ships to use it.
A. deep B. deeper C. deepen D. deepening
6. Jone, who was shy, was unwilling to answer questions. The word **unwilling** means
A. impatient B. expectant C. not eager D. not anxious
7. Roslyn was careless and broke the cup. Her mother scolded her for her _____.
A. care B. careless C. carefulness D. carelessness
8. Sikeli is rude. His brother Apete is the opposite .Apete is _____.
A. polite B. rudely C. impolite D. rudeness
9. Which of the following is **NOT** spelt correctly?
A. carrot B. cabbage C. pumpkein D. cucumber
10. She was here a minute ago but then she _____. I don't know where she went.
A. appear B. lost C. disappeared D. gone

SECTION C **Preposition-Write down one word for each blank space.** (5M)

1. Rani paid _____ the fish and left.
2. Mere’s mother was angry _____ her.
3. Joape was frightened _____ the shark.
4. Sera speared a big fish and put it _____ his boat.
5. He had a lovely time _____ the beach.

SECTION D **SENTENCE COMPLETION** -Use 5 more words to complete the sentence.(5m)

1. Yesterday my friend went_____
2. Tomorrow we _____
3. The blind man _____
4. During the holidays_____
5. I wish _____

SECTION E **Fill in the blanks using a suitable word** **(10M)**

Trees _____ important for our survival as well as the ecosystem. Without trees, life would not have been possible. Trees provide us _____ two of life's most crucial components – oxygen and food. As we evolved, we _____ harvesting trees for medicine, shelter and other commercial uses. Even today, our dependence _____ trees has not reduced. In fact, we are ever more dependent on trees than ever. Our needs _____ so high that we have started cutting down huge swaths of forests for the expansion of human land.

SECTION F **LETTER WRITING** **(10M)**

Your name is Ravin if you are a boy or Sera if you are a girl. Complete this letter to your friend Meli or Helen who lives in Australia by putting in the appropriate words. Choose from the list below.

Dear team which August an our Your from in give

Nuku Primary School

Nukuloa

Ba

20th _____ 2021

_____ Meli/ Helen

Hello again. I hope you are well. Thank you for your last letter _____ I received a week ago.

I am enjoying school a lot. We are having _____ annual athletic sports soon. I'll be taking part _____ the boys/girls' 50 meters' sprint and I'm in my class relay _____.

We had a visit last month _____ a policeman. He talked to us about _____ safety and about studying hard at school.

Please write again soon and _____ my regards to your family.

_____ friend

Ravin/ Sera

SECTION G

POETRY

(5M)

Read the poem below and answer the question that follows.

The Cough

There was a man, who coughed a cough,
a cough so strong his head fell off.
His head fell off. It hit the ground.
It hit the ground and rolled around,
and rolled around and rolled away,
away into a field of hay,
a field of hay that caused a wheeze,
a wheeze that turned into a sneeze,
a sneeze he sneezed from dusk till dawn.
At dawn he sneezed his head back on.

Kenn Nesbitt

Questions

1. Who is the poet?

_____ (1M)

2. Describe **one** action the man carries out in the poem.

_____ (1M)

3. From the poem, write down **two** pairs of rhyming words.

_____ (2M)

4. What caused the wheeze in the poem?

(1M)

THE END


1075 LOVU SANGAM SCHOOL
ASSESSMENT ONE – YEAR 6
MATHEMATICS

MARKS: 50

NAME: _____

SECTION A: Multiple choice. (20 marks)

Write the **letter** of the best answer in the answer column. Each question is worth 2 marks.

No	Question	Working	Answer
1.	Identify the pattern in the given sequence. 7, 17, 27, 37, 47, 57 A. + 7 C. + 10 B. – 10 D. x 2		_____
2.	Which numbers complete the pattern correctly? 4, 8, 12, 16, _____, _____ A. 20, 25 C. 19, 24 B. 20, 24 D. 28, 28		_____
3.	$5k + 3k =$ _____ A. 2k C. 3k B. 7k D. 8k		_____
4.	1 centimetre = _____ millimetres A. 10mm C. 100mm B. 5mm D. 20mm		_____
5.	<div style="text-align: center;"> 4cm  2cm </div> <p>Find the perimeter of the above rectangle.</p> A. 12cm C. 6cm B. 8cm D. 4cm		_____
6.	Calculate the percentage. 50cm of a metre. A. 5% C. 100% B. 50% D. 10%		_____
7.	$45\text{cm}^3 =$ _____ ml A. 40ml C. 45ml B. 4.5ml D. 50ml		_____
8.	$2\frac{1}{2}\text{ kg} =$ _____ grams A. 2000 C. 250 B. 2500 D. 500		_____


9.	Convert 8.45pm to 24 hour time. A. 0845 hours C. 8.45 hours B. 245 hours D. 2045 hours		_____
10.	Esther left her home at 6.30am and reached school at 7.45am. How long did she take to reach school? A. 1 hour B. 1 hour 30 minutes C. 1 hour 45 minutes D. 1 hour 15 minutes		_____

Section B: Read the instructions for each question carefully before answering them. Write the answers in the answer column.


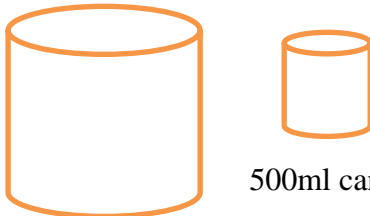
Question 1 - answer questions a to j. Each question is worth 1 mark. (Total marks: 10)

	Use <, > or = for questions a to e		
a	$\frac{1}{2}$ kg _____ 250g		_____
b	5ml _____ 5cm^3		_____
c	10L _____ 1000ml		_____
d	1hour _____ 120minutes		_____
e	3cm _____ 30ml		_____
	Write True or False for questions f to j		
f	3, 7, 11, 15, 19 The pattern is add 4 .		_____
g	$\frac{1}{4}$ kg = 500g		_____
h	Average speed = distance \div time		_____
i	2.00pm = 1400 hours		_____
j	1 year = 50 weeks		_____

Question 2 – 5: There are 4 questions. 2marks each. (Total mark: 8)

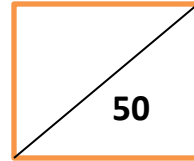
	Question	working	Answer												
	Question 2 Study the pattern below. <table border="1"><tr><td>A</td><td>3</td><td>9</td><td>7</td><td>5</td><td>11</td></tr><tr><td>B</td><td>2</td><td>5</td><td>4</td><td>—</td><td>—</td></tr></table>	A	3	9	7	5	11	B	2	5	4	—	—		A. _____ B. _____ _____
A	3	9	7	5	11										
B	2	5	4	—	—										
A	Find the rule.														
B	Complete the pattern using the rule.														
	Question 3 Solve for the unknown value. r + 6 = 18		r = _____												
B	2 x (a +3) = 10		a = _____												
A	Question 4 Convert the time to 12 hour clock. 1350 hours		A. _____												
B	Convert the time to 24 hour clock. 6.30am		B. _____												
	Question 5 <div><div>3cm</div><div></div><div>Find the area of this square. Write the Area using the correct Unit.</div></div>		_____												

Questions 6 to 9- Each question is worth 3 marks. (Total mark- 12)

	<p>Question 6 This is Kim's rectangular garden.</p> <div data-bbox="301 282 612 396"><div>10m</div><div>5m</div></div> <p>A What is the perimeter of Kim's garden?</p> <p>B If Kim runs twice around his garden, how many metres will he run?</p> <p>C Find the area of the garden.</p>		<p>A. _____</p> <p>B. _____</p> <p>C. _____</p>										
<p>A</p> <p>B</p>	<p>Question 7</p> <div data-bbox="288 819 671 1081"><div>20 litre tank</div><div>500ml can</div></div> <p>A 20 litres is equal to how many Millilitres?</p> <p>B How many 500ml cans can be filled From a 20 litre tank?</p>		<p>A. _____</p> <p>B. _____</p>										
<p>A</p> <p>B</p>	<p>Question 8 Refer to the year 6 afternoon timetable to answer the questions below.</p> <table border="1" data-bbox="261 1525 764 1720"><tr><td>12.00pm</td><td>Lunch</td></tr><tr><td>12.45pm</td><td>Hindi</td></tr><tr><td>1.45pm</td><td>Science</td></tr><tr><td>2.30pm</td><td>Duties</td></tr><tr><td>2.45pm</td><td>Assembly</td></tr></table> <p>A How long is Hindi lesson?</p> <p>B How long is Science lesson?</p>	12.00pm	Lunch	12.45pm	Hindi	1.45pm	Science	2.30pm	Duties	2.45pm	Assembly		<p>A. _____</p> <p>B. _____</p>
12.00pm	Lunch												
12.45pm	Hindi												
1.45pm	Science												
2.30pm	Duties												
2.45pm	Assembly												

	<p>Question 9 The Lautoka General bus leaves Lautoka at 2.00pm and reaches Suva at 6.00pm covering a distance of 280km.</p>		<p>A. _____</p> <p>B. _____</p> <p>_____</p>
A	How long did it take the bus to reach Suva? Answer in hours.		
B	Find the average speed of the bus. Answer in km/ hour.		

THE END



NAME: _____

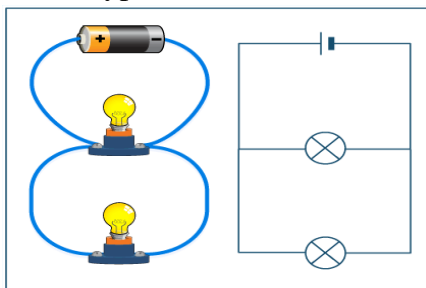
YEAR: 6

MARKS: _____

SECTION A: MULTIPLE CHOICE (10MARKS)

Circle the best option.

1. The area of the eye that contains the pigment is known as _____.
A. Iris B. Lens C. Pupil D. Cornea
2. Which equipment is used to measure the temperature?
A. Cylinder B. Thermometer C. Tripod stand D. Beaker
3. Which process involves gas to cool and form into liquid?
A. Evaporation B. Freezing C. Condensation D. Melting
4. Name an instrument that is used to show the direction on the map?
A. Key B. scale C. title D. compass
5. What causes conflict in a relationship?
A. Respect B. Polite C. Jealousy D. Truthfulness
6. An example of cultural environment is _____.
A. Sea B. River C. Hill D. Road
7. Which type of circuit is shown below?



- A. Simple circuit B. Series circuit C. Open circuit D. Parallel circuit
8. The money which you earn for the work done is known as _____.
A. Expenses B. Savings C. income D. Expenditure
9. What is placed on the eyelids to prevent puffiness?
A. Apples B. cucumber C. beans D. pumpkin
10. Which is a non-renewable source of energy?
A. Gas B. Solar C. wave D. wind

SECTION B: TRUE OR FALSE (5MARKS)

1. Hydro power is generated using the turbines. _____
2. We must take care of the resources. _____
3. A first aid is a necessary item to be kept during natural disaster. _____
4. The Eustachian tube directs the sound to the ear canal. _____
5. Lines running east- west across the map is called longitude. _____

SECTION C: FILL IN THE MISSING BLANKS (5MARKS)

Use the words given below to complete the sentences.

1. The _____ blows from south east direction in Fiji.
2. Natural environment has _____ features.
3. Harmful _____ can cause damage to human brain.
4. Plants need _____ gas to grow.
5. The _____ box is used to test if the circuit is a complete or not.

Carbon dioxide	Octopus	Physical	Trade winds	Substances
----------------	---------	----------	-------------	------------

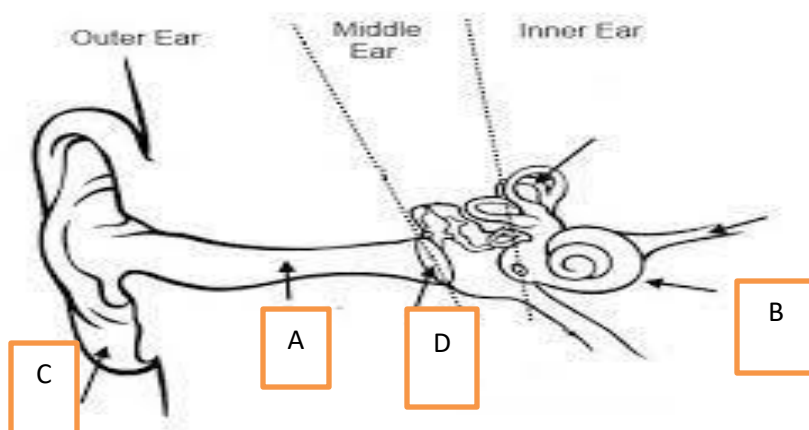
SECTION D: MATCHING (5 MARKS)

Match column A with column B by writing the letters in the space.

- | | |
|---------------------------|---|
| 1. Emergency Number _____ | A. substances formed after a chemical change. |
| 2. Fracture _____ | B. May to October |
| 3. Convex lenses _____ | C. is a cracking of bones. |
| 4. Products _____ | D. 919 |
| 5. Dry Season _____ | E. these are thicker in the centre. |

SECTION E: LABELLING (15MARKS)

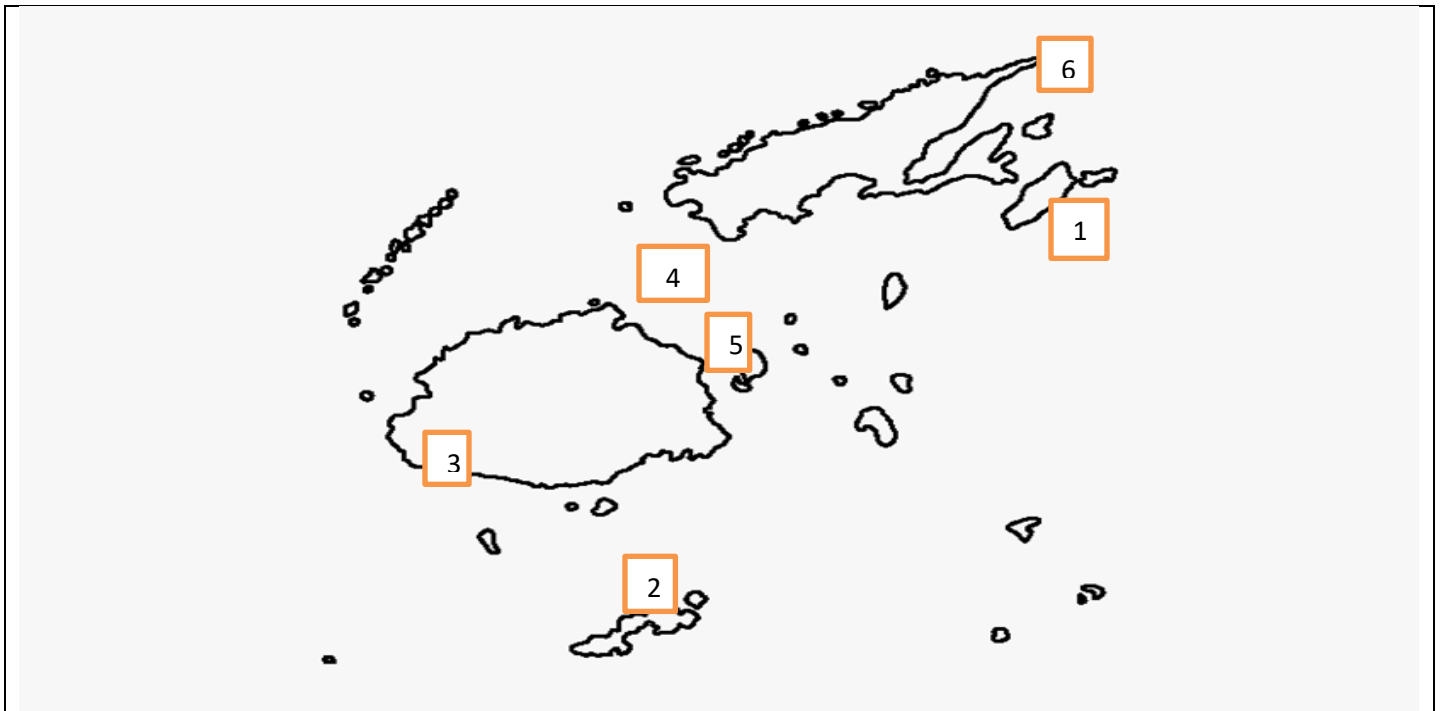
Label the diagram correctly. (4 MARKS)



- A- _____
- B- _____
- C- _____
- D- _____

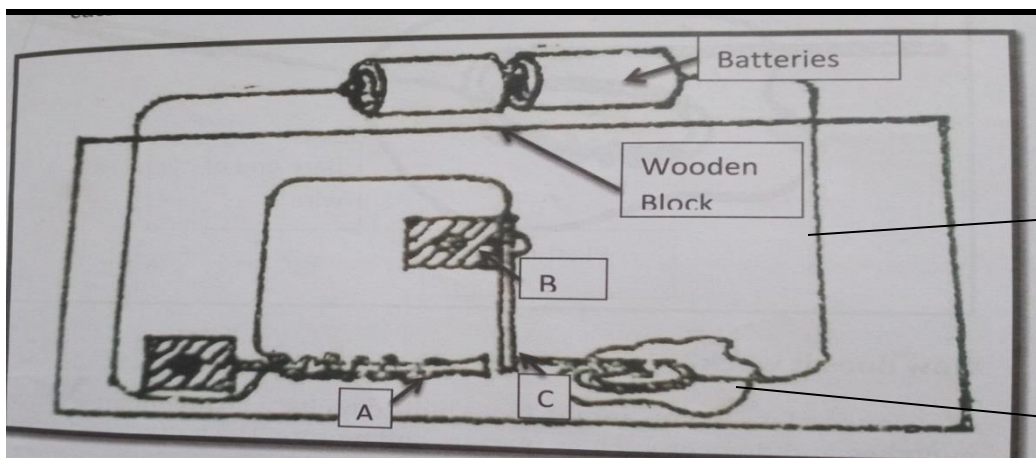
Mapping (6marks)

Identify and write the places using the map



1. Famous for Tagimouci flower- _____
2. Turtle calling island- _____
3. Sand Dunes- _____
4. A passage- _____
5. Old capital of Fiji - _____
6. Point- _____

Label the diagram using the words given below. (5 marks)



A- _____

C- _____

B- _____

D- _____

E- _____

Copper wire	Contact	Electromagnet	Vibrator	Plasticine
-------------	---------	---------------	----------	------------

SECTION E: SHORT ANSWER QUESTIONS (10MARKS)

1. Give one advantage of renewable energy.

2. List 2 examples where electromagnets are found.

3. What should you do after any natural disaster?

4. How can you take care of your eyes?

5. How can you conserve the resources?

6. List 2 items you will find in First Aid Kit.

7. What is one drawback of series circuit?

8. Give 2 examples of natural material.

9. How people are misusing the resources?

10. Name 2 sea and water activities provided to tourists in Fiji.

पहला भाग

बोधन

(अंक १०)

अ. नीचे दिए गए बोधन खण्ड को ध्यान से पढ़कर प्रश्नों को हल कीजिए ।

न देने वाला मन

एक भिखारी सुबह-सुबह भीख माँगने निकला । चलते समय उसने अपनी झोली में चावल के मुट्ठी भर दाने डाल लिए । टोटके या अंधविश्वास के कारण भिक्षाटन के लिए निकलते समय भिखारी अपनी झोली खाली नहीं रखते । थैली देख कर दूसरे को लगता है कि इन्हें पहले से किसी ने भिक्षा दे रखी है । पूर्णिमा का दिन था, भिखारी सोच रहा था कि आज ईश्वर की कृपा होगी तो मेरी यह झोली शाम से पहले ही भर जाएगी ।

अचानक सामने से राजपथ पर उसी देश का राजा की सवारी दिखाई दी। भिखारी खुश हो गया । उसने सोचा, राजा के दर्शन और उनसे मिलने वाले दान से सारे दरिद्र दूर हो जाएँगे, जीवन संवर जाएगा । जैसे-जैसे राजा की सवारी निकट आती गई, भिखारी की कल्पना और उत्तेजना भी बढ़ती गई । जैसे ही राजा का रथ भिखारी के निकट आया, राजा ने अपना रथ रूकवाया, उतर कर उसके निकट पहुँचे। भिखारी की तो मानो सांसे ही रूकने लगी । लेकिन राजा ने उसे कुछ देने के बदले उलटे अपनी बहुमूल्य चादर उस के सामने फैला दी और भीख की याचना करने लगे ।

भिखारी को समझ नहीं आ रहा था कि क्या करे । अभी वह सोच ही रहा था कि राजा ने पुनः याचना की। भिखारी ने अपनी झोली में हाथ डाला, मगर हमेशा दूसरों से लेने वाला मन देने को राजी नहीं हो रहा था । जैसे-तैसे कर उसने दो दाने चावल के निकाले और उन्हें राजा के चादर पर डाल दिया । उस दिन भिखारी को रोज से अधिक भीख मिली, मगर उन दो दानों का मलाल उसे सारा दिन रहा । शाम को जब उसने झोली पलटी तो उसके आश्चर्य की सीमा न रही । जो चावल वह ले गया था, उसके दो दाने सोने के हो गए थे । उसे समझ में आया कि यह दान की ही महिमा है । वह पछताया कि काश ! उस समय राजा को और अधिक चावल दिया होता, लेकिन नहीं दे सका, क्योंकि देने की आदत जो नहीं थी । - भारत दर्शन

प्रत्येक प्रश्न के चार उत्तर दिए गए हैं । बोधन खण्ड के अनुसार सही जवाब के बगल वाले अक्षर पर गोलाकार निशान बनाइए ।

प्रश्न

१. भिखारी भिख मागने किस समय निकला?

क. रात में ख. सुबह-सुबह ग. दिन में घ. शाम को

२. भिखारी ने अपनी झोली में क्या डाला ?

क. पैसे ख. चावल के मुट्ठी भर दाने ग. कपड़े घ. आटा

३. भिक्षाटन के लिए निकलते समय भिखारी अपनी झोली खाली क्यों नहीं रखते ?

क. लोगो को बाटने के लिए ख. बेचने के लिए
ग. खाने के लिए घ. टोटके या अंधविश्वास के कारण

४. भिखारी किस दिन भीख माँगने को निकला ?

क. सोमवार को ख. अमावस के दिन ग. मंगलवार को घ. पूर्णिमा के दिन

५. राजा को देख भिखारी ----- ।

क. खुश हो गया । ख. नाराज़ हो गया ।
ग. डर गया । घ. निराश हो गया ।

६. भिखारी की सांसे क्यों रुकने लगी ?

क. अधिक खुशी से । ख. नाराज़ होने पर ।
ग. डर जाने पर । घ. निराश होने पर ।

७. राजा ने भिखारी को क्या दिया ?

क. रुपया ख. बहुमूल्य चादर ग. सोना घ. कुछ भी नहीं ।

८. भिखारी ने राजा को देने में क्यों सोच कर रहा था ?

क. भिखारी लालची था । ख. लेने वाला मन देने को राजी नहीं हो रहा था ।
ग. राजा अमीर था । घ. राजा लेना नहीं चाहता था ।

९. भिखारी ने राजा को क्या दिया ?

क. कुछ भी नहीं । ख. बहुमूल्य चादर ग. सोना घ. दो दाने चावल

१०. इस पाठ से हमें क्या शिक्षा मिली ?

- क. भीख माँगना ठीक है
- ख. दान करना चाहिए
- ग. दान नहीं करना चाहिए
- घ. हमेशा भीख माँगते रहना चाहिए

भाग २

व्याकरण और प्रयोग

(अंक २०)

अ. दिए गए शब्दों में से सही शब्द चुनकर इन वाक्यों को पूरा कीजिए ।
सही जवाब के बगल वाले अक्षर पर गोलाकार निशान बनाइए ।

1. क्या तुम उस अदमी ----- जानते हो ?

- क. का ख. को ग. के घ. की

2. मुझे ----- पानी चाहिए ।

- क. ठंडा ख. ठंडी ग. ठंड घ. ठंडे

3. ----- घड़ी को ठीक कराओ ।

- क. उन ख. उन्हें ग. उस घ. उसे

4. सही वाक्य चुनकर लिखो:

- क. बच्चा रोते है ।
ख. बच्चा रोती है ।
ग. बच्चा रोता है ।
घ. बच्चा रोना है ।

5. इन में से किस शब्द की वर्तनी सही है ?

- क. किटाणु ख. कीटाणु
ग. किटाणू घ. कीटाणू

आ. - इन के समान अर्थ वाले शब्द लिखिए ।

१. हमेशा - -----

२. खुशबू - -----

३. नेक - -----

४. तंदुरुस्त - -----

५. ज्यादा - -----

६. लाभदायक - -----

७. फूल - -----

८. परिश्रम - -----

९. भोजन - -----

१०. आँख - -----

खाना	अधिक	अच्छा	रोज	पुष्प	सुगंध	फायदेमंद
	मेहनत	नेत्र	स्वस्थ			

इ. - नीचे दिए गए वाक्यों में मुहावरों का प्रयोग हुआ है । सूची में से मुहावरे का सही अर्थ चुन कर लिखिए ।

१. उसने अपने भाई पर हाथ उठाया । -----

२. सरला की बेटी ने उसका कान भरा । -----

३. खिलाड़ी मैदान छोड़ दिए । -----

४. राम की गाड़ी आपे से बाहर हो गई । -----

५. मेरी बेटी मेरे आँखों का तारा है । -----

क. अति प्रिय	ख. पीटना
ग. भाग जाना	
घ. शिकायत करना	ड. काबू से बाहर होना

भाग ३: अंक - १०

अ. सही जवाब को चुन कर मेल कीजिए । सही अक्षर को नीचे रेखा पर लिखिए ।

भाग एक		भाग दो	
1.	राजा दशरथ	क	श्री कृष्ण की प्रेमिका
2.	शिष्टाचार	ख	गिरजाघर में प्रार्थना करते हैं

3.	इसाई	ग	भाई-बहन का त्योहार है
4.	राखी	घ	अच्छा अचार-विचार
5.	राधा	ङ	अयोध्या का राज्य देखने वाला

1. _____

2. _____

3. _____

4. _____


5. _____

आ; इन चित्रों का नाम लिखो ।



१

. _____



२. _____

३. _____



४. _____



५. _____

कमल, मंदिर, रंगोली, झाड़ू, ओअम



भाग 8: पत्र - लेखन अंक - १०

तुम्हारा नाम शीला / राम है । तूम् काश्मीर , लौतोका मे रहती/रहते हो । पत्र लिखकर अपने मित्र को परीक्षा में सफलता पर बधाई दो।

काश्मीर
लौतोका

प्रिय दीपक

.....

तुम्हारा पत्र कल शाम को ----- । यह जान कर हम बहुत ----- हुए कि तुम ने परीक्षा मे शानदार सफलता प्राप्त ----- है । ----- कठिन परिश्रम का यह फल है । हम सब की ओर से बहुत बहुत ----- हो ।

इन शब्दों के प्रयोग से पत्र पूरा कीजिए ।

तुम्हारा/ तुम्हारी, मित्र/ सहेली, मिला, की, तुम्हारा, बधाई
नमस्ते, १५ अगस्त २०२१, खुश, राम/ शीला

1075 LOVU SANGAM SCHOOL

YEAR 6 STUDY PACKAGE

I-TAUKEI SHORT TEST WK 8

YACAMU: _____

MAKA: ____/50

Wasewase A: Wirica na sauni taro dodonu.

(15 na maka)

1. Ni _____ na vai e cabe e na nona veitosoyaki.
A. ece B. nunu C. lobe D. lade
2. Ni dua e _____ e veilecayaki na ka e cakava.
A. qasi B. maqosa C. tavaiyaya D. makutu
3. E dodonu mada dau _____ ta kei na.
A. lasutaki B. dredrevaki C. rokovi D. vakalolomataki
4. Na yanuyanuku ko Viwa e wili e na _____.
A. Yatu Yasawa B. Yatu Lau C. Lomaiviti D. Yatu Lau
5. Na masima e kau mai _____.
A. veikau B. waitui C. qele D. waidroka
6. Na _____ e manumanu levu taudua e na loma ni wasawasa.
A. qio B. kuita C. tavuto D. qari
7. Ni _____ e dua na yalewa, e na vosaki me watina e dua na tagane.
A. danisi B. duguci C. tagi D. vakasucu
8. 10 na waqa ni Viti sa dua na _____.
A. kumakumare B. laca C. uduudu D. rara
9. 10 na qio sa dua na _____.
A. kumakumare B. laca C. uduudu D. rara
10. Na _____ e dau vakayagataki me tali kina na ibe.
A. voivoi B. isulu C. wa D. drau ni niu
11. E dau vakasavu itukutuku vei ira na lewe ni koro ko _____.
A. turaga B. matanivanua C. gonedau D. marama

12. Na _____ e vakaibalebaletaki ki na gone ka qai sucu koto.
 A.vulagi B.vakawati C.lakovi D.yalewa
13. Ni dua e _____ e na yavavala na yagona e na levu ni rere se liliwa.
 A.sautaninini B.marau C.via kana D.oca
14. Sa duatani na noqu _____ e na noqu siga ni sucu.
 A.marau B.marautaki C.marautaka D.veimarataki
15. Sa kana _____ dina na dalo qo.
 A.vinakata B.vinaka C.vinakati D. vakavinavinaka

Wasewase B: Vosa tautauvata

(7 na maka)

- | | | |
|----------------|-------|---------------|
| 1.vakasavui | _____ | A. tabua |
| 2.kamunaga | _____ | B. keveti |
| 3.kumukumuni | _____ | C. tukuni |
| 4.marau | _____ | D.vakavale |
| 5.vakawatitaki | _____ | E.sosoqoni |
| 6.roqoti | _____ | F. reki |
| 7.tama | _____ | G. vakadonuya |

Wasewase C: Vosa veibasai

(7 na maka)

- | | | |
|-------------|-------|----------------|
| 1.cabe | _____ | A. sakasaka |
| 2.cagi donu | _____ | B. siro |
| 3.rakorako | _____ | C. cagi leca |
| 4.uru | _____ | D.tevu |
| 5.lomaloma | _____ | E.viri |
| 6.cece | _____ | F.daku ni tuba |
| 7.ciqa | _____ | G.vakarewa |

Wasewase D: Vakacuruma na sauni taro dodonu e na vanua lala toka e ra. (10 na maka)

matanicagi	qoliqoli	bati	dromu	oleole
veidabui	tevutevu	cudruvi	vakameregeti	takona

- 1.E dau vakayagataki na _____ me caka kina na vakalolo.
- 2.E _____ tiko o Jone baleti ni kati koya na koli.
- 3.E na gauna makawa e ra dau vakayagataka na _____ na noda qase e na gauna ni vakatasosoko.
- 4.Na tamata dau _____ e sega ni dau dinata na ka e cakava.
- 5.E a _____ na Rogovoka e na wasawasa titobu.
- 6.Na tabua sa dua na iyau _____ vei keda na i-Taukei.
- 7.Na i _____ sai koya na tiki ni baravi se uciwai e dau qolivi kina na ika se vivili.
8. Na _____ e dau vakayacori e na gauna ni vakamau e na kena soqoni na iyaya ni vale nodrau na veiwatini vou.
- 9.Na nodra i tavi na _____ me taqomaki na turaga kei na vanua.
- 10.Kakua ni dau _____ ira na qase se o ira na tamata malumalumu.

Wasewase E: VosaVakaviti

(6 na maka)

Vakamacalataka mai na ibalebale ni vosa vaka-Viti toqai toka e ra.

1.Tabailago

_____.

2.Cakau ni kamunaga

_____.

3.Ucu mai duru

_____.

Wasewase F: Droinitaka e 3 na i yaya vaka-Viti e caka mai na vunika/kau (5 na maka)

--	--	--

