

2036 Penang Sangam Primary School
Year 6
English
Worksheet 11 Solution

Activity: 1

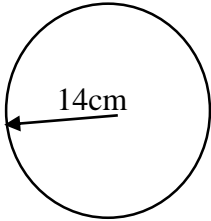
Complete the table below.

1. Quick	Quicker	Quickest
2. Fast	Faster	Fastest
3. Slow	Slower	Slowest
4. Beautiful	More beautiful	Most beautiful
5. Exciting	More exciting	Most exciting
6. Little	Less	Least
7. Bad	Worse	Worst
8. Dangerous	More dangerous	Most dangerous

Activities

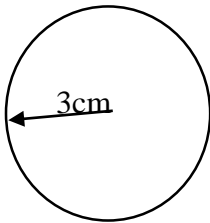
1. Calculate the area of these circles.

a.



$$\begin{aligned}A &= \pi \times r \times r \\&= \frac{22}{7} \times 14^2 \times 14 \\&= 22 \times 2 \times 14 \\&= 44 \times 14 \\A &= \mathbf{616\text{cm}^2}\end{aligned}$$

b.



$$\begin{aligned}A &= \pi \times r^2 \\&= \pi \times r \times r \\&= 3.14 \times 3 \times 3 \\&= 3.14 \times 9 \\A &= \mathbf{28.26\text{cm}^2}\end{aligned}$$

Activities

1. **First Aid is the first help or care given to an injured or sick person before the arrival of a doctor.**
2. Any 8 from these contents of First Aid Kit.

<ul style="list-style-type: none">❖ Plasters❖ Small, medium and large sterile gauze dressings.❖ Triangular bandages.❖ Bandages.❖ Safety pins.❖ Disposable sterile gloves.❖ Tweezers.	<ul style="list-style-type: none">❖ Scissors.❖ Thermometer.❖ Cream or spray to relieve insect bites and stings.❖ Antiseptic cream.❖ Painkillers such as paracetamol.❖ Cough medicine.❖ Distilled water for cleaning wounds.
---	--

Questions and Answers

१) भारत किस उम्र में पाठशाला में भर्ती हुआ ?

भारत पाँच साल की उम्र में पाठशाला में भर्ती हुआ ।

२) भारत का देख भाल किसने किया था ?

भारत का देख भाल उसके मामा मामी ने किया ।

३) अध्यापक उसकी क्यों प्रशंसा करते थे ?

अध्यापक उसकी प्रशंसा इसलिए करते थे क्योंकि वह पढ़ने में तेज़ था और अपनी कक्षा में प्रथम आता था ।

४) अनाथ का मतलब क्या है ?

अनाथ उसको कहते हैं जिनके माता पिता नहीं होते हैं ।

५) भारत कितने सालों तक उस पाठशाला में पढ़ता रहा ?

भारत आठ सालों तक उस पाठशाला में पढ़ता रहा ।

2036 Penang Sangam Primary School
Elementary Science
Year 6
Worksheet 11 - Solution

Questions and Answers

1. A simple circuit requires **three** things in order to function.
2. List down the three things required by a simple circuit.

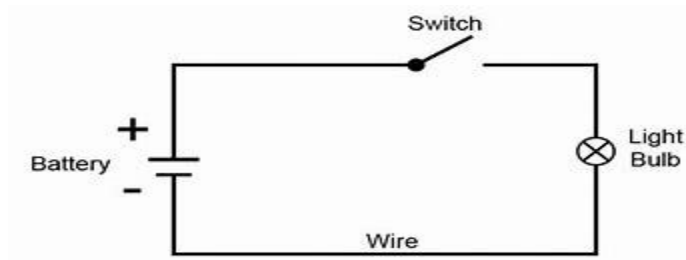
-A source of electrical power. (typically a battery or electrical outlet)

-A conductive path which would allow for the movement of charges. (typically made of wire)

-An electrical resistance (resistor) which is loosely defined as any object that uses electricity to do work. (a light bulb, electric motor, heating element, speaker, etc.)

3. List down two places/objects where simple circuit exist.
Torches, doorbells, and many kitchen appliances

4. Draw and label a simple circuit.



2036 PENANG SANGAM PRIMARY SCHOOL

YEAR 6

NA VOSA VAKAVITI

WORKSHEET 11 – SOLUTION

Cakacaka lavaki

Sauni taro:

1. solia na dra bulabula
2. koda – vasua, ika, kaikoso
Vakasoso – vudi dreu

2036 Penang Sangam Primary School
Elementary Science
Year 6
Worksheet 11 - Solution

Questions and Answers

1. A simple circuit requires **three** things in order to function.
2. List down the three things required by a simple circuit.

-A source of electrical power. (typically a battery or electrical outlet)

-A conductive path which would allow for the movement of charges. (typically made of wire)

-An electrical resistance (resistor) which is loosely defined as any object that uses electricity to do work. (a light bulb, electric motor, heating element, speaker, etc.)

3. List down two places/objects where simple circuit exist.
Torches, doorbells, and many kitchen appliances

4. Draw and label a simple circuit.

