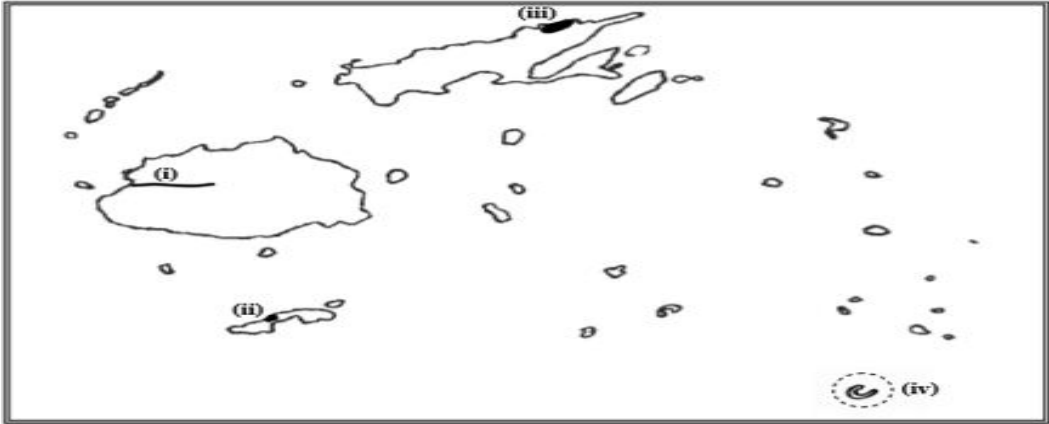




SUVA SANGAM COLLEGE

YEAR 12

GEOGRAPHY

WORKSHEET 9

QTN NO.	QUESTION DESCRIPTION
1	<p>MAPPING</p> <p>i. Use the map of Fiji given below and your own knowledge to identify the features marked (i) to (iv) that are described as follows:</p> <ul style="list-style-type: none">(i) river that is prone to flooding.(ii) climate station.(iii) hazard that affects people of this area.(iv) island which experiences water shortages. 
2	<p>SHORT ANSWER QUESTION</p> <p>i. Define Natural Hazard. (1 mark)</p> <p>ii. Differentiate between a Hazard and a Disaster. (2 marks)</p>
3	<p style="text-align: center;">RESOURCE INTERPRETATION QUESTIONS</p> <div style="display: flex; justify-content: space-around;"></div> <p style="text-align: center;"><small>Source: Development and Underdevelopment by G. Nagle, 1998.</small></p> <p>(i) Differentiate between the farming methods shown in the photographs above. (2 marks)</p> <p>(ii) State two effects of any one of the farming methods shown above. (2 marks)</p>