

1076 NADI SANGAM SCHOOL

WEEKLY HOME STUDY PACKAGE #9 (Solution)

Review Test

SUBJECT : English

YEAR/ LEVEL : 3

Marks 15

Name _____

Activity 1 (5 Marks)

Underline the Preposition in each sentence.

1. We played in the ground.
2. Mr Kumar went to Ba.
3. My mum works with your sister.
4. The flower is in the vase.
5. The ball is under the table.

Activity 2 (2 Marks)

Join these sentences using **because**.

1. We played in the shade. It was hot.

We played in the shade **because** it was hot.

2. We could not go shopping. It was raining.

We could not go shopping **because** it was raining.

Activity 3 (8 Marks) Read the Poem and answer the questions below.



Questions

1. What is the Poem about ?

The poem is about going back to school.

2. A word that rhymes with ‘ **more** ’ .

Before

3. Three words that starts with the letter ‘ **s** ’ in the Poem.

School

See

Summer

4. Why do you go to school ?

I go to school to learn.

5. How do you go to school ?

Students answers will vary.

6. Draw your school ?



NADI SANGAM SCHOOL

WEEKLY HOME STUDY PACKAGE # 9 - ASSESSMENT

SUBJECT: MATHEMATICS

15 marks

YEAR 3

SECTION A; MULTIPLE CHOICE - Write the letter of the correct answer in the answer column

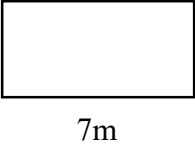
	QUESTION	WORKING	ANSWER
1.	Which of the following is the heaviest? A. 500g B. 1kg C. 900g		B
2.	One meter equals how many centimeters? A. 1000cm B. 100cm C. 1cm		B
3.	Which unit will you use to measure capacity of a tank? A. centimeter B. milliliter C. liter		C
4.	How many tens in 89? A. 8 B. 9 C. 1		A
5.	$\frac{6}{12} + \frac{3}{12} =$ A. $\frac{9}{24}$ B. $\frac{9}{12}$ C. $\frac{3}{12}$		B

SECTION B:

< , > , =

	QUESTION	WORKING	ANSWER
1.	1000g <input type="checkbox"/> 2kg		<
2.	$\frac{1}{2}$ <input type="checkbox"/> $\frac{1}{3}$		>
3.	6 tens <input type="checkbox"/> 60		=
4.	200g + 300g <input type="checkbox"/> 1kg		<
5.	1000ml <input type="checkbox"/> 1L		=

SECTION C: Work out the following

	QUESTION	WORKING	ANSWER
1.	 Calculate the perimeter of the rectangle. 3m 7m	$7m+7m+3m+3m=20m$	20m
2.	Jone has a garden. Its width is 5m and length is 10m. What will be the area of the garden?	Area= L X W = 10m x 5m	50m
3.	How many 500ml bottles will fill one litre bottle?		2 bottles
4.	a. $\begin{array}{r} 456 \\ + 153 \\ \hline \end{array}$ b. $\begin{array}{r} 901 \\ - 359 \\ \hline \end{array}$		a. 609 b. 542

1076 NADI SANGAM SCHOOL
WEEKLY HOME STUDY PACKAGE #9

REVIEW TEST

SUBJECT: HEALTHY LIVING

YEAR/ LEVEL: 3

Marks 15

Name _____

SECTION A WRITE DOWN TRUE OR FALSE (10 MARKS)

1. Swim in flooded waters. FALSE
2. Go swimming with an adult. TRUE
3. Swim in deep waters. FALSE
4. Leave your tools lying around. FALSE
5. You can use any tool that you want. FALSE
6. Play with your friends while waiting for the bus. FALSE
7. Wash tools after using. TRUE
8. Sit quietly while travelling in a bus. TRUE
9. Give your seats to the elderly if the bus is full. TRUE
10. Always walk in a single file. TRUE

SECTION B SHORT ANSWERS (5 marks)






1. Name two tools that you are allowed to use.
Watering can and rake
2. Write down two road safety rules.
Do not run on the road.
Cross at the zebra crossings.
3. Draw and colour a tool that you are **not allowed to use.**

Pictures of knife, fork, spade, hammer and others.

भाग १ खाली स्थान में उचित शब्द लिखिए । (5m)

१. चिड़िया उड़ती है । (चिड़िया / हिरन)
२. आसमान नीला है । (नीला / हरा)
३. राधा बाज़ार जा । (अचार / बाज़ार)
४. रमन किताब पढ़ । (तकिया / किताब)
५. समीर दुकान से सामान ला । (दुकान / चुनरी)

भाग २ नीचे दिए गए चित्रों में रंग भरें और इनके नाम लिखें । (5m)

कुत्ता	तितली	मछली	मोटर	हाथी
				

भाग ३ बहुवचन - वचन बदलो । (5m)

१. किताब - किताबें
२. तितली - तितलियाँ
३. आँख - आँखें
४. बकरा - बकरे
५. केला - केले

1076 NADI SANGAM SCHOOL
WEEKLY HOME STUDY PACKAGE #9

REVIEW TEST

SUBJECT: SOCIAL STUDIES

YEAR/ LEVEL: 3

Marks 15

Name _____

SECTION A

WRITE DOWN THE CORRECT WORD FOR EACH PICTURE. (5 MARKS)

1. BAKER

2. DOCTOR



3. shutterstock.com - 55785691

4.



Policeman

Astronaut



5. Fireman

Fireman Doctor Baker Astronaut Policeman

SECTION B SHORT ANSWERS (5 Marks)

1. Name three types of houses.

Apartment

Bungalow

Castle

And others according to the child's choice.

2. Draw and colour your favourite type of house.

Any according to the child.

SECTION C TRUE OR FALSE (5 Marks)

1. A family lives together in a home. TRUE
2. Everyone has a role to play. TRUE
3. Apartment is a type of house or building. TRUE
4. Budget is a plan to save money. TRUE
5. Income is the money you spent to buy things. TRUE

REVIEW TEST

SUBJECT : Elementary Science

YEAR/ LEVEL : 3

Marks 15

Name _____

Activity 1 (5 Marks)

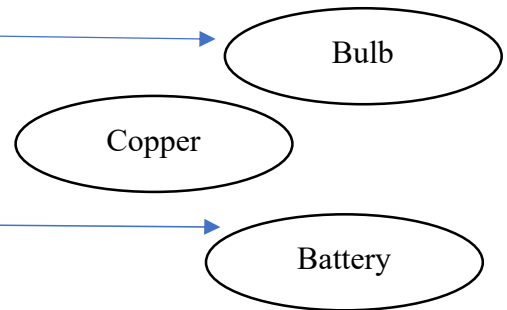
Complete the sentences by adding the correct words from the list below.

Windmill	sound	cooking	electrical	gas
----------	-------	---------	------------	-----

1. Air is a gas.
2. The path the current takes is called electrical circuit.
3. Heat energy is used for cooking.
4. A baby crying is an example of sound energy.
5. Windmill will not be useful if there is no strong wind blowing.

Activity 2 (5 Marks)


Label the Set Up.



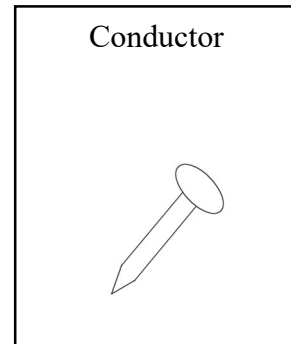
1. What will happen if there is a break in current ?
The light will go out.
2. Another name for battery is cell.

Draw and Colour (5 Marks)

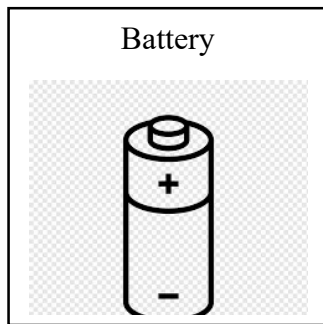
1,




2.



3.



4.



5.

