

YEAR 4

WEEKLY HOMESTUDY

PACKAGE# 9

SOLUTIONS

1076 NADI SANGAM SCHOOL

ENGLISH ASSESSMENT- AUGUST-SOLUTION

YEAR:4

MARKS: 50

Section: A

Antonyms

(10 marks)

- | | |
|----------------------------|-----------------------------------|
| 1. Wide- <u>Narrow</u> | 6. Simple- <u>Hard/ Difficult</u> |
| 2. Dull- <u>Bright</u> | 7. Above- <u>Below</u> |
| 3. Thick- <u>Thin</u> | 8. Forward- <u>Backward</u> |
| 4. Remember- <u>Forget</u> | 9. Shallow- <u>Deep</u> |
| 5. Young- <u>Old</u> | 10. Come- <u>Go</u> |

Section: B

Adjectives

(10 marks)

Underline the adjectives in the sentences below.

1. The fierce dog chased the boys.
2. Mum used a sharp knife to cut vegetables.
3. My father bought a new car.
4. The children were naughty when the teacher was absent.
5. The greedy cat ate all the sausages.

Section: C

Conjunctions

(10 marks)

Fill in the correct conjunction in the sentences below.

Because	But	Although	unless	and
---------	-----	----------	--------	-----

1. Children did not eat much food although they were hungry.
2. Rayal and Ourav are good friends.
3. Merewai did not come to school because she was sick.
4. Nivaan was tired but he completed all his work on time.
5. We will not go out to play unless it stops raining.

Section: D

Question Tags

(10 marks)

1. They will come today, won't they?
2. He is very rude, isn't he?
3. It wasn't good, was it?
4. Children were happy, weren't they?
5. You don't know her, do you?

Section: E

Alphabetical Order

(10 marks)

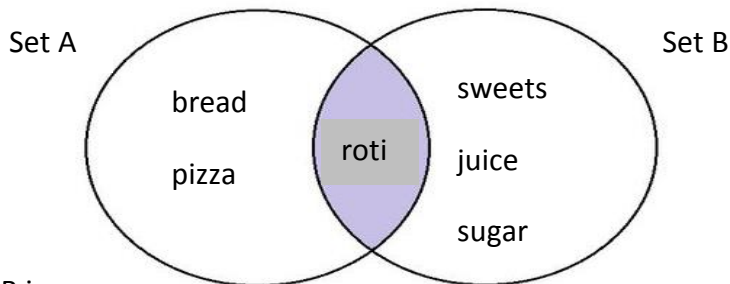
Arrange the following words in alphabetical order.

1. Coffee, tea, cocoa, cola - cocoa, coffee, cola, tea
2. Books, bag, ruler, desk- bag, books, desk, ruler
3. Phone, tablet, laptop, notepad- laptop, notepad, phone, tablet
4. Pink, black, purple, brown- black, brown, pink, purple
5. Window, house, car, table - car, house, table, window

1076 NADI SANGAM SCHOOL
YEAR 4 MATHEMATICS AUGUST ASSESSMENT 2021

Section A: Multiple Choice (Circle the best answer)

1. Study the diagram below then answer the questions numbers 1 and 2.



1. $A \cap B$ is

A. PIZZA

B. ROTI

C. JUICE

2. The cardinal number of set B is

A. 6

B. 4

C. 3

3. Which of the sets below shows an odd and an even number?

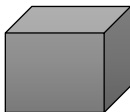
A. {3,4}

B. {3,5}

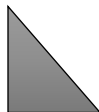
C. {2,4}

4. Which of the shapes below has three dimensions?


A.



B.



C.



5. What is the sum of 4536 and 3512?

A. 8148

B. 1024

C. 8048

6. The place value of '4' in the number 7642 is

A. hundreds

B. ones

C. tens

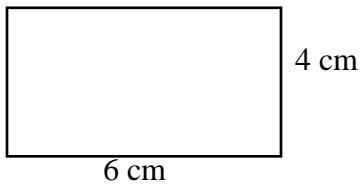
7. The set of numbers in correct ascending order is

A. 12, 21, 22, 221

B. 111, 101, 11, 10

C. 3, 31, 33, 13

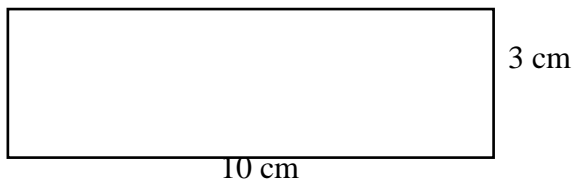
1. Calculate the area and perimeter for each shape below. Show your working on the spaces below



a). Area = 24cm^2

b). Perimeter = 20cm

2.



a). Area = 30cm^2

b). Perimeter = 26cm

3. The area of a garden with a length of 5cm and a width of 4cm is 20cm^2

4. Addition

a). $2945 + 3402 = \underline{6347}$

b). $3001 + 2319 = \underline{5320}$

5. Subtraction

a). $9372 - 2833 = \underline{6539}$

b). $4039 - 1121 = \underline{2918}$

6. Multiplication

$342 \times 3 = \underline{1026}$

1076 NADI SANGAM SCHOOL
YEAR 4 ELEMENTARY SCIENCE ASSESSMENT -SOLUTION

A. Matching:

- | | | |
|-----------------|--------------|-------------------------------|
| 1. Solar system | <u> D </u> | A. center of the Sun |
| 2. Jupiter | <u> E </u> | B. rusty in colour |
| 3. Core | <u> A </u> | C. acts in opposite direction |
| 4. Mars | <u> B </u> | D. 8 planets |
| 5. Friction | <u> C </u> | E. largest planet |

B. True and False

Write true and false for the following statements.

- | | |
|--|--------------|
| 1. Plants use the Sun's energy to make their food. | <u>True</u> |
| 2. All planets orbit the Sun. | <u>True</u> |
| 3. Venus is red in colour. | <u>True</u> |
| 4. Earth has no moon. | <u>False</u> |
| 5. Mars is the second planet from the Sun. | <u>False</u> |

C. Short Answers

- | | |
|--|-----------------|
| 1. Name the planet with a ring. | <u>Saturn</u> |
| 2. State the force used to turn the door knob. | <u>Twist</u> |
| 3. Name the planet where life exists. | <u>Earth</u> |
| 4. Where do plants get their energy from? | <u>Sun</u> |
| 5. Which force slows down moving things? | <u>Friction</u> |

1076 NADI SANGAM SCHOOL
YEAR 4 HEALTH SCIENCE ASSESSMENT- SOLUTION

MARKS: 30

A. Matching

- | | | |
|-----------------------|-------|------------|
| 1. Energy giving food | __D__ | A. meat |
| 2. Healthy food | __E__ | B. prawns |
| 3. Body building food | __A__ | C. bread |
| 4. River | __B__ | D. dalo |
| 5. Bakery | __C__ | E. oranges |

B. True and False

Write true and false for the following statements.

- | | |
|--|-------------|
| 6. Tap water is the safest source of drinking water. | _True_____ |
| 7. Cholera is a water borne disease. | _True_____ |
| 8. Boiling river water can be safe for drinking. | _True_____ |
| 9. Always allow strangers in your home. | _False_____ |
| 10. A balance meal contains only two types of food. | _False_____ |

C. Short Answers

- | | |
|---|--------------------------|
| 6. Which side of the road should you walk on? | Right hand side |
| 7. Name the food source for groceries. | Supermarket |
| 8. How can you prevent water borne diseases? | Drink clean water |
| 9. List one source of drinking water. | Tap, spring, well, river |

10. What should you do after visiting toilets? **Wash your hands with soap and water**

1076 NADI SANGAM SCHOOL
YEAR 4 SOCIAL STUDIES ASSESSMENT- SOLUTION

Matching

Match section A with section B

1. Hindus worship place is **E** A. childrens park, beach, river.
2. Recreational Facilities **A** B. public village space for ceremonies and celebrations.
3. Meterologist **D** C. Measures sunshine
4. Village space or Rara **B** D. A person who studies weather.
5. Solarimeter **C** E. temple.

True / false

Write true or false

1. Clouds are made by the water droplets. **True**
2. Weather is day-to-day condition of a particular place. **True**
3. One recreational equipment that could be found in the river side is merry-go-round. **False**
4. Rara is located in the centre of the village. **True**
5. Tanoa belongs to I-taukei artifact. **True**

Short Answer.

Answer the following questions.

1. What is the meaning of the word weather?
Weather is day-to-day condition of a particular place.
2. List down 3 recreational facilities that is found in the childrens park.
Merry-go-round * see-saw balance * swings * slidings
3. What is the name of the instrument that is used to measure wind direction.
Wind vane
4. What is Precipitation?
Precipitation- are the rain, snow, hail, sleet.
5. What games can children play in the village space?
Four corners * HE * Mouse and cat

1076 NADI SANGAM SCHOOL

YEAR 4 HINDI ASSESSMENT- AUGUST- SOLUTION

Marks: 50

पहला भाग

बहुवचन

(अंक: 10)

- | | | | |
|---------------------|----------|---|----------|
| 1. केला - केले | 4. कहानी | - | कहानियाँ |
| 2. लड़का - लड़के | 5. कमरा | - | कमरे |
| 3. लड़की - लड़कियाँ | | | |

दूसरा भाग

भाषा

(Language)

(अंक: 10)

इन वाक्यों को **की/कि** लगा कर पूरा करो ।

1. मीरा **की** माँ बीमार है ।
2. सीता **की** बहन गीता है ।
3. रमन **की** किताब मेज पर रखी है ।
4. आशा ने कहा **कि** मुझे गाना गाना है ।
5. मैं चाहता हूँ **कि** आप हमारे साथ चलें ।

तीसरा भाग

विलोम शब्द (Opposites)

(अंक:10)

मोटा	-	पतला	साफ	-	मैला
बड़ा	-	छोटा	खुश	-	उदास
पास	-	दूर			

चौथा भाग

पर्यायवाची शब्द (Synonyms)

अंक: 10

- | | | | |
|------------|---------------------|--------|--------------|
| 1. प्रभू- | ईश्वर/ भगवान | भूमी - | धरती |
| 2. वायू - | हवा/ पवन | पर्वत- | पहाड़ |
| 3. पुत्र - | बेटा | | |

पाँचवा भाग

हूँ	हो	हैं
-----	----	-----

अंक: 10

1. मैं घर पर **हूँ** ।
2. मैं पढ़ रहा **हूँ** ।
3. आप कहाँ जा रहे **हो**?

4. राम खेल रहा **नहीं** ।
5. बच्चा दौड़ता **नहीं** ।

1076 NADI SANGAM SCHOOL
YEAR 4 AUGUST ASSESSMENT 2021

LESONI: I TAUKEI

KALASI: _____ YACAMU: _____

A. Veisataka (*Vola na vosa mai na Wasewase B ena vanua ka lala koto e loma*)

Wasewase A		Wasewase B
1. lewe dua	B	A. keirau
2. lewe levu	C	B. au
3. lewe tolu	D	C. keimami
4. lewe rua	A	D. keitou

B. Vola vakadodonu nai yatuvoa. (*Vola na vosa e dodonu me matanivola levu*)

1. era sa cula kece na gone mai nadi. **Era** **Nadi**
2. au sa tauvimate. **Au**
3. sa yaco mai ko Tevita. **Sa** **Tevita**

C. Vakacuruma na vosa dodonu ena vanua e lala koto era

1. Era dau **qito** rakavi na cauravou. (*qitora/qito/qitoqito*)
2. Sa qiri mai na lali ni **kana**. (*kakana/kana/kanakana*)
3. Sa **maca** na mequ wai. (*maca/mamaca/macala*)
4. E dau lomani au **vakavinaka** ko tinaqu. (*vinakata/veivinakati/vakavinaka*)
5. E **rauti** au vinaka na noqui vava. (*rauta/veirauti/rauti*)

D. Tukutuku leleka vakarautaki (*Vola nai ulutaga ni tukutuku ena vanua ka lala koto*)

1. Tamai keimami mai lomalagi, kerea mo ni vakalougatataka na kakana sa vakarautaki me yaga vei keimami. Me ra nanumi kina na leqa tu kei ira era talega era oga kina, Jisu nai Vakabula, emeni.

Masu ni kana

2. Tamai keimami mai lomalagi, kerea mo ni vosoti au ena noqui valavala ca kece sara, Jisu nai Vakabula, emeni. **Masu ni vakatutusa**
3. Tamai keimami mai lomalagi, au kerea mo ni solia vei au nav uku meu rawata kina noqu veitarogi, Jisu nai Vakabula, emeni. **Masu ni kerekere**
4. Tamai keimami mai lomalagi, Vinaka vakalevu na nomuni loloma kei na nomuni veitaqomaki, Jisu nai Vakabula, emeni. **Masu ni vakavinavinaka**

Masu ni vakatutusa	Masu ni vakavinavinaka
Masu ni kerekere	Masu ni kana

E. Vosa veibasai (*Vola na veibasai ni vosa e na vanua ka lala koto*).

Vosa	Veibasai	
1. matata	E	A. ciqoma
2. tiloma	C	B. mata
3. solia	A	C. luaraka
4. titobu	G	D. sereka
5. taroga	F	E. buwawa
6. cuva	B	F. sauma
7. vesuka	D	G. vodea