

YEAR: 5

ENGLISH

WORKSHEET: 8

SECTION A COMPREHENSION (10 marks)

Part 1

Read the passage carefully and then circle the letter of the best answer.

Passage

One day David fell down a well near his house. His parents were not at home. His father was at the market. His mother was helping a neighbour. David called his younger brother Paul.

Paul was ten years old. He heard his brother. He ran out of the house. He saw David at the bottom of the well. David was more than five feet tall and the water was only three feet deep. Paul brought a long piece of rope. He could not pull him out because he was not very strong. He tied one end of the rope to a tree. Then David climbed up the rope. He thanked his brother. Then he went into the house to put on some dry clothes.

Questions

Choose the correct answer.

1. David's brother was _____.
A. at the market
B. helping a neighbor
C. down a well
D. in his house
2. David's mother was _____.
A. helping a neighbor
B. at the market
C. helping somebody
D. in her house
3. David called his brother because _____.
A. he could not get into the well
B. he hurt his leg
C. he was angry
D. he wanted to get out of the well
4. What did Paul do with the rope?
A. He put one end round a tree.
B. He climbed up it.
C. He tied one end to the bottom of the well.
D. He dropped it all down the well.
5. The bottom of the well is _____.
A. the side
B. the lowest part
C. the wall
D. the highest part

Part 2 Write 3 common nouns from the story above (3 marks)

1. _____
2. _____
3. _____

Section B Homonyms. (5 marks)

Choose the correct word from the words given in the brackets. Write the word you choose in the blank space provided.

1. I _____ the dogs barking very clearly last night. (heard, herd)
2. The brave _____ saved the princess from the dragon. (knight, night)
3. The _____ flew low over the cane plantation. (plain, plane)
4. After work my _____ comes straight home.(father, farther)
5. The patient in the hospital thought he would _____. (dye, die)

Section C Adverbs (4 marks)

Complete these sentences by choosing adverbs from the box.

fast	thoroughly	attentively	badly
------	------------	-------------	-------

1. The police investigated the matter _____.
2. He was injured _____.
3. He ran as _____ as he could.
4. The class listened _____ to the teacher.

Section D Punctuation (4 marks)

Rewrite the following sentences adding capitals, fullstops and commas.

1. Im afraid of the dark

2. i don't like bugs mice and rats.

Section E Collective Nouns (4 marks)

Write the collective nouns for the following groups of animals. Choose the correct answer from the box.

herd	school	litter	swarm
------	--------	--------	-------

1. A _____ of bees.
2. A _____ of cats.
3. A _____ of cattle.
4. A _____ of fish.

YEAR: 5

MATHEMATICS

WORKSHEET: 8

INSTRUCTIONS

- 1] Answer all the question on the paper.
- 2] Do all the working in the space provided.
- 3] Write your final answer in the answer column

QUESTION	WORKING	ANSWER
Choose the correct sign $<$, $>$ or $=$ for questions 1 - 3 (1 mark each)		
1. $4 \times (9+6)$ ----- $(4 \times 9) + (4 \times 6)$		
2. $6p+2p$ ----- $12p+7p$		
3. 30cm ----- 40mm		
Write 'T' for true and 'F' for false for question 4 -6 (1 mark each)		
4. There are 1000 metres in 1 Kilometre.		
5. A can of juice is most likely to be 350 litres.		
6. The rule to find the volume of a cube is $L \times W \times H$.		
Fill in the missing numerals for questions 7 - 11 (1 mark each)		
7. $6\text{km} = \underline{\hspace{2cm}}\text{m}$		
8. Identify and write down the pattern. $\{ 5, 10, 15, 20 \dots \}$		
9. $x + 6 = 9$ Find x		
10. $4+4+4+4+4+4 = \underline{\hspace{2cm}} \times 4$		
11. $7 \times 15 = 7 \times (10 + \underline{\hspace{1cm}})$		

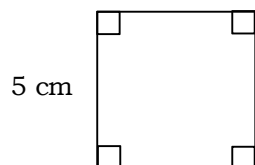
For question 12 -15 choose the correct answers and write the letters of your choice in the answer column (2 marks each)

12. The next number in the pattern

4, 8, 12, 16, 20, 24, is

- A. 25 B. 39
C. 28 D. 40

13.




5cm


The perimeter of the above shape is _____ cm.

- A. 10cm B. 25cm
C. 15cm D. 20cm


14. What is the total weight of the fish shown below ?



3.3kg



2.4kg



1.2kg

- A. 6kg B. 60g
C. 6.9kg D. 6.09kg

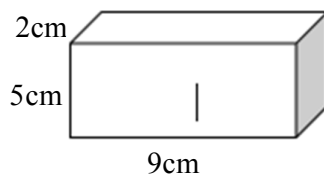
15. $4(2+5) = (___ \times 2) + (4 \times 5)$



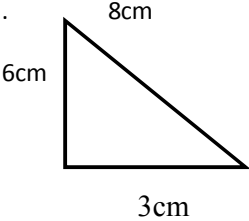
The missing number in the above statement is _____.

- A. 5 B. 2 C. 4 D. 28

Work out the following problems. Question 16–21 (11marks)

16. The formula for the volume of a solid is $L \times W \times H$.
Find the volume of the shape given below. (2m)



<p>17. How many bottles full of water will fill the bucket right to the top? (2m)</p> <div style="display: flex; justify-content: space-around; align-items: center;"> <div style="text-align: center;">  <p>500ml</p> </div> <div style="text-align: center;">  <p>5L</p> </div> </div>		
<p>18. What is the perimeter of the triangle given? (2m)</p> <div style="text-align: center;">  </div>		
<p>19. Pita weighs 33kg. His brother is 6000g heavier. What is the weight of his brother? (1m)</p>		
<p>20. Calculate the following using distributive property. (2m)</p> $ \begin{aligned} 8 \times 17 &= 8 \times (10+7) \\ &= (8 \times 10) + (8 \times 7) \\ &= \underline{\hspace{2cm}} + \underline{\hspace{2cm}} \\ &= \underline{\hspace{2cm}} \end{aligned} $		
<p>21. Mrs. Ram wants to buy a new carpet for her living room. Her living room is a 12m long and 9m wide rectangle. How much carpet does she need to buy in order to cover her entire living room? (2m)</p>		

YEAR: 5

HEALTHY LIVING

WORKSHEET: 8

SECTION A Multiple Choice (10 marks)

Circle the letter of the best answer.

1. Healthy teeth can be maintained by _____.
A. eating sweets. B. using tooth-picks.
C. brushing our teeth daily. D. opening bottle-tops using the teeth.
2. Which of the following is not a water safety rule?
A. Learn to swim B. Swim alone
C. Swim in shallow waters D. Do not cross a flooded creek
3. One of the services provided by the government is _____.
A. gym B. printing press
C. clubs D. health centres
4. Some household agents include _____.
A. kerosene B. coffee
C. sugar D. tea
5. Choking can be best defined as _____.
A. eating lots of lollies B. putting sugar in your mouth
C. putting objects in mouth and swallowing them D. consuming drugs
6. Washing hands with soap and water will kill _____.
A. germs B. eyes
C. fingernails D. frogs
7. During hurricane one should _____.
A. play outside B. swim in the flooded river
C. stay indoors D. play near power lines
8. One example of an illegal drug is _____.
A. marijuana B. panadol
C. coffee D. beer

9. How does skin infection or disease occur?

- A. By bathing daily with soap and water. B. By having a bath daily.
C. By using other people's clothes who has skin disease D. By scrubbing our skin well.

10. _____ cross from behind or in front of a parked vehicle.

- A. Always B. Sometimes
C. Usually D. Never

SECTION B WRITE TRUE OR FALSE FOR EACH STATEMENT (4 m)

1. Cakes and sweets are bad for our teeth. _____
2. Incisors teeth is used for grinding food. _____
3. Always share your personal belongings with families and friends. _____
4. Never cross the road at bends or junctions. _____

SECTION C MATCHING (4 m)

Match the items in Column I with the correct alphabets in Column II.

Column I		Column II
1. During an earthquake		A. When a ligament, which connects parts of a joint, is stretched.
2. Personal cleanliness		B. Epidermis
3. Outer skin		C. Drop, cover and hold on.
4. Sprain		D. Change clothes and undergarments after having a shower

SECTION D

FILL IN THE BLANKS (4 m)

Use the words given in the box to complete the sentences.

human	government	Prescribed	Teeth
-------	------------	------------	-------

1. _____ drugs are those issued by the doctor to cure a particular sickness.
2. The _____ provides free services for its people in all communities.
3. Leaving _____ waste in natural areas can result in contaminating water supplies.
4. _____ help us to chew and digest food.

1. Name the teeth used for grinding the food in our mouth?

2. How can you keep your home clean?

3. Write down one effect of using illegal drugs.

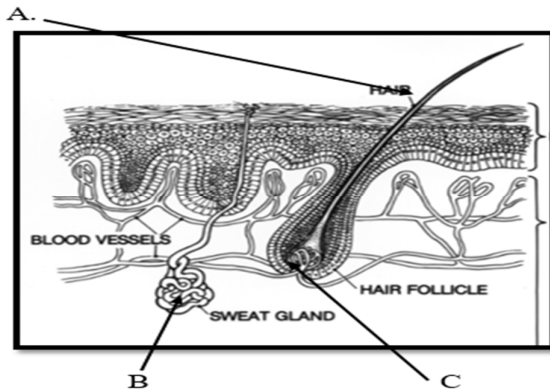
SECTION F

RESOURCE INTERPRETATION

(5 m)

Label the parts of the skin below. Choose the answer from the words given.

(hair follicle, hair, sweat gland) (3m)



A. _____

B. _____

C. _____



Study the picture and answer the questions. (2 m)

- i. Name this natural disaster. _____

- ii. What will you do before it strikes?

YEAR: 5

ELEMENTARY SCIENCE

WORKSHEET: 8

SECTION A Multiple Choice (10 marks)

Circle the letter of the best answer.

1. Tom accidentally mixed sand and iron filings. How can we separate the mixture?
A. Use filter paper. B. Use magnet to separate
C. Use separating funnel D. Use strainer to separate.
2. Smoke in the atmosphere is an example of _____ pollution.
A. water B. land
C. air D. mind
3. Which of the following is a reversible reaction?
A. Boiling egg. B. Burning paper.
C. Mixing sand and cement D. ice melting
4. After burning some papers, Sam collected some grey substance which is called ash.
This is an example of a _____.
A. physical change B. chemical change
C. natural change D. manmade change
5. Which one of the following is a list of natural materials?
A. Car, sand, bamboo, gravel B. Sand, tree, ocean, chair
C. Truck, paper, pencil, bag. D. Sea, trees, sand, stones.
6. Light travels in _____ line.
A. parallel B. perpendicular
C. straight D. curly
7. Which one of the following statements describes a liquid?
A. It has a fixed shape. B. It is hard.
C. It can be easily compressed. D. It takes the shape of the container.
8. Year 5 students decided to put more rubbish bins in the school compound. Rubbish bins help to reduce _____.
A. oil pollution B. air-pollution
C. land pollution D. noise pollution
9. Which of the following best describes a chemical change?
A. chopping wood. B. melting chocolate.
C. boiling water. D. baking a cake.
10. When you put some water in the freezer, it will turn into ice. If we warm ice it melts and changes into water.
It is an example of _____.
A. chemical change B. reversible change
C. irreversible change D. natural change

SECTION B Fill in the blanks

(5 marks)

Choose suitable word to fill in the blank spaces from the word list given in the box.

Freezing

mixture

filter

recycled

three

1. A _____ is formed when two or more substances are mixed together.
2. _____ is a process where a liquid changes to solid.
3. There are _____ states of matter.
4. Plastic bottles can be _____ to reduce waste.
5. We can separate sand and water by using a _____ paper.

SECTION C

TRUE OR FALSE

(5 marks)

Write true or false for each sentence.

1. Light is a form of energy. _____
2. We can turn yoghurt or cheese back into milk. _____
3. Recycling is making new things out of used or old material. _____
4. Natural materials are things that are made by men. _____
5. Gas particles move around freely in all direction. _____

SECTION D

Classify the following into the 3 states of matter. (5marks)

ice	vapour	stone	milk	oxygen
Solid		Liquid		Gas
_____		_____		_____
_____		_____		_____

SECTION E

Answer the questions

1. Differentiate between chemical and physical change. (2m)

2. Name the process when solid changes to vapour.(1m)

SECTION F RESOURCE INTERPRETATION (2m)



How is the land polluted? (1m)

List a way in which you can stop this. (1m)

YEAR: 5

SOCIAL STUDIES

WORKSHEET: 8

SECTION A Multiple Choice (10 marks)

Circle the letter of the best answer.

1. The _____ and Northern parts of Fiji are mostly dry.
A. Western
B. Southern
C. Central
D. Eastern
2. Clearing the forest to do ginger farming is an example of _____.
A. natural environment
B. physical environment
C. cultural environment
D. heritage site
3. _____ are very valuable **natural** resources.
A. Schools
B. Trees
C. Shops
D. Houses
4. _____ is the old capital of Fiji.
A. Suva
B. Lautoka
C. Levuka
D. Ba
5. A mental map is _____.
A. drawing of landscape
B. map that we make up in our mind.
C. design of building
D. map of an area we study.
6. A resource that one can find in the forest is _____.
A. herbal medicine
B. sea- shell
C. computer
D. pearl
7. Our beautiful natural environment attracts the _____ to come and spend their holidays in Fiji.
A. tourists
B. soldiers
C. hackers
D. policemen
8. Which of the following activities is causing a lot of damage to our natural environment?
A. Planting of new trees
B. Putting fire to the forest
C. Taking care of native plants.
D. Watering the young plants
9. One of the Heritage sites in Fiji is _____.
A. Makogai Island
B. Labasa Market
C. Suva City
D. Ram Leela Hall
10. Labasa is located in the _____.
A. Northern Division
B. Eastern Division
C. Western Division
D. Central Division

SECTION B WRITE TRUE OR FALSE FOR EACH STATEMENT (4 m)

1. Fiji is situated in the Pacific Region. _____
2. The Southern and Eastern parts of Viti Levu are usually dry. _____
3. The passage that lies between Viti Levu and Vanua Levu is Kadavu. _____
4. One of the features of a map are the contour lines. _____

SECTION C MATCHING (4 m)

Match the items in Column I with the correct alphabets in Column II.

Column I		Column II
5. Land use		E. Freehold, native and state land.
6. Three land types		F. We get food, stones and sand for building.
7. Heritage sites		G. For farming, building and recreational facilities.
8. Rivers		H. Bouma- Taveuni , old capital- Levuka

SECTION D FILL IN THE BLANKS (4 m)

Use the words given in the box to complete the sentences.

four	Honiara	cultural	Economic
------	---------	----------	----------

1. Cutting and clearing mangroves to make a shopping mall is an example of a _____ change.
2. There are _____ divisions in Fiji.
3. _____ investment is the money put aside for future income.
4. The capital of Solomon Islands is _____.

SECTION E SHORT ANSWER QUESTIONS (3 m)

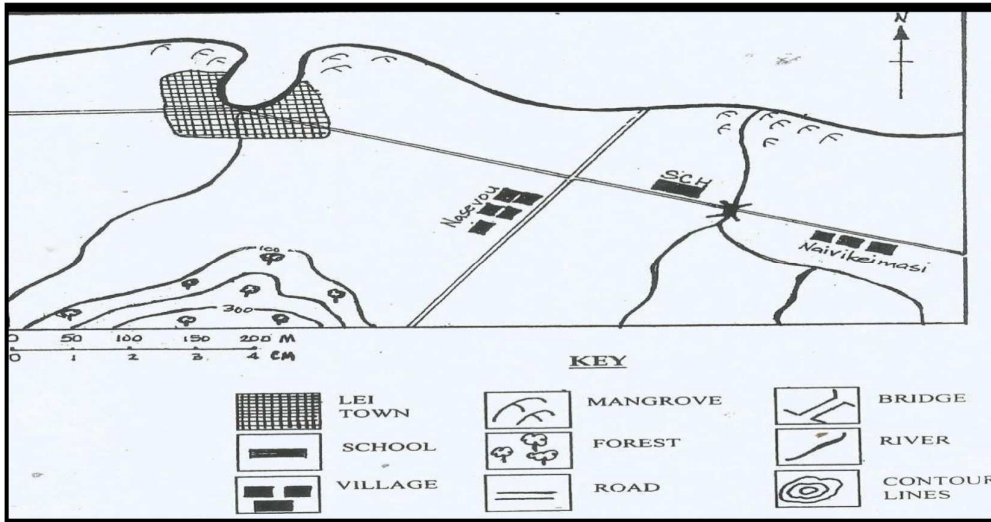
1. Name a sugar mill found in Fiji.

2. Why do tourist come to Fiji?

3. How do students benefit from the tourist industry?

MAP READING

1. Study the map provided below and answer the questions given below.

MAP OF SIWA

- a. What is the title of this map? (1m)
- _____
- b. Draw the symbol for the bridge. (1m)
- _____
- c. Name two settlements of Siwa village.(1m)
- _____
- _____



2. a. Name the human activity that is causing harm to the environment shown above.(1m)
- _____

- b. Why is this activity harmful to the environment? (1m)
- _____
- _____
- _____

YEAR: 5

HINDI

WORKSHEET: 8

पहला भाग : प्रश्न १ बोधन

नीचे दिए गए बोधन खण्ड को ध्यान से पढ़कर प्रश्नों को हल कीजिए ।

दिखावटी दोस्त

श्याम और राम अच्छे दोस्त थे । एक दिन वे जंगल से हो कर घर जा रहे थे । रास्ते में उन्हें एक शेर दिखाई दिया । वह उनकी ओर आ रहा था । श्याम तुरन्त भाग कर पास के पेड़ पर चढ़ गया । राम को पेड़ पर चढ़ना नहीं आता था । पर उसने सुना था कि जानवर मरे हुए लोगों को कुछ नहीं करते । इसलिए वह चुप-चाप जमीन पर लेट गया । उसने अपनी आँखें मूँद ली और साँस रोक ली ।

शेर राम के पास आ कर उसके चेहरे को सूँघा । उसे लगा कि वह मर चुका है । शेर आगे बढ़ गया । जब शेर कुछ दूर चला गया तो श्याम पेड़ से उतर गया । उसने राम से पूछा कि शेर तुम्हारे कान में क्या कह रहा था । राम ने जवाब दिया कि शेर ने कहा है कि दिखावटी दोस्तों से दूर रहो जो मुसीबत में तुम्हें छोड़ कर भाग जाते हैं ।

प्रत्येक प्रश्न के चार उत्तर दिए गए हैं । बोधन खण्ड के अनुसार सही जवाब के बगल वाले अक्षर पर गोलाकार निशान बनाइए ।

प्रश्न

१. राम और श्याम कहाँ जा रहे थे ?

क. घर

ख. स्कूल

ग. जंगल

घ. दुकान

२. रास्ते में उन्हें क्या मिला ?

क. शेर

ख. बैल

ग. कुत्ता

घ. बिल्ली

३. किसको पेड़ पर चढ़ना आता था ?

क. शेर को

ख. राम को

ग. तीनों को

घ. श्याम को

४. राम ने जानवरों के बारे में सुना था कि वे हैं ।

क. बहुत खतरनाक होते

ख. खुद को सबसे बहादुर समझते

ग. हमेशा लोगों को खाना चाहते

घ. मरे हुए लोगों पर हमला नहीं करते

५. राम जमीन पर क्यों लेट गया था ?

क. उसे नींद आ रहा था ।

ख. श्याम को डरा रहा था ।

ग. ताकि शेर उसे मरा समझे ।

घ. वह चलते-चलते थक गया था ।

६. 'उसे लगा कि वह मर चुका है ।' पाठ में आए उसे शब्द किसके लिए आया है ?

क. शेर

ख. राम

ग. श्याम

घ. जंगल

७. शेर ने राम के पास आ कर क्या किया ?

क. उसे खाने लगा ।

ख. उसे सूँघने लगा ।

ग. उसे जगाने लगा ।

घ. उसे दौड़ाने लगा ।

८. शेर आगे बढ़ गया । पाठ में आए इस वाक्य का क्या अर्थ है ?

क. शेर मर गया ।

ख. शेर बूढ़ा हो गया ।

ग. शेर बड़ा हो गया ।

घ. शेर चला गया ।

६. श्याम, राम से क्या जानना चाहता था ?

क. शेर कहाँ गया ?

ख. शेर कब गया ?

ग. शेर ने क्या कहा ?

घ. शेर क्यों चला गया ?

१०. इस पाठ से हमें क्या सीख मिली है ?

क. दिखावटी दोस्तों से दूर रहो ।

ख. श्याम की तरह चलाक बनो ।

ग. सबसे पहले अपने बारे में सोचो ।

अंक 10

घ. मुसीबत आने पर पेड़ पर चढ़ जाओ ।

दूसरा भाग

विलोम शब्द (opposite)

क. इन शब्दों का विलोम शब्द लिखिए ।

(अंक 5)

१. हँसना - ----- शाम

२. सुबह - ----- बुरा

३. खाली - ----- जवाब

४. सवाल - ----- रोना

५. अच्छा - ----- भरा

ख. इन शब्दों का पर्यायवाची शब्द लिखिए । (synonyms) (अंक 5)

१. आँख - ----- जल

२. पुत्री - ----- पवन

३. प्रेम - ----- बेटी

४. हवा - ----- नयन

५. पानी - ----- प्यार

ग. सही शब्द चुन कर पूरा करो ।

(अंक 5)

के, में, को, से, की

१. वे एक स्वयं-सेवी संस्था ----- सदस्य हैं।
२. वे कृष्ण के बारे ----- बताने लगे।
३. कौशल्या श्री राम ----- माँ थी ।
४. भाई ने पिताजी ----- केला दिया ।
५. सब ----- पहले बच्चों को कहाँ ले जाया गया ।

दूसरा भाग :

संस्कृति - Culture

(अंक 5)

सही जवाब के बगल वाले अक्षर पर गोलाकार निशान बनाइए ।

१. भगवान राम का भाई कौन था ?

क. अर्जुन ख. कृष्ण ग. लक्ष्मण घ. भीम

२. वाल्मीकी ने किस गन्थ की रचना की थी ?

क. रामचरितमानस ख. गीता ग. महाभारत घ. रामायण

३. श्री कृष्ण का जन्म कहाँ हुआ था ।

क. मथुरा में ख. गोकुल में ग. अयोध्या में घ. लंका में

४. भगवान राम की पत्नी का क्या नाम था?

क. सीता ख. रीता ग. राधा घ. गीता

५. उग्रसेन श्री कृष्ण के क्या लगते थे?

क. आजा ख. नाना ग. मामा घ. ताऊ

1628 LABASA SANGAM PRIMARY SCHOOL

YEAR: 5

NA VOSA VAKA VITI

WORKSHEET: 8

MAKA YALATAKI: 30 na maka

WASEWASE A (10 na maka)

Mo vakaotia na veiyatuvosa e ra.

	<i>Iyaya vaka-Viti.</i>	<i>Kena ivakamacala.</i>
1.	Na iri	
2.		caka kina na vakasasaqa
3.	Na saqa	
4.		na idrewe ni drekedreke
5.	Na ikali	
6.		sua kina na niu.
7.	Sova	
8.		tawa kina na kaikoso
9.	Itauga	
10.		na moto ni cocoka

WASEWASE B (9 na maka)

E na yavu ni vosa 'marau', vakacuruma na veivosa sucu ka vu mai kina e na veivanua ka lala koto e na veiyatuvosa oqo.

1. Sa duatani na noqu _____ e na noqu siga ni sucu.
2. Au sa _____ dina na nomu iloloma ko a vakauta mai.
3. E ra na mai _____ e ke na gone yalewa mai Sawani.
4. Ko sa mai _____ dina na vale oqo.
5. Keirau a sota ka _____ kei noqu itau.

Rere: rerere, rerevaka, ivakarere, vakarerea, veivakarerei.

6. E gone _____ ko Savou. E _____ na qase kumi levu.
7. Sa _____ na qase kumi balavu ko ya.
8. Io, sa _____ dina ga na qase oqori ka ni dau _____, e _____ Timoci tala ga e na noa.
9. Ia, mo kakua ga ni dau _____ na gone lalai.

WASEWASE C (6 na maka)

Vola e dua vei tavalemu ko Jeremaia ka sureti koya me lako mai e na nomu Siga ni Sucu e na I ka tini ni Noveba,2021. Me yacamu ko Ratu Napolioni Bolaca ka ko vakaitikotiko mai Lot 14 Covata Housing, Kato ni Meli 221, Labasa. Vakacuruma na vosa e ganita me volai e na vanua e lala koto.

Kato ni Meli 221

Labasa

_____ ni Okosita, 2021

Kivei Jeremaia

Bula vinaka tavale. Au nuitaka ni ko bulabula vinaka tiko ka toso vinaka tiko na qaravi vuli.

Au via _____ iko tiko ga ke rawa ni ko bau tiko ena noqu siga ni sucu. E na vakayacori _____ e na ika tini ni Seviteba, 2021 ka na vakayacori ga e vale. E na tekivu tiko na soqo e na lima na _____ e na yakavi.

Au sa nuitaka ni ko na ciqoma na veisureti malumalumu oqo.

Ko _____

Na Tavalemuni dina

WASEWASE D (5 na maka)

Mo vakadewataki/vakasavuitukutukutaki ira na veivosa ka ra cavuti koto e ra.

1. “E na qai soko e na siga cava na Spirit of Harmony?” a taro ko Viliame.

2. “E na Siga Tabu,” a sauma ko Tevita.

3. “Ia, e na soko ga ki vei na Ohana?” a taro tale yani ko Ramasi.

4. “E na soko ki Cikobia,” a sauma yani ko Temalesi.

5. “Drau sa lako tu ki vei?” a taro na qase koya.
