

NADI SANGAM SCHOOL
WEEKLY HOME STUDY PACKAGE
#13 - ASSESSMENT

YEAR 2



2021

1076 NADI SANGAM SCHOOL

Weekly Home Study Package # 13 Assessment 1

MARKS: 25

YEAR: 2

Name: _____

SECTION A: Multiple Choice (5 Marks)

Circle the letter of the correct answer:

1. Which word is **spelt** correctly?
A. frend B. friend C. frand
2. The **plural** form of the word **box** is _____.
A. boxes B. boxes C. boxies
3. Choose the **verb** in the sentence below:
Kim ran faster than Joe.
A. than B. ran C. Joe
4. This is a book. It belongs to Mr. Singh.
The **pronoun** in the sentence given above is _____
A. Mr. Singh B. book C. It
5. The rhyming word for **coat** is _____.
A. boot B. goat C. shout

SECTION B Contractions (5 Marks)

Read the Sentences. Write the long form of the underlined contraction words in the space given:

1. They're all my friends. _____
2. He isn't coming to school today. _____
3. I didn't see the dog. _____
4. She said, " Don't do that." _____
5. We'll go home at 3.00pm. _____

SECTION C: Spelling (5 Marks)

Write the words correctly

1. caike - _____
2. reabit - _____
3. paarti - _____
4. beaech - _____
5. juuce - _____

SECTION D: Fill in the Blanks with Correct Words (5 Marks)

Pick words from the list

enjoyed prepared boasted trapped chewed

1. The rabbit always _____ that he could run faster.
2. The mouse _____ the rope.
3. Grandmother _____ some sandwiches and cold lemon juice.
4. Everyone _____ themselves at the party.
5. The lion got _____ in the fishing net.

SECTION E: OPPOSITES Matching (5 Marks)

Match the correct opposite words. Write the letter of the correct answer in the space given:

- | | |
|------------------|----------|
| 1. clean - _____ | A. short |
| 2. heavy - _____ | B. lost |
| 3. under - _____ | C. dirty |
| 4. long - _____ | D. light |
| 5. won - _____ | E. over |

1076 NADI SANGAM SCHOOL
WEEKLY HOME STUDY PACKAGE #13 ASSESMENT
GENERAL SUBJECTS

NAME: _____

YEAR 2

MARKS: 25

Section A: Multiple Choice (5 Marks)

Circle the letter of the correct answer.

1. Which object is safe to play with?
A. scissors B. ball
2. Eating unwashed fruits and vegetables will make us _____
A. strong B. sick
3. What is environment?
A. road B. place where people live
4. Eyes are used for _____
A. Seeing things B. listening to radio
5. Crescent and star are religious symbols for _____.
A. Islam B. Hindus

Section B: Write True or False (5marks)

1. Brush your teeth three times a day. _____
2. Wash your hands with soap and water. _____
3. If your clothes catch fire remember to STOP-DROP-ROLL. _____
4. Keep our ears dirty. _____
5. Aum is the religious symbol is for Sikhism. _____

Section C: Matching (5marks)

- | | | |
|----------------------|-------|---------------------|
| 1. Dentist | _____ | A. Air transport |
| 2. Helicopter | _____ | B. Visit regularly |
| 3. Tsunami | _____ | C. School |
| 4. Cultural activity | _____ | D. Giant tidal wave |
| 5. Uniform | _____ | E. Fire walking |











Section: D Fill in the Blanks (5 Marks)

Write the correct word (5marks)

red	musical	rules	dangerous	short
-----	---------	-------	-----------	-------

1. Stop says the _____ light.
2. Keep your finger nails _____.
3. A flute is a _____ instrument.
4. Wet grounds are _____ to play on.
5. Follow all the school _____.

Section E: Circle the correct Traditional Wear (5marks)

Islam		
Hindu		
Sikh		
Chinese		
I-taukei		

1076 NADI SANGAM SCHOOL

YEAR 2

HINDI

WEEKLY HOME STUDY PACKAGE #13 - ASSESSMENT

Name: _____

Marks: 25

अ] नीचे दिए गए शब्दों के बहुवचन लिखो । [5marks]

१. तितली - _____

२. लड़का - _____

३. मछली - _____

४. रस्सी - _____

५. गमला - _____

आ] सही जवाब को गोल करो । [5 marks]

१. राम ने सरस को _____ । (मारी / मारा)

२. लड़के _____ हैं । (दौड़ते / दौड़ता)

३. पिताजी मोटर साफ कर _____ हैं । (रही / रहे)

४. दादी मेरे लिए गुड़िया _____ थी । (लाई / लाया)

५. नानी रोज़ नई कहानी _____ है । (सुनाता / सुनाती)

इ] तीन या चार शब्दों को जोड़ कर एक वाक्य बनाओ । [5 marks]

१. मैं _____

२. बाग में _____

३. पिताजी _____

४. आम _____

५. मेरे पास _____

ई] नीचे दिए गए शब्दों के विलोम शब्द चुन कर लिखो । [5 marks]

१. खट्टा - _____

२. रात - _____

३. ऊपर - _____

४. आया - _____

५. बाहर - _____

गया


नीचे

भीतर


मीठा

दिन

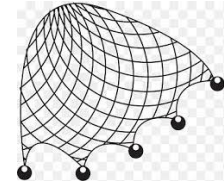
उ] सही मात्रा लगाकर शब्दों को पूरा करो । [5marks]




कआ



शर



जल



घड़



बन्दक

1076 NADI SANGAM SCHOOL

Weekly Home Study Package Number 13

YEAR 2 ASSESSMENT

MARKS: 25

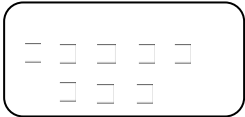
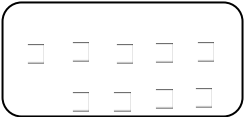
NAME: _____

SECTION A

MULTIPLE CHOICE

(5 Marks)

Circle the letter of the correct answer.

1. Add		+		=	_____								
A. 8			B. 9		C. 17								
2. 39 = _____ tens + _____ ones													
A. 3, 9			B. 9, 3		C. 2, 9								
3. Work out the answer.													
	<table border="1"><tr><td>Tens</td><td>Ones</td></tr><tr><td>2</td><td>0</td></tr><tr><td>-</td><td>4</td></tr><tr><td> </td><td> </td></tr></table>	Tens	Ones	2	0	-	4					A. 24	
Tens	Ones												
2	0												
-	4												
				B. 0									
				C. 16									
4. Jia has 47 stones. John gives her 31 more. How many does she have altogether?													
A. 16			B. 78		C. 87								
5. 4, 8, 12, _____, 20. The missing number is _____.													
A. 13			B. 16		C. 18								

SECTION B

MATCHING



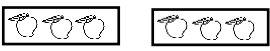

(5 Marks)

Write the letter of the correct answer in the space provided

- | | | |
|-----------------|-------|-------|
| i) Thirty-eight | _____ | A. 15 |
| ii) 35 - 2 = | _____ | B. 10 |
| iii) 5 twos = | _____ | C. 38 |
| iv) 7 + 8 = | _____ | D. 24 |
| v) 6 x 4 = | _____ | E. 33 |

SECTION C**SHORT ANSWER****(15 Marks)**

Work out the solutions for the following questions. Show workings in the space provided.

Question	Working	Answer																																
<p>Solve the following</p> <p>1. <table border="1" style="display: inline-table; vertical-align: middle;"> <tr><td>Tens</td><td>Ones</td></tr> <tr><td>2</td><td>4</td></tr> <tr><td>-</td><td>2</td></tr> <tr><td> </td><td> </td></tr> <tr><td> </td><td> </td></tr> </table> </p> <p>2. <table border="1" style="display: inline-table; vertical-align: middle;"> <tr><td>Tens</td><td>Ones</td></tr> <tr><td>4</td><td>5</td></tr> <tr><td>+</td><td>5</td></tr> <tr><td> </td><td>3</td></tr> <tr><td> </td><td> </td></tr> <tr><td> </td><td> </td></tr> </table> </p> <p>3. <table border="1" style="display: inline-table; vertical-align: middle;"> <tr><td>Tens</td><td>Ones</td></tr> <tr><td>5</td><td>6</td></tr> <tr><td>-</td><td>3</td></tr> <tr><td> </td><td> </td></tr> <tr><td> </td><td> </td></tr> </table> </p>	Tens	Ones	2	4	-	2					Tens	Ones	4	5	+	5		3					Tens	Ones	5	6	-	3						<p>1. ___</p> <p>2. ___</p> <p>3. ___</p>
Tens	Ones																																	
2	4																																	
-	2																																	
Tens	Ones																																	
4	5																																	
+	5																																	
	3																																	
Tens	Ones																																	
5	6																																	
-	3																																	
<p>Work out the sums and differences and write $<$, $>$, or $=$ for each.</p> <p>4. $16 + 2$ ___ 20</p> <p>5. $7 + 6$ ___ $6 + 7$</p> <p>6. $26 + 4$ ___ 21</p>		<p>4. ___</p> <p>5. ___</p> <p>6. ___</p>																																
<p>Solve</p> <p>$34 + 5 = 39$</p> <p>7. $35 + 4 =$ ___</p> <p>$39 - 4 = 35$</p> <p>8. $39 - 5 =$ ___</p>		<p>7. ___</p> <p>8. ___</p>																																
<p>9. Sam has 49 buttons. He gave 33 to his sister. How many buttons are left?</p>		<p>9. ___</p>																																
<p> cars x ___ tyres</p> <p>10. ___ cars x ___ tyres</p> <p>11. ___ x ___ = ___</p> <p>12. ___ + ___ + ___ + ___ = ___</p>		<p>10. ___</p> <p>11. ___</p> <p>12. ___</p>																																
<p>Complete the following</p> <p>13.  ___ x ___ = 12</p> <p>14.  ___ x ___ = 6</p> <p>15.  ___ x ___ = 15</p>		<p>13. ___</p> <p>14. ___</p> <p>15. ___</p>																																