


NADI SANGAM SCHOOL

WEEKLY HOME STUDY PACKAGE #13

SOLUTIONS

YEAR 5

04/10/21- 08/10/21



1076 NADI SANGAM SCHOOL

YEAR 5

MATH

WEEKLY HOME STUDY PACKAGE #13- SOLUTIONS

Solve the following multiplications.

$$\begin{array}{r} 1. \quad 17.96 \\ \times \quad 3 \\ \hline \textcolor{red}{53.88} \end{array}$$

$$\begin{array}{r} 2. \quad \$39.27 \\ \times \quad 8 \\ \hline \textcolor{red}{\$314.16} \end{array}$$

3. Paula bought 8 books costing \$10.95 each. How much did he spend?

$$\begin{array}{r} \$10.95 \\ \times \quad 8 \\ \hline \textcolor{red}{\$87.60} \end{array}$$

Calculate the answers to the divisions.

$$\begin{array}{r} 1. \quad \textcolor{red}{04.3} \\ 3 \overline{)12.9} \\ - \textcolor{red}{12.0} \\ \hline \textcolor{red}{00.9} \\ - \textcolor{red}{00.9} \\ \hline \textcolor{red}{00.0} \end{array}$$

$$\begin{array}{r} 2. \quad \textcolor{red}{07.2} \\ 7 \overline{)50.4} \\ - \textcolor{red}{49.0} \\ \hline \textcolor{red}{1.4} \\ - \textcolor{red}{1.4} \\ \hline \textcolor{red}{0.0} \end{array}$$

Multiply

$$1. \quad 10 \times 0.04 = \textcolor{red}{0.4}$$

$$2. \quad 100 \times 0.04 = \textcolor{red}{4.0 \text{ or } 4}$$

Divide

$$1. \quad 0.7 \div 10 = \textcolor{red}{0.07}$$

$$2. \quad 0.7 \div 100 = \textcolor{red}{0.007}$$

1076 NADI SANGAM SCHOOL

YEAR 5

ENGLISH

WEEKLY HOME STUDY PACKAGE #13- SOLUTIONS

Fill in the blanks with appropriate simple present tense form of the verb given in the brackets.

- A. The airplane **arrives** at seven o'clock tonight (arrive)
- B. I will phone when my mother **comes** back. (come)
- C. The sun **rises** from the east. (rise)
- D. The next term **begins** on Monday. (begin)
- E. Unless we **start** now we won't be able to finish the sandwich. (start)
- F. Let's wait until he **finishes** copying his homework. (finish)
- G. The doctor **examines** the boy and later gave his medicine. (examine)
- H. She **became** a road engineer. (be)
- I. When does the next bus **leaves** for Nadi. (leave)
- J. Jane **watches** her daughter as she plays with her friends. (watch)

B. Write the simple past tense form for the verbs given in the brackets at the end of each sentence for each blank space.

- 1. Mr Gusa picked up a stone and **threw** it at the fierce dog. (throw)
- 2. Atama filled his water bottle and **drank** most of it straightaway. (drink)
- 3. Brij dived into the river and **swam** to the other side. (swim)
- 4. The happy children laughed and **sang** all the way home. (sing).
- 5. Bese **ate** his lunch quickly and ran outside to play. (eat)

1076 NADI SANGAM PRIMARY SCHOOL

YEAR 5

SOCIAL STUDIES

WEEKLY HOME STUDY PACKAGE # 13- SOLUTIONS

Answer the following questions:

1. List two uses of land.
Farming/ Building houses, roads, bridges/ Building hotels, industries and commercial buildings/ Recreational facilities such as parks
2. Write one advantage of subsistence farming.
Easy to obtain/ Cheap and cost effective/ Does not require special skills.
3. Write one disadvantage of commercial farming.
Destroys habitats of organisms/ Causes pollution (chemicals)/ High investment cost (machinery, skilled farmers)
4. How does government assist the farmers?
Provides training on new methods of farming/ Tools for farming/ Provides fertilizers, weedicides and pesticides, seedlings/ Provides advice by agricultural officers.
5. Where does Fiji mostly import oil from?
USA
6. Define the following terms:
 - a. Farming- Is the activity of growing crops and raising livestock.
 - b. Subsistence farming- Is done in small scale and it is for personal consumption, not for sale.
 - c. Commercial farming- is done in large scale and is for selling purpose.
 - d. Import- buying goods from other countries.
 - e. Export- selling goods to other countries.

1076 NADI SANGAM SCHOOL

YEAR 5

ELEMENTARY SCIENCE

WEEKLY HOME STUDY PACKAGE # 13- SOLUTIONS

Answer the following questions:

1. What does power stations use to reduce current?
A transformer
2. What is a transformer?
Is a device that makes electric current smaller or larger.
3. How does electric current move?
Through underground cables and overhead wires.

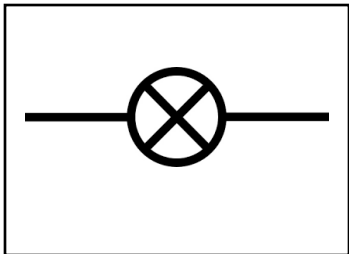
Use the words given below to answer the questions that follows:

loop	complete	energy	path	negative	positive	electricity
------	----------	--------	------	----------	----------	-------------

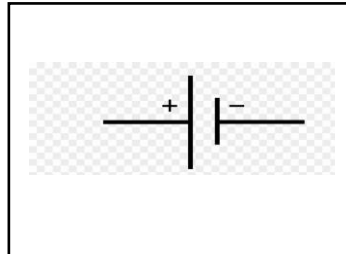
A circuit is a **path** that allows **electricity** to pass through it. Electricity always travels from the **negative** to the **positive**. A circuit will only work if it is **complete**. This means it must make a complete **loop**, otherwise the electrical **energy** cannot flow.

Draw the following symbols:

1. Bulb



2. Battery



1076 NADI SANGAM PRIMARY SCHOOL

YEAR 5

HEALTHY LIVING

WEEKLY HOME STUDY PACKAGE # 13- SOLUTIONS

Answer the questions given below:

1. Why should we wash our hands after visiting the toilet?
To get rid of germs.
2. Name 2 diseases caused the germs.
Measles, Trachoma, diarrhea, Hookworm Infection.
3. How many steps are involved in proper way of washing hands?
8
4. Why is it important to dispose human waste properly?
 - To avoid contamination of water sources
 - To prevent diseases
5. How are germs related diseases caused?
 - Improper disposal of sewage
 - When people do not practice proper toilet hygiene.

1076 NADI SANGAM SCHOOL

YEAR 5

WEEKLY HOME STUDY PACKAGE #13- SOLUTIONS

अभ्यास (Activity)

दिए गए शब्दों को चुनकर , पत्र के खाली स्थानों को भरिए।

नमस्ते , पाठशाला , बुखार , सूवा , क्षमा , कार्य , अध्यापक , आराम , शिष्य , बीमार

तुम्हारा नाम सचींद्र कुमार है और तुम नसीनू, सूवा में रहते हो। तुम बीमार हो और पाठशाला नहीं जा सकते। पत्र लिख कर अपने अध्यापक को सूचित करो।

नसीनू

सूवा

५ अक्टूबर २०२१

पूज्य **अध्यापक** जी

सादर **नमस्ते**

मैं आज **पाठशाला** नहीं आ सकूंगा क्योंकि मैं **बीमार** हूँ। मुझे **बुखार** है। मैं सुबह डाक्टर के पास गया था और उन्होंने मुझे **आराम** करने को कहा है।

आशा है आप मुझे पाठशाला न आने के लिए **क्षमा** करेंगे। मैं वापस पाठशाला आकर बचा हुआ **कार्य** पूरा कर लूँगा।

आपका **शिष्य**

सचींद्र कुमा