

1076 NADI SANGAM SCHOOL

YEAR 6

HOME STUDY PACKAGE 15


FORMATIVE ASSESSMENT 2

MATHS - SOLUTION

MARK 20

NAME: _____

SECTION A (10m)

Use the symbol < or > or = to make the statement true for parts a, b, c.		
a) 256,721 _____ 25 hundreds + 6tens + 2 ones		>
b) $9 + 9 + 9 + 9 + 9$ _____ 9×6	$9 \times 6 = 54$ $9 \times 5 = 45$	<
c) 3hours _____ 60 minutes	3hours =180mins	>
Solve and write your answer in the ANSWER column for parts d-j.		
d) Name the angle shown below. 		Straight line Angle
e) 2 hours is equal to _____ minutes		120
f) Normal body temperature is _____		37°c
g) Round off 50,168 to the nearest ten thousand _____.		50,000

h) Change 0.23 into fraction _____		23/100
i) Solve for r . $r + 5 = 12$	12-5=7 7+5=12	R=7
j) Simplify: $\frac{10}{16}$	10÷2=5 numerator 16÷2=8 denominator	5/8

SECTION B

(10m)

1. Multiply these decimals

100 x 3.03 = 303/303. Shift two decimal place to the right.

2. Calculate the area if the length is 7cm and width is 4cm. $A=LXW$

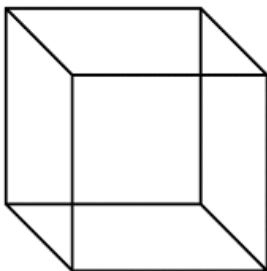
$$=7X4$$

$$=28\text{cm}^2$$

3. Round off 4.3 to the nearest km. 4km

4. Change to 24 hour time 7:30pm. 1930hours

5. Draw Cube.



1076 NADI SANGAM SCHOOL

YEAR 6

HOME STUDY PACKAGE 15

FORMATIVE ASSESSMENT 2

ENGLISH-SOLUTION

TOTAL: 20 MARKS

NAME: _____

SECTION A

POEM

(5M)

SEEDS

*Feel the seeds
Feel the smoothness
Black in color
Oval in shape
With a little white entrance
Soon to grow
Into new buds and trees
Oh. Nature how lovely you are
Moses Wateha'a*

QUESTIONS

1. Who is the poet? **Moses Watehu's** (1m)
2. Is the title suitable for the poem? Why? **Yes because the whole poem talks about seed Germination.** (2m)
3. Explain how does a seed looks like? **Black in color and oval in shape** (1m)
4. Explain why you like / dislike this poem? **I like this poem because it is simple and easy To understand and explains about seed germination process.** (1m)

SECTION B**PREFIX****(5M)**

Add the Prefix words using (ir, dis, un, in, im)

1. Relevant-**Irrelevant**
2. Human- **Inhuman**
3. Possible-**Impossible**
4. Obey- **Disobey**
5. Fair- **Unfair**

SECTION C**NOUNS****(5M)**

Underline the nouns in the sentences below.

1. **Joe** goes to **market** every day.
2. **Bin** runs as far as the **playground**.
3. The new **tablecloth** is on the **table**.
4. **Hammer, nails** and **saws** are resting on the **table**.
5. **Vijay** lives in **Toronto**.

SECTION D**PREPOSITION****(5M)**

Circle the preposition in each sentences

1. Dinesh walked **across** the street.
2. Andy drove **around** the block.
3. Meli left **before** lunchtime.
4. Tom's office is **near** the cafeteria.
5. Timoci sat **on** his new rocking chair.

1076 NADI SANGAM SCHOOL

YEAR 6

HOME STUDY PACKAGE 15

FORMATIVE ASSESSMENT 2

HINDI SOLUTION

संस्कृति

पहला भाग

सही जवाब लिखिए | अंक : १०

१. धर्म के दो लक्षण बतलाइये?

- धृति (धैर्य -कभी घबराना नहीं चाहिए)
- क्षमा (दूसरों को क्षमा कर देना चाहिए)
- दम (अपने मन को काबू में रखना)
- अस्तेयम् (किसी दूसरे की चीज को कभी नहीं चुराना)
- शौचम् (अपने आप को हर तरह से पवित्र रखना)
- इन्द्रिय निग्रह (अपनी इंद्रियों को वश में रखना)
- धी : (बुद्धि को बढ़ाना)
- विद्या (विद्या ग्रहण करना)
- सत्य (हमें सदा सत्य बोलना चाहिए)
- अक्रोध (मनुष्य को कभी क्रोध नहीं करना चाहिए)

२. श्री राम के जन्म उत्सव को किस पर्व का नाम दिया गया है?

राम नवमी

३. हमारी इज्जत किस बात पर निर्भर करती है?

हमारा रहन, सहन और पहनावा ।

४. सबर का फल कैसा होता है?

मीठा

५. स्वर्ग का मतलब क्या है ?

जहाँ समस्त सुखों का आनंद प्राप्त हो, शान्ति हो ।

ख. MATCH

अंक : ५

१.श्री कृष्ण के उपदेश	ग	क. अच्छा आचरण
२.हमारा शत्रु	घ	ख. सिखों का त्योहार
३. वैशाखी	ख	ग. गीता
४.शीलता	क	घ. क्रोध
५. आत्मा के बिना	च	च. शरीर बेकार है ।

ग.चित्र

चित्र देख कर इनके नाम लिखिए

घड़ी	दिया	मछली	रंगोली	सूर्य
------	------	------	--------	-------



मछली




सूर्य



रंगोली



दिया



घड़ी

1076 Nadi Sangam School
Year 6 Vosa VakaViti HSP 15
Solution for Formative Assessment 2

(A) Vosa wiliwili. Vukica na iyatuvosa e ra ki na:

(a) lewe rua (b) lewe tolu (c) lewe levu

1. Ko a vosa vei koya.

- a. E rau a vosa vei rau.
- b. E ratou a vosa vei iratou.
- c. E ra a vosa vei ira.

2. Au a sota kaya mai Tavua.

- a. Keirau a sota kei rau mai Tavua/ Keirau a sotavi rau mai Tavua.
- b. Keitou a sota kei iratou mai Tavua/ Keitou a sotavi iratou mai Tavua.
- c. Keimami a sota kei ira mai Tavua/ Keimami a sotavi ira mai Tavua.

3. E raici iko talega ko koya.

- a. E rau a raici kemudrau talega.
- b. E ratou a raici iratou talega.
- c. E ra a raici ira talega.

4. Au a raici koya mai na koro.

- a. Keirau a raici rau mai na koro.
- b. Keitou a raici iratou mai na koro.
- c. Keimami a raici ira mai na koro.

(B) Vakayagataka na matanivola levu, icegu kei na ivakatakilakila ni vosa me volai kina vakadodonu na iyatuvosa.

a. drau sa lako tu ki vei a taro na tamata ko ya

“Drau sa lako tu kivei? a taro na tamata ko ya.

b. keirau cocoka tiloko tu la mai e rau sauma yani na veitacini

“Keirau cocoka tiloko tu la mai,” e rau sauma yani na veitacini.

c. raica drau qai lesu tale mai nimataka e kaya na turaga

“Raica drau qai lesu tale mai nimataka,” e kaya na turaga.

1076 NADI SANGAM SCHOOL

YEAR 6

HOME STUDY PACKAGE 15

FORMATIVE ASSESSMENT 2

SOCIAL STUDIES SOLUTION

18.10.21 – 22.10.21

SECTION A

MULTIPLE CHOICE

10 MARKS

1. Why is Fiji a multicultural country?

- A. Many different cultural groups of people live together
- B. Only one cultural group of people live here
- C. We grow many types of root crops
- D. We have a lot of trees

2. Fiji became a British colony in _____.

- A. 1970
- B. 1874
- C. 2000
- D. 2014

3. Income tax is paid by _____.

- A. employers
- B. employees
- C. business people
- D. pedestrians

4. In 1879 Indians first arrived in Fiji in the ship called _____.

- A. Kaunitoni
- C. Yasawa Flyer
- B. Leonidas
- D. Tiger 4

5. Abel Tasman discovered Fiji in the year _____.

- A. 1653
- B. 1643
- C. 1633
- D. 1663

SECTION B**FILL IN THE BLANKS****5 MARKS**

Fill in the blank spaces using the word list provided below. Write your answers in the space provided in the Answer Booklet.

People	Cannibalism	Seru Cakobau	2013	Map
--------	-------------	--------------	------	-----

1. Before Christianity, there were wars and **cannibalism** in Fiji.
2. **Seru Cakobau** Ceded Fiji to Great Britain.
3. The constitution that we are using now was established in the year **2013**
4. A **map** is a drawing of a place seen from above.

5. The Human environment is part of the natural environment which **people** have changed for different uses.

SECTION C**DEFINITIONS****10 MARKS**

Define the following terms:

1. Paid Work – **is the service people give for someone else so that they may earn wages or salaries.**
2. Constitution – **is the supreme law of the land.**
3. Temporary Work – **these workers usually work for a period of time and depending on the contract they sign before they begin to work.**
4. Barter System **is the exchanging of goods and services without the use of money.**
5. Employee **is the person working for another person or a business for a pay.**

1076 NADI SANGAM SCHOOL

YEAR 6

HOME STUDY PACKAGE 15

FORMATIVE ASSESSMENT 2

HEALTHY LIVING SOLUTION

MARKS: 20

NAME: _____

SECTION A

MULTIPLE CHOICE: (5marks)

1. What is a fracture?

- A. Breaking of a bone
B. Bending of a bone
C. Dislocating of a bone
D. Bleeding from a bone

2. Joint is where

- A. two or more bones meet
B. bones overlaps each other
C. blood vessel follows
D. white blood cells meet red blood cells

3. There are how many bones in our body?

- A. 207 B. 206 C. 231 D. 147

4. What is black dot in the middle of the eye called?

- A. pupil B. lens C. iris D. retina

5. _____ is the fiber that sends impulses through the body.

- A. Nerve B. Neuron C. Bone D. Muscle

SECTION B: Definition (5marks)

Define the following terms given below. Each question is worth one mark.

1. Recycling- **is the process of converting waste materials into new materials.**
2. Veins- **are blood vessels that carries blood to the heart.**
3. Conflicts- **is a clash of interest, a disagreement or argument between people.**
4. Balance meal- **eating foods from the three food groups. A balanced meal includes the right amount of food, variety and nutrition.**
5. Fertility- **defined as the quality of being fertile. For Example; improve the soil fertility by adding compost.**

Section C: Short Answer Questions (6marks)

1. Why balance meal is important?

- **A balanced diet is important because it supplies nutrients to your body to work effectively.**
- **Helps you to control weight.**
- **Protects you from NCD's**

2. How should we take care of our eyes?

- **Wear protective eye wear**
- **Do regular exercise**
- **Eat a healthy and balanced meal**

3. Define Scald- **a burn or injury caused by hot liquid or steam.**

4. List examples of bodybuilding food?

- **Fish**
- **Cheese**
- **Milk**
- **Eggs**

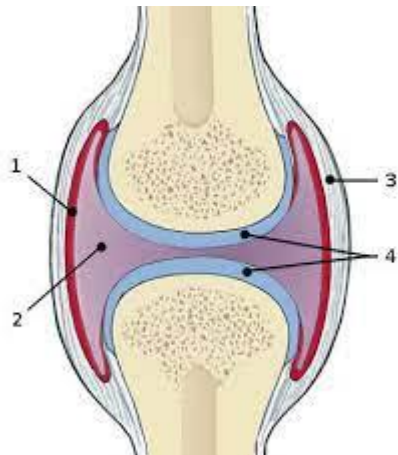
5. Why is it important to do back yard gardening?

- It provides you with fresh vegetables
- Keeps you fit
- Helps you to exercise in the form of gardening

6. Define peer pressure- is when you are influenced by other people (your peers) to act in a certain way. For example: your friends will convince you to do things which they are doing.

Section D: (4marks)

Label the joint diagram given below



1. Synovial Lining
2. Synovial fluid
3. Ligaments
4. Cartilage

1076 NADI SANGAM SCHOOL
YEAR 6
HOME STUDY PACKAGE 15
FORMATIVE ASSESSMENT 2
ELEMENTARY SCIENCE SOLUTION

MARKS : 20

NAME: _____

SECTION A

SHORT ANSWERS (7marks)

1. Give examples of natural materials. (1m)

- Wool
- Cotton
- Sand

2. What is matter? (1m)

Matter is anything that occupies space and has mass.

3. List two rules of science lab. (2m)

- Do not touch equipment or chemicals in the lab until your teacher gives you instructions.
- Don't eat or drink in the lab

4. Define the term series circuit. (1m)

Comprises a path which the whole current flows through each component.

5. Name two traditional/ native plants of Fiji. (2m)

- Mangroves
- Bamboo
- Tagimoucia

SECTION B

DIAGRAM AND LABELLING (8marks)

Part One: Illustrate the following. Each drawing is worth one mark.

1.Solar Panels

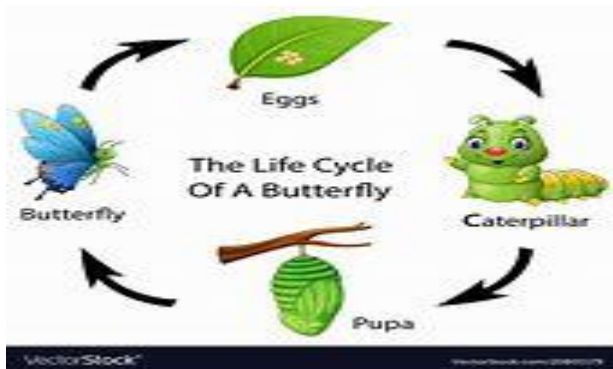
2. Wind Mill




3. Tongs



4. Life cycle of a butterfly



5. Beaker



S

Label the circuit diagram below.



1. Switch
2. Battery
3. Bulb

SECTION C

TRUE/FALSE (5 MARKS)

1. There are two sources of energy. **True**
2. Renewable energy can be used over and over again. **True**
3. Wind mills can mostly be found in Lautoka. **False**
4. Electromagnet is when a metal is made into a magnet by passing electricity through it. **True**
5. Things that are needed to construct electromagnet are iron nail, copper wire and battery. **True**