

NADI SANGAM SCHOOL

HOME STUDY PACKAGE 13

ASSESSMENT WEEK

YEAR 7



2021

1076 NADI SANGAM SCHOOL
YEAR 7 - ENGLISH
WEEKLY HOMESTUDYPACKAGE
ASSESSMENT

TOPIC: DICTIONARY, LIBRARY AND MASS MEDIA [6 marks]

DICTIONARY

Study the dictionary entry below to answer questions 1 and 2.

Society (so siti) **n** (pl – ties) **1.** The system of living together in groups **2.** an organized community distinguished by ideas and customs **3.** a group formed for a specific purpose eg.a debating society **4.** Companionship **adj** concerned with fashionable affairs society gossip.

1. The abbreviation **pl** in (pl – ties) indicates the
A. tense B. meaning C. pronunciation D. plural

2. Krish is a member of the Anti – Litter Society which helps to keep the environment clean.Which meaning of the word society is used in the sentence given above?
A. n 1 B. n 3 C. n 2 D. n 4

3. **Library**

- a. Which part of the book holds the pages together?
(1m)

- b. Which section in the library would you find encyclopedias?
(1m)

4. **Mass Media**

- a. Name a daily newspaper you like reading.
(1m)

- b. State one disadvantage of television.
(1m)

PART II USAGE [4 marks]

1. Rewrite the following using the instructions given in brackets.

- i. (Join the sentences using, **unless** as the beginning)

He can't cross the river. He doesn't have a boat. **(1 m)**

- ii. (Join using: **when**)

Mark got out of the seat. The old woman got into the bus.

3 Rewrite in Reported Speech. **(1m)**

"Do not forget your rugby boots," the coach reminded the boys.

4 Rewrite in Direct Speech. **(1m)**

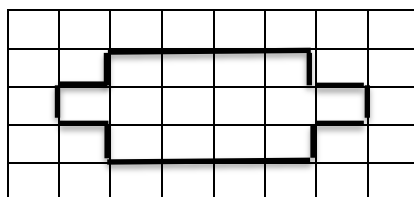
Peni asked Jacob where his father was.

1076 NADI SANGAM SCHOOL
YEAR 7 MATHEMATICS
WEEKLY HOME STUDY PACKAGE
ASSESSMENT

MULTIPLE-CHOICE QUESTIONS

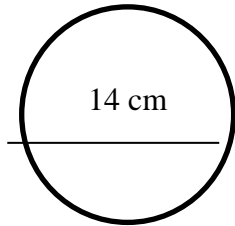
There are twenty questions in this section. Each question is worth 2 marks. Answer all questions. Circle the letter of the best answer.

1. Thirty five thousand written as a number is
A. 350 B. 3,500 C. 35,000 D. 350,000
2. Which set of numbers is arranged in ascending order?
A. {4,976 6,325 7,641 9,217} B. {6,325 4,976 7,641 9,217}
C. {7,641 9,217 6,325 4,976} D. {9,217 7,641 6,325 4,976}
3. The number 7,485 when rounded off to the nearest hundreds will be
A. 7,000 B. 7,400 C. 7,500 D. 8,000
4. Which set best describes all the factors of 50?
A. {2, 25} B. {1, 2, 5, 10, 25, 50} C. {1, 2, 25} D. {50, 100, 150, 200, 250}
5. The fourth square number is
A. 4 B. 16 C. 36 D. 64
6. $-6 - 4 =$
A. -10 B. -2 C. 2 D. 10
7. The number that breaks the sequence is {250, 225, 215, 200, 175, 150}
A. 150 B. 175 C. 200 D. 215
8. The value of y in $3y + 4 = 16$ is
A. 4 B. 12 C. 13 D. 16
9. What is the area of the given shape?



- A. 26 cm^2 B. 18 cm^2 C. 14 cm^2 D. 12 cm^2

10. Study the circle given below and answer the question.



$$\pi = \frac{22}{7}$$

When the diameter of the circle is 14 cm, the circumference will be _____.

- A. 22 cm B. 44 cm C. 77 cm D. 154 cm

11. 5,723 millilitres (ml) converted to Litres (L) is

- A. 0.005723 L B. 0.05723 L C. 0.5723 L D. 5.723 L

12. Mr Kumar weighs 95 kg and his eldest son weighs 45.05 kg. What is the difference in their weights?

- A. 49.95 kg B. 95 kg C. 95.5 kg D. 140.05 kg

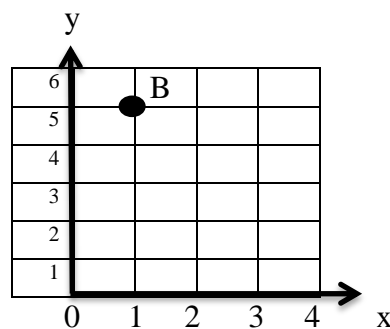
13. What time would be one and a half hours from 6.30 pm?

- A. 5 pm B. 8 pm C. 9 pm D. 10 pm

14. Mrs. Singh bought a bundle of dalo for \$10 from a farmer and she later sold it for \$15 at the market. How much profit did she make?

- A. \$ 5 B. \$ 10 C. \$ 15 D. \$ 25

15. Study the coordinate plane given below. The coordinates for point B are:



- A. (1, 4) B. (1, 5) C. (4, 1) D. (5, 1)

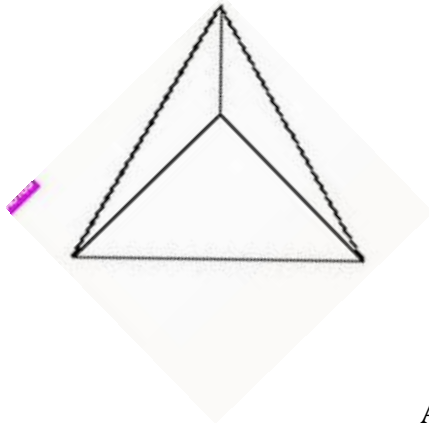
16. Use the diagram to answer the question given below.



The diagram above is a

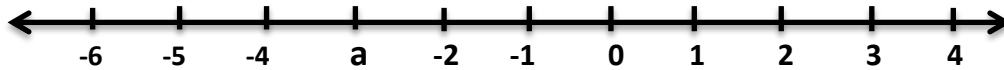
- A. cylinder. B. cone. C. sphere. D. circle.

17. How many faces are there in the triangular pyramid given below



- A. 4 B. 5 C. 6 D. 7

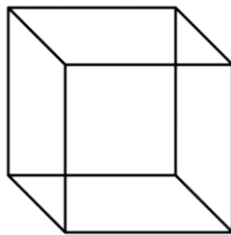
18.



The missing value for a is _____.

- A. -4 B. -5 C. -3 D. 3

19. A cuboid has _____ edges.



- A. 8 B. 12 C. 6 D. 4

20. Study the table given below and answer the question.

Online Class Attendance for the week 20 – 24 September

English	Math	Basic Science	Social Science	Healthy Living	Hindi
24	29	23	21	28	23

Which class had the most number of children

- A. Healthy Living B. Social science C. Math D. English

1076 NADI SANGAM SCHOOL
YEAR 7
BASIC SCIENCE
WEEKLY HOME STUDY PACKAGE ASSESSMENT
20MARKS

SECTION A

MULTIPLE CHOICE

(20marks)

Circle the letter of the best answer in the following questions.

1. Reproduction, a feature of living things enables them to
 - A. increase in size.
 - B. get energy from food.
 - C. produce new off springs.
 - D. move all or part of itself.

2. Which of the following is an ecosystem?
 - A. A cassava patch only.
 - B. A cabbage garden only.
 - C. A scientific device used to study the environment.
 - D. Plants, animals and micro-organisms living in an area together.

3. Which of the following is not a living thing?
 - A. grass
 - B. cloud
 - C. tadpole
 - D. mushroom

4. Plants are also called
 - A. producers.
 - B. herbivores.
 - C. consumers.
 - D. decomposers.

5. Body structures such as teeth, mouth and jaws are responsible for
 - A. growth.
 - B. nutrition.
 - C. movement.
 - D. respiration.

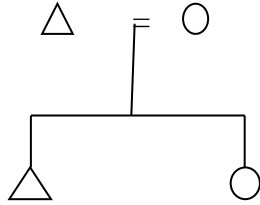
6. Solid, liquid and gas are three states of
 - A. matter.
 - B. elements.
 - C. responses.
 - D. measurements.

7. Salt is soluble in water because it
- A. is soft.
 - B. dissolves.
 - C. has crystals.
 - D. does not dissolve.
8. Some sugar is added to water in a cup. The mixture is a
- A. solute.
 - B. solvent.
 - C. solution.
 - D. suspension.
9. Wind can also be converted to electrical energy with the use of
- A. Windmills.
 - B. Wind vane.
 - C. Hydro plants.
 - D. Electric plants.
10. Which of the following is an example of a non-renewable resource?
- A. Air
 - B. Water
 - C. Sunlight
 - D. Fossil Fuels

1076 NADI SANGAM SCHOOL
YEAR 7
SOCIAL STUDIES
WEEKLY HOMESTUDY PACKAGE ASSESSMENT

Circle the letter of the best answer.

Use the diagram given below and your own knowledge to answer question 1.



1. The diagram above is an example of
 - A. an extended family
 - B. a nuclear family
 - C. a polygamous family
 - D. a polyandrous family

2. One of the advantages of having a small family is that:-
 - A. Work is not equally shared
 - B. Basic needs are affordable
 - C. Children cannot have all to them
 - D. Members can become individualistic and selfish

3. The environmental problems which the people of Tuvalu and other small islands in the South Pacific are vulnerable to are:-
 - A. River flooding
 - B. Climate change
 - C. Sea level Rise
 - D. Beetle attack

4. Questionnaire is
 - A. One of the tools used in social science for research work
 - B. Is a sub region of oceanic
 - C. ideas we have about a group of people
 - D. Information from any form of media

5. In Fiji an activity that would bring the citizen's together as one would be:-
 - A. Singing the national anthem
 - B. Speaking only one language
 - C. Inter-cultural marriages
 - D. Worshipping on god

6. Which particular group do fair skinned people belong to:-

- A. Micronesia
- B. Polynesia
- C. Melanesia
- D. Indonesia

7. The Maori are the Indigenous people of

- A. Australia
- B. Tonga
- C. Samoa
- D. New Zealand

8. The Fijian Government can be best be described as

- A. a republic
- B. a British Government
- C. a socialist
- D. an independent

9. What would be harmful to the environment?

- A. oil leakage
- B. Planting more trees
- C. recycling of plastic
- D. Leaning others culture

10. If you want to know about the a past, you'll study

- A. family recreation
- B. tourism
- C. Technology
- D. History

11. The skills, talents and abilities of people are examples of

- A. Raw materials
- B. Human resource
- C. stock and supply
- D. Equipment

12. The main source of foreign exchange in Fiji is

- A. Tourism
- B. Sugar
- C. Textile
- D. agriculture

13. The Olympic Games are held every _____ years.

- A. 1
- B. 2
- C. 3
- D. 4

14. Which country won this Year's South Pacific Games?

- A. Fiji
- B. Papua New Guinea
- C. New Caledonia
- D. Samoa

15. When a country is taken over and ruled by another country, it is called

- A. Population
- B. Coup
- C. government
- D. colonization

16. Recently a cyclone by the name of “WINSTON” affected which of the following Pacific islands the most?

- A. Fiji
C. Vanuatu
- B. Samoa
D. Cook Islands

17. Around 1500 B.C Fiji was settled by

- A. Melanesian seafarers
C. Aborigines
- B. Maoris
D. Gilbert Islands

18. The famous explorer who sighted Vanua Levu Island and Northern Taveuni in 1643 AD was

- A. Captain Cook
C. William Cross
- B. David Cargill
D. Abel Tasman

19. The capital of Cook Islands is

- A. Fiji
C. wellington
- B. Rarotonga
D. Canberra

20. The Hawaiian Islands in the North, New Zealand in The West, and Easter Island in the east belong to which group:

- A. Micronesian
C. Melanesian
- B. Polynesian
D. Malaysian

SECTION B:
[5 MARKS]

FILL IN THE BLANKS

Fill in the blanks using the words in the box given below.

rights	role	function	parents	family
--------	------	----------	---------	--------

Each person in a _____ has certain roles to play and these depend upon the relationship with other members of the family. Even though at times we act individually, as a family, we _____ like a team and do things _____ together. The _____ we play may defer depending on who we are and at times where we are. A young boy’s role will be different from his father and likewise to a mother and her daughter. When babies are born, they have the _____ to be fed, loved and cared for by the _____. As they grow older, they learn that they have to do things for other people as well.

1076 NADI SANGAM SCHOOL
YEAR 7
HEALTHY LIVING
WEEKLY HOME STUDY PACKAGE ASSESSMENT
20MARKS

Multiple choice

Circle the letter of the best answer for the following questions

1. Blood delivers oxygen and
 - A. air to the cells.
 - B. waste to the cells.
 - C. nutrients to the cells.
 - D. carbon-dioxide to the cells.

2. The flaps that prevent the backflow of blood to the heart is called the
 - A. valves.
 - B. ventricle.
 - C. pulmonary vein.
 - D. pulmonary artery.

3. A way to look after your circulatory system is by
 - A. smoking.
 - B. drinking alcohol.
 - C. having balanced meals.
 - D. having 3 meals in a day.

4. Personal rights refer to the rights of
 - A. someone in relation to others.
 - B. someone in relation to his parents.
 - C. a person in relation to his community.
 - D. each individual to do things without interference from others

5. Abuse of human rights often leads to
 - A. equality.
 - B. conflicts.
 - C. happiness.
 - D. peacefulness.

6. Household rules help teenagers to
 - A. be annoying.
 - B. be aggressive.
 - C. make life hectic.
 - D. feel safe and secure.

7. An effect of inhaling drugs can be
 - A. long life.
 - B. tiredness.
 - C. happy family.

D. never missing school.

8. Deliberately hurting somebody is

A. food abuse.

B. drug abuse.

C. alcohol abuse.

D. physical abuse.

9. Foods containing carbohydrates

A. gives energy.

B. builds the body.

C. repairs body cells.

D. protects body from diseases.

10. A cause of trauma may be

A. buying a new house.

B. receiving a scholarship.

C. the death of a loved one.

D. witnessing a happy ending.

1076 NADI SANGAM SCHOOL
YEAR 7 - हिन्दी HINDI
WEEKLY HOME STUDY PACKAGE 13
ASSESSMENT

संस्कृति [अंक २०]

अ. दिए गए शब्दों में से सही शब्द चुनकर इन वाक्यों को पूरा कीजिए।

१. _____ प्रसन्न रहने से आयु बढ़ती है।

क. पैर ख. आत्मा ग. शरीर घ. सर

२. मनुष्य के रहन-सहन पहनावा और खानपान _____ कहलाती है।

क. अधर्म ख. प्रभाव ग. संबंध घ. सभ्यता

३. जो व्यक्ति अपने कर्तव्य का पालन करता है वही _____ रहता है।

क. दुखी ख. सुखी ग. परेशान घ. स्वस्थ

४. किसी के पीछे उसकी निंदा करना _____ अपनी बात है।

क. बुरी ख. आम ग. अच्छी घ. उत्तम

५. दीपावली पर _____ को धन्यवाद देने के लिए घी के दीपक जलाते हैं

क. भाई ख. पिता ग. भगवान घ. पड़ोसी

आ. नीचे दिए गए वाक्यों को अच्छी तरह से पढ़ कर सही (v) या गलत (x) का निशान बनाइए

१. प्रार्थना विश्वास के साथ नहीं करनी चाहिए।

२. ईश्वर सब जगह रहते हैं।

३. हमेशा अच्छे लोगों की संगत करनी चाहिए।

४. रावण लंका का राजा था।

५. दीपावली से पहले सफाई नहीं करना चाहिए।

अंक :

20