

1076 NADI SANGAM SCHOOL

YEAR 8

CONSOLIDATED

**WEEKLY HOME STUDY
PACKAGE:17**

01/11 TO 05/11

2021

SECTION A**MULTIPLE CHOICE**

1. Raj's family of 2 adults and 2 children went to watch movies at Life Cinema D-max. If each adult paid \$10.00 and each child paid \$6.50, how much change will Raj get from a \$50.00 note?
A. \$16.50 B. \$17.00 C. \$33.00 D. \$33.50
2. A plane ticket costs \$75. Which calculation will give the new price if a fee of 10% is added to the price?
A. $\$75 \times \7.50 B. $\$75 - \7.50
C. $\$75 \div \7.50 D. $\$75 + \7.50
3. A crate filled with bottles weighs 4 kg. The bottles weigh 2.3 kg. What is the weight of the empty crate?
A. 1.7 kg B. 2.3 kg C. 6.3 kg D. 9.2 kg
4. There are 2 green, 4 blue, 3 orange and 3 yellow marbles. What is the probability that Rusiate picks a blue marble?
A. $\frac{4}{12}$ B. $\frac{1}{4}$ C. $\frac{1}{12}$ D. $\frac{8}{12}$
5. In the diagram given below, the cone and cylinder have the same height and diameter.
If the volume of the cylinder is 90 cm³, then the volume of the cone would be
A. 10 cm³ B. 30 cm³ C. 60 cm³ D. 90 cm³
6. Mereoni was given \$5.00 for her spending. She spent \$3.00 on snacks. What percentage of the money was spent on snacks?
A. 2 % B. 3 % C. 40 % D. 60 %
7. Shaveet borrows \$8,000 for 4 years from a bank to buy a car. What is the Simple Interest charged by the bank if the rate is 8% per annum?
A. \$320 B. \$640 C. \$1,280 D. \$2,560
8. $4^2 + 3^4 =$ _____
A. 13 B. 20 C. 28 D. 97
9. $7.2 \div 0.08 =$ _____
A. 0.09 B. 0.9 C. 90 D. 900
10. The value of p in the equation $2p - 6 = 10$ is
A. 2 B. 8 C. 11 D. 32

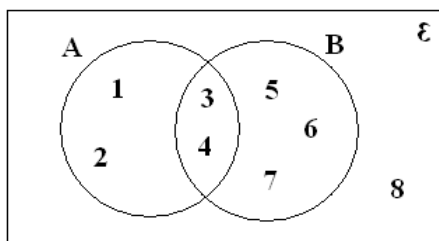
SECTION B**PROBLEM SOLVING**

21. Francis bought the following fruits from the market on a Saturday morning:

- 15 Mangoes
- 20 Pawpaw's
- 15 Oranges

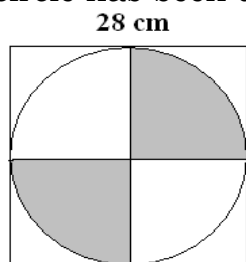
- (a) On a pie chart show how much percentage would represent one fruit?
(b) How much percentage would represent Oranges?
(c) What fraction (in simplest form) of the pie would be pawpaw's?

22. Refer to the diagram below to answer the questions that follow.



- List: (a) A
(b) B'
(c) A ∪ B

23. A circle has been drawn inside a square with quadrants shaded.



(Use $\pi = \frac{22}{7}$)

- (a) What is the **radius** of the circle?
(b) Find the area of the **unshaded** part.

24. A population survey showed **16,000** adults and children participated in a kite fly competition. $\frac{1}{4}$ of the population which flew the kite were adults.

- (a) What number of the kite flyers were adults?
(b) Calculate the number of children who flew the kites.
(c) If half of the adults are females. How many females participated in the competition?

25. The weight of a truck is 9.5 tonnes.

$$1 \text{ tonne} = 1000 \text{ kg}$$

- (a) The truck is loaded with another 3 tonnes of cargo. What is the total weight of the truck and the cargo in kg?
(b) If $\frac{2}{5}$ of the cargo is off-loaded, how many tonnes of cargo is left?

1076 NADI SANGAM SCHOOL
YEAR 8 – 2021
WEEKLY HOME STUDY PACKAGE 17
ENGLISHTREASURE ISLAND

Morgan: Pew (A) dead
Pew: Search him, you shirking lubber
Black Dog: Look, Pew, the chest. They've been here before us. Someone has turned the chest up.
Pew: Is it there? Flint's fist, is it there?
Black Dog: Can't see it here nohow.
Pew: Is it on Bill, then?
Morgan: Bill's been overhauled too. Nothing left
Pew: It's the _____. It's that _____.

a) Where and what were they doing before this conversation takes place?

b) Who Morgan referred to has died?

c) Describe Pew and what did he do to Captain Billy?

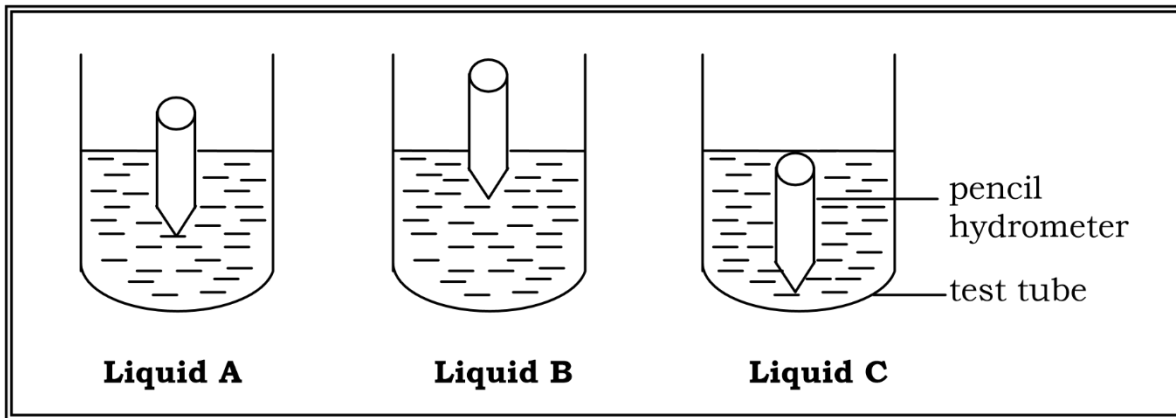
d) Explain the statement **"Bill's been overhauled too. Nothing left"**

e) What do you think was Pew's last statement?

_____.

1076 NADI SANGAM SCHOOL
YEAR 8 – 2021
WEEKLY HOME STUDY PACKAGE 17
BASIC SCIENCE

1. A student performed the experiment shown below to find the order of density for three different liquids. Study the diagram to answer the questions given below.



- a) What instrument is used to measure the density of liquid?

- b) Why is that instrument made thicker at the bottom?

- c) List the above liquid from most dense to least dense?

- d) Give reasons for the above choice.

- e) Label Liquid A, Liquid B and Liquid C

- f) State some other uses of a hydrometer.

पैषन 1

बोधन - Comprehension : इस अंश को पढ़कर नीचे दिए गए प्रश्नों के उत्तर दीजिए ।

दुनिया में हजारों जानवर हैं । इन सभी जानवरों में से कुत्ता को वफादार और स्वामी- भक्त जानवर माना जाता है । यह मालिक का हुक्म मानता है और अपने मालिक के लिए जान भी दे देता है ।

नानी का कुत्ता भी इसी श्रेणीमें आता है । वह गाँव वालों के लिए नानी थी मगर उसकी असली नाम किसी को मालुम नहीं था । नानी काफी बूढ़ी औरत थी । वह अकेली ही एक झोपड़ी में रहती थी । उसके पती की देहांत कब की हो गई थी । बच्चे नहीं थे जो उसकी देख-भाल करते । गाँव वालों के सहारे ही वह बाकी जिन्दगी गुजार रही थी । उस की मीठी वाणी और प्रेम व्यवहार गाँव वालों को मोहित किए हुए थी । इसी लिए गाँव वाले उस की मदद हररूप में करते थे ।

उसका कुत्ता टोमी नानी का रखवाला था । वह नानी के कई कामों में मदद करता था । नानी लाठी लिए जिधर निकलती, टोमी उस के साथ होता था । रात को नानी जब सोती थी तब टोमी घर और नानी का पहरेदार बनता था ।

नानी भी उसे अपना बेटा जैसा ही मानती थी । वह उस के हिस्से का खाना देना कदापि भूलती नहीं थी । एक गहरा अटूट प्रेम था दोनों में ।

एक रात नानी की मृत्यु हो गई । टोमी लोगों का दरवाजा अपने पंजों से खटखटा कर उन्हें अपने घर लाया । कुत्ते की आँखों में आँसू देख उपस्थित लोग दुखी हो गए ।

दूसरे दिन नानी का अंतिम संस्कार कर दिया गया । सभी लोग अपने अपने घर लौट आए । किसी ने भी टोमी पर ध्यान नहीं दिया ।

तीसरे दिन जब लोग दूध की क्रिया सम्पण करने शमशान-भूमि गए तो टोमी को नानी के कब्र पर लेटा पाया । वह मर चुका था । एक कुत्ते को इतना स्वामी भक्त देख कर उपस्थित लोगों की आँखें भर आईं ।

प्रश्न १

प्रत्येक सवाल के चार जवाबदिए गए हैं । सही जवाब चुन कर उसकत बगल वाले अक्षर पर गोला कार निशान बनाइए ।

१. नानी का कुत्ता कैसा था ?

क. ईमानदार

ख. स्वामी-भक्त

ग. चालाक

घ. चतुर

२. नानी की वाणी कैसी थी ?

क. मधुर

ख. धीमी

ग. तेज

घ. मीठी

३. गाँव वालों को नानी की किस व्यवहार ने मोहित कर रखा था ?

क. दोस्ती ने

ख. मैत्री ने

ग. प्रेम ने

घ. सेवा ने

४. रात में टोमी क्या करता था ?

क. घूमता था

ख. पहरा देता था

ग. सोता था

घ. भौकता था

५. नानी की मृत्यु क्यों हो गई थी ?

क. बीमार थी

ख. घायल थी

ग. बूढ़ी थी

घ. दुर्बल थी

६. “वफादार” का विलोम शब्द क्या है ?

क. ईमानदारी

ख. दगाबाज

ग. बेईमान

घ. होशियार

७. टोमी लोगों को क्यों अपने घर लाया था ? क्योंकि नानी

क. बीमार थी

ख. भूखी थी

ग. दवा देनी थी

घ. मर गई थी

८. पाठ में आए “मृत्यु” शब्द का अर्थ है

क. बीमार

ख. जन्म

ग. देहान्त

घ. बेहोश

९. पाठ में आए “अंतिम संस्कार” का अर्थ है

क. क्रिया काम

ख. अस्पताल ले जाना

ग. पानी में छोड़ना

घ. अंतिम दर्शन करना

१०. तीसरे दिन लोग शमशान-भूमि क्यों गए थे ?

क. कुत्ते को खोजना

ख. गडहा खोदना

ग. कुत्ते को लेने

घ. दूध की क्रिया पूरा करने

दूसरा भाग- व्याकरण और प्रयोग

अ.

घ. अनीता -----मामा के घर घूमने गई थी।

क. अपना

ख. अपने

ग. अपनी

घ. अपनी

ट. गाँव जाने के लिए यह रास्ता बहुत ----- है ।

क. लम्बा

ख. लम्बे

ग. लम्बी

घ. लम्बी

ड. हर शनिवार को सब लड़कियाँ साथ बैठ कर ----- है।

क. पढ़ती

ख. पढ़ते

ग. पढ़ता

घ. पढ़ती

ण. पूनम का भाई -----कक्षा में पढ़ता है ।

क. तीसरी

ख. तीसरे

ग. तीसरी

घ. तीसरा

थ. अगले रविवार को पायल का विवाह -----।

क. होगा

ख. होंगे

ग. होगी

घ. होंगे

आ. इन शब्दों का विलोम शब्द लिखो ।

1. प्रकाश- -----

2. जन्म- -----

3. हानि- -----

4. नीचे- -----

5. गर्मी- -----

इ. इन शब्दों के स्त्रीलिंग लिखो ।

1. पुरुष-----

2. श्रीमान्- -----

3. वर- -----

1076 NADI SANGAM SCHOOL
YEAR 8 – 2021
WEEKLY HOME STUDY PACKAGE 16
NA VEIKA VAKA VITI

NA VAKACACALI

1. Vakamacalataka na ka e a yaco e na wase ni vola ka volai koto e ra.
Vakamacalataka o cei soti e vakaitavi kina vata na vanua e vakayacori kina .

a) Wase 30 : Sa Yaco na Parofisai

b) Wase 31: A I Vakataotioti

NADI SANGAM SCHOOL
WEEKLY HOME STUDY PACKAGE # 17
COMPUTER STUDIES
YEAR 8

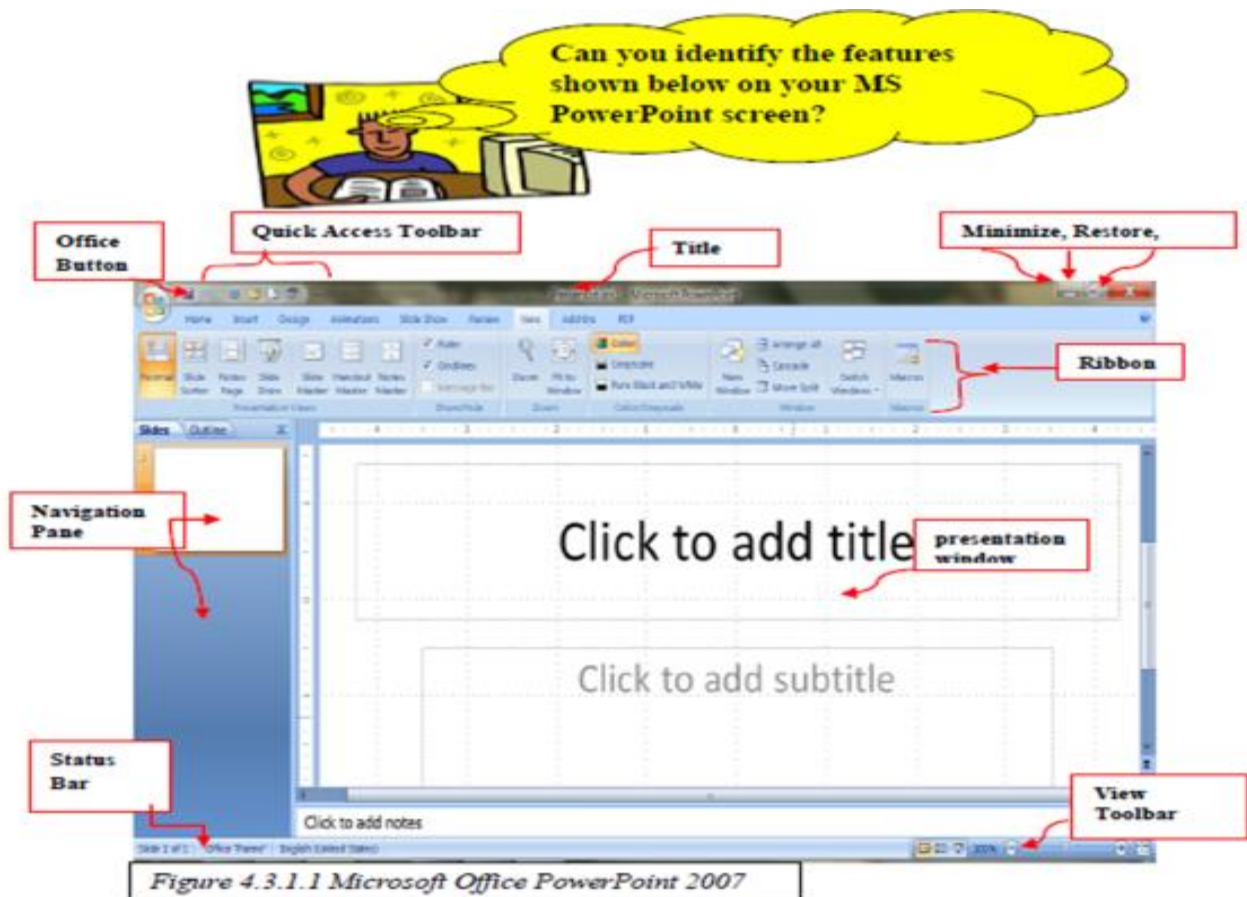
1st to 5th November

Topic 3: Multimedia and Presentation Tools continued.....
Reasons For Using Presentation Software

With the use of multimedia and presentation tools, presentations can look more **interesting and attractive**.

Multimedia helps to integrate text, sound, video and pictures to create presentations that are:

- **Appealing** – looks attractive and draws people's attention
- **Colorful** – has a colorful background, themes and styles of display
- **Interesting** – contains pictures, animation, music and other forms of sound



<u>Feature</u>	<u>Use</u>
Office Button	Click on this button to display commands available in PowerPoint.
Title Bar	Displays the name of the presentation that is being viewed
Minimize, Restore and Close Buttons	Located at the right end of the title bar Minimize button causes the window to shrink, Restore button maximizes the window if it has been minimized and Close button closes the application.
Quick Access Toolbar	a small toolbar next to the Office Button which contains some of the most common commands
Slide Navigation menu	Allows the user to easily move from one slide to another
Tabs	Allows users to click on it to access tools and commands.
Ribbon	Commonly used features are displayed on the Ribbon.
Status Bar.	contains certain details about the presentation
View Toolbar	Contains buttons for making the view appear larger or smaller

Table 4.3.1.1: Outline function for the screen and the toolbar

1076 NADI SANGAM SCHOOL
YEAR 8 WEEKLY HOME STUDY PACKAGE 17
HEALTHY LIVING, 2021

Use the picture and your knowledge to answer the question that follow



- (i) What is the wrong behavior in the picture?

- (ii) Name the proper area to cross road.

- (iii) State two things that can happen to the two people crossing.

- (iv) What do you think should be done to the careless road users as above?

Study this picture and answer the questions that follow



- (i) Identify the environmental issue above.

- (ii) Why do people engage in this issue?

- (iii) What should be done to people that contributed to the above issue?

- (iv) State two things you can do by reusing the things seen above.

1076 NADI SANGAM SCHOOL
YEAR 8 SOCIAL SCIENCE WEEKLY
WEEKLY HOMESTUDY PACKAGE

RESEARCH WORK AND PRESENTATION DURING YOUR ONLINE CLASSES

1. Identify a group of people and find out the following”

i. Their Origins

ii. Their features or characteristics

iii. The language they speak

iv. Their lifestyle

v. Traditional costumes

vi. Traditional food
