

NADI SANGAM SCHOOL
WEEKLY HOME STUDY PACKAGE

#18

YEAR 2



2021

1076 NADI SANGAM SCHOOL

English

Weekly Home Study Package # 18

Year: 2

Use the story **The Ant and the Dove** to do the following activities:

A. Vocabulary Learn These Words

searching carried struggling safety ground flew

B. Jumbled Words

Unjumble the following words and write it correctly:

- | | |
|--------------------|-------------------|
| 1. apin - _____ | 2. sagras - _____ |
| 3. nuhert - _____ | 4. ngorud - _____ |
| 5. obutrel - _____ | 6. ovde - _____ |

C. Fill in the Blanks

Choose the correct words from the list

heel safely plucked threw dropped searching

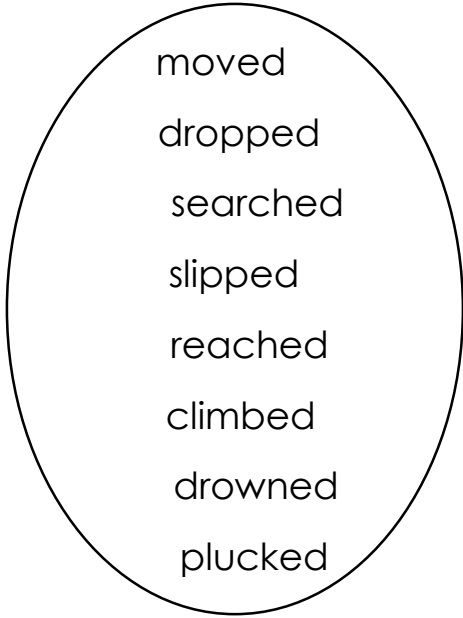
1. The ant was _____ for water.
2. The dove quickly _____ the leaf and _____ it into the water.
3. The leaf carried the ant _____ to the ground.
4. The hunter _____ his net towards the dove.
5. The ant bit the hunter on the _____.

D. Tenses

Write the **Past Tense** of the following **Verbs** in the space provided:

Pick the correct words from the list

1. drown - _____
2. slip - _____
3. climb - _____
4. drop - _____
5. pluck - _____
6. move - _____
7. search - _____
8. reach - _____



E. Add 'ing' to the following words

Example: speak – speaking

- | | |
|-------------------|-------------------|
| 1. search - _____ | 2. guess - _____ |
| 3. throw - _____ | 4. work - _____ |
| 5. feel - _____ | 6. pluck - _____ |
| 7. climb - _____ | 8. smell - _____ |
| 9. rest - _____ | 10. reach - _____ |

1076 NADI SANGAM SCHOOL

Weekly Home Study Package # 18

Year 2

General Subjects

Section A: Multiple Choice

Circle the letter of the correct Answer.

1.	Cows eats _____. A. grass B. bones
2.	Religious symbol for Sikhism is _____. A. Khanda B. Dharmchakra
3.	Boil the river water to kill _____. A. mosquitoes B. germs
4.	Wear _____ while playing. A. sports uniform B. sari
5.	The young of a cow is called _____. A. colt B. calf

Section B: Write True or False

1. Throw stone at your friend. _____
2. Smoke from burning rubbish is good for our health. _____
3. Switch off the lights when not in use. _____
4. Walk on the left hand side of the road. _____
5. Eat a lot of fruits and vegetables. _____

Section C: Fill in the Blanks

Pick words from the list:

heavy	lights	wash	dirty	safely
-------	--------	------	-------	--------

1. Keep matches _____.
2. Land slide is caused by _____ rain fall.
3. Germs live in a _____ place.
4. We should _____ our vegetables well before cooking.
5. Diwali is a festival of _____.

Section D: Matching

Write the letter of the correct answer in the space provided.

- | | | |
|-------------------|-------|-----------------------|
| 1. Flower | _____ | A. Turban |
| 2. Cabbage plants | _____ | B. cutting down trees |
| 3. Eid | _____ | C. Small roots |
| 4. Sikhs | _____ | D. Muslims celebrate |
| 5. Bad practice | _____ | E. Attracts insects |

1076 NADI SANGAM SCHOOL

YEAR 2

HINDI

WEEKLY HOME STUDY PACKAGE #18

कहानी "कौआ और चालाक लोमड़ी" पर आधारित अभ्यास ।

अ] सही शब्द लिखो ।

1. ज भो न - _____
2. नी प र - _____
3. च चों - _____
4. ने कि त - _____
5. ङा क टु - _____

आ] सही वाक्य बनाओ ।

1. कौए / भूख / लगी / एक / थी / को _____
2. पड़ा / था / पनीर / टुकड़ा / का _____
3. पानी / मुँह / लोमड़ी / के / में / आ / गया _____
4. हो / आप / सुन्दर / कितने _____
5. चोंच / कौए / ने / गाने / के / खोला / लिए / अपना _____

इ] पढ़ो , चित्र बनाओ और रंग भरो ।



पनीर



कौआ



पेड़

1076 NADI SANGAM SCHOOL

Weekly Home Study Package#18

Year: 2 Mathematics

Strand	Measurement
Sub Strand	Length/Capacity /Weights
Content Learning Outcome	<ul style="list-style-type: none">• To identify and use metre and centimetre rule.• To calculate volume by counting blocks volumes.• .To be able to identify the heaviest and the lightest in a group of objects.

Lesson Notes

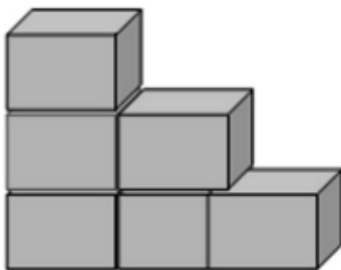
Centimetre (cm) and **metre (m)** are few ways to measure length of items and objects. **A centimetre ruler** is used to measure length of short items like pencil, pen, book, knife and so on. **A metre ruler** is used to measure longer items or lengths such as blackboard, car, and classroom etc.

Worksheet

Volume in Blocks

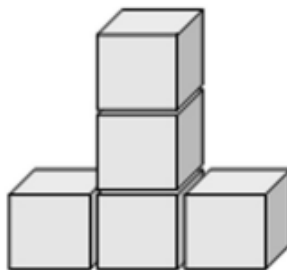
A. Count and write the number of cubes used.

1.



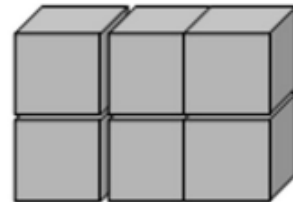
6 cubes

2.



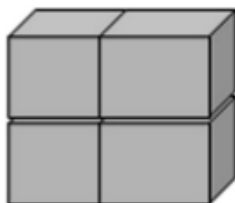
___ cubes

3.



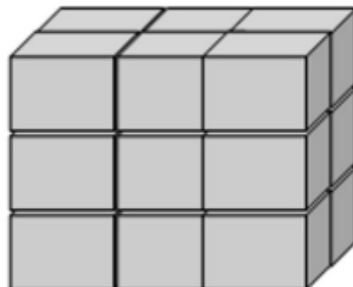
___ cubes

4.



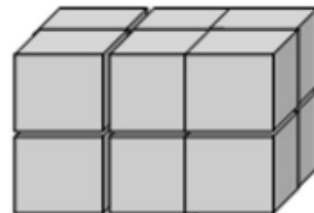
___ cubes

5.



___ cubes

6.




___ cubes

B. Which one will be used to measure these: Metre ruler or centimetre ruler?




C. Heavier and Lighter

1. Look at the objects in each group and circle the heaviest.







2. Look at the objects in each group and circle the lightest.



1076 Nadi Sangam School
Year 2 Vosa VakaViti
WHSP 18 (01/11/21)

Nanamaki ni vuli	Wilivola kei na Saumi Taro
Veika me rawata e dua na gone	Wiliwili ka vola rawa talega na nona wiliwili
Ulutaga	Na Wiliwili

Vakacavara na veiyatuvosa e ra:

1	E dua na noqu _____	
2	E lima na mequ _____ .	
3	E rua na kequ _____ .	
4	E tolu na noqu _____ .	
5	E va na mequ _____	