



MADHUVANI SANGAM PRIMARY SCHOOL

WEEKLY HOME STUDY PACKAGE 11 COVID- 19 (EXTENDED SCHOOL BREAK)

SUBJECT	ENGLISH	YEAR	3
NAME		ADDRESS	

Strand	Reading and viewing
Sub – Strand	Text Types – (Media, everyday communication, literary text)
Content Learning	Evaluate meaning and purpose of media, everyday communication and literary text.

Topic: Dictionary

It is a book or electronic resource that gives information on particular subjects or on a particular class of words, names, or facts that is usually arranged alphabetical order.

The dictionary provides us with the following;

- The meanings of words.
- Adjective, adverb, verb and noun forms of words.
- The short form of words too which is also known as abbreviations. How to

use a dictionary?

When you are looking for the words in a dictionary, you should start from A – Z (alphabetically) and make sure to follow the sequence up till you find the word you are looking for.


An example of a dictionary extract

bent **0** **ɹ** /bent/ *adj.*, *noun* ➔ see also BEND

■ **adj.** **1** **0** not straight: *a piece of bent wire* ◊ *Do this exercise with your knees bent* (= not with your legs straight).
 ➔ picture at CURVED **2** **0** (of a person) not able to stand up straight, usually as a result of being old or ill/sick: *a small bent old woman* ◊ *He was bent double with laughter.*
3 (BrE, informal) (of a person in authority) dishonest

IDM 'bent on sth/on doing sth determined to do sth (usually sth bad): *She seems bent on making life difficult for me.*
 ➔ see also HELL-BENT **get bent out of 'shape (about/over sth)** (NAmE, informal) to become angry, anxious or upset: *Don't get bent out of shape about it. It was just a mistake!*

■ **noun** [usually sing.] ~ (for sth) a natural skill or interest in sth: *She has a bent for mathematics.*



ACTIVITY WEEK 18

1. What is dictionary?

2. Write down two things that a dictionary provides us with.

a. _____

b. _____

3. Use a dictionary to search for the meaning of the following words.

a. Bold - _____

b. Fuel - _____

ACTIVITY WEEK 19

Look at the dictionary below and answer the questions:



1) Something that is not polite to do _____.

2) What drink is made from hops? _____.

3) Where do beekeepers keep their bees? _____.

4) Something that keeps your trousers up _____.

5) A colour _____.

6) Another name for your stomach _____.

7) A purple vegetable _____.

8) Another word for shouting _____.



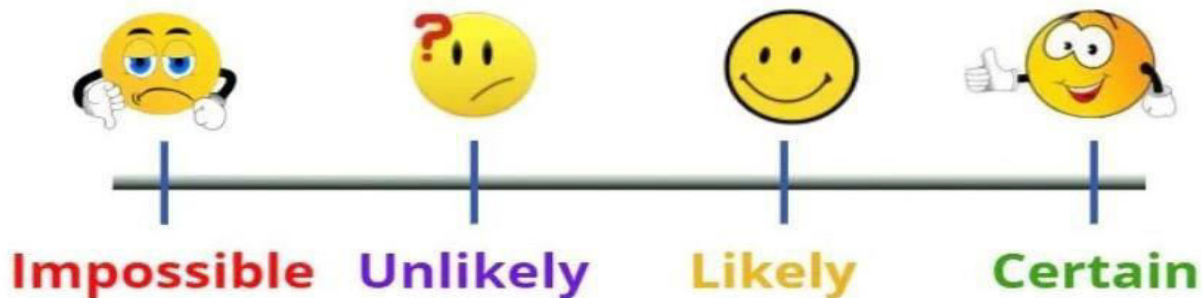
MADHUVANI SANGAM PRIMARY SCHOOL

WEEKLY HOME STUDY PACKAGE 11 COVID- 19 (EXTENDED SCHOOL BREAK)

SUBJECT	MATHEMATICS	YEAR	3
NAME		ADDRESS	

Strand 5	Chance and Data
Sub - strand	Chance
Content Learning Outcome	Predict and describe the elements of chance in everyday experience

CHANCE



Probability - is the chance that something will happen. It tells us how likely an event will occur.

Impossible - means there is no chance that an event will happen. It will never happen.







Unlikely - means there's a small chance that an event will happen.

Likely - means there's a big chance that an event will happen.

Certain - means there's a 100% chance that an event will happen. It is sure to happen.

ACTIVITY WEEK 18

The dice was rolled 20 times. The results were recorded as follows:

Dice Faces	Result	Dice Faces	Result
	5		3
	2		2
	4		4

Study the results given above and use the following words to answer the questions.

Unlikely	Impossible	Certain	Likely
-----------------	-------------------	----------------	---------------


- How would you describe the chance of rolling 5? _____
- How would you describe the chance of rolling 1? _____
- How would you describe the chance of rolling 3? _____
- How would you describe the chance of rolling 8? _____
- Which face of the dice comes up the most? _____
- Which faces of the dice comes up least? _____

ACTIVITY WEEK 19

Cookie Jar

I have 9 cookies in my cookie jar. There are 6 chocolate chip cookies and 3 peanut butter cookies.

Circle the best answer to each question.



- What is the probability of picking a peanut butter cookie?
likely unlikely certain impossible
- What is the probability of picking an oatmeal cookie?
likely unlikely certain impossible
- What is the probability of picking a chocolate chip cookie?
likely unlikely certain impossible
- What cookie are you least likely to pick?
chocolate chip peanut butter
- What jellybean are you most likely to pick?
chocolate chip peanut butter



MADHUVANI SANGAM PRIMARY SCHOOL

WEEKLY HOME STUDY PACKAGE 11 COVID- 19 (EXTENDED SCHOOL BREAK)

SUBJECT	HEALTHY LIVING	YEAR	3
NAME		ADDRESS	

REVISION – WEEK 18

PERSONAL HYGIENE

Write true and false for the following statements.

- 1) You should change your underclothes every day. True False
- 2) Skin temperature is the same all over. True False
- 3) All germs are harmful True False
- 4) You can not be contaminated by your own germs. True False
- 5) To avoid catching a cold you should wash and dry your hands regularly. True False
- 6) Linen handkerchiefs are more hygienic than paper handkerchiefs..... True False
- 7) You should brush your teeth for three minutes after every meal..... True False
- 8) A wound is safe under a bandage. True False
- 9) You should put your hand in front of your mouth when you cough or sneeze. True False
- 10) Hands have the most germs. True False

REVISION – WEEK 19

Answer these questions in the spaces provided.

1. Give examples of junk foods?

2. Name some diseases caused by drinking contaminated water?

3. How can you destroy mosquitoes breeding places?



MADHUVANI SANGAM PRIMARY SCHOOL

WEEKLY HOME STUDY PACKAGE 11 COVID- 19 (EXTENDED SCHOOL BREAK)

SUBJECT

HINDI

YEAR

3

NAME

ADDRESS

Strand

Listening and speaking

Sub strand

Socio cultural context and situations

Content learning outcome

At the end of the lesson, the students should be able to:
Read, understand the reading and know some vocabularies.



कमल

क



कलम



कबूतर

क का कि की कु कू के कै को कौ कं कः

पढो

केला

काला

काम

कलश

किताब

Sentence

केला एक फल है।

रानी के बालों का रंग काला है।

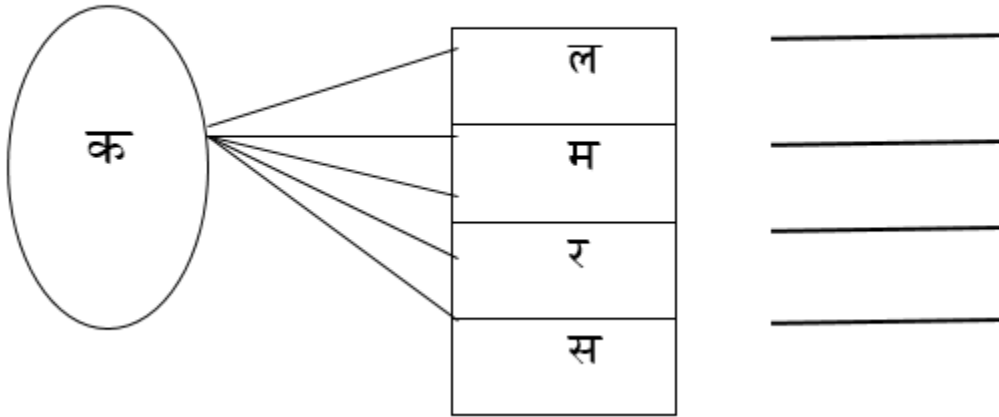
रमेश खेत में काम कर रहा है।

यह कलश है।

यह किताब है।

WEEK 18

- इन अक्षरों को जोड़ कर शब्द बनाओ और पढ़ो :



WEEK 19

दिए गए वाक्यों को पूरा करो- (Sentence Building)



1. यह _____ है ।



2. यह _____ है ।



3. यह _____ है ।



4. यह _____ है ।



5. यह _____ है ।



MADHUVANI SANGAM PRIMARY SCHOOL

WEEKLY HOME STUDY PACKAGE 11 COVID- 19 (EXTENDED SCHOOL BREAK)

SUBJECT	VOSA VAKA VITI	YEAR	3
NAME		ADDRESS	

Strand	Wilivola kei na Vakadidigo
Sub – Strand	Na bula Veimaliwai vakatamata, kei na vanua e vakaraitaki kina
Content Learning Outcome	Vakaraitaka ni vosa e volai e umani kina na ka e qaravi, na kena inaki kei ira e ra tiko kina ka vaqacotaka tale ga na bula ni veiwekani

Wase: 16

Na Vakalolo



Na I Vosavosa Vaka – Viti

1. Vaka na kana darai – totolo ka sega ni tao.
2. Sa niu ga kei na madrai – E tukuni ni rua e rau vakasa kaukauwa ka sega ni laurai me dua e Malumalumu.
3. Tiko mai vale qai kau yani – E kau mai na I vosavosa oqo mai na dua na I talanoa makawa me baleta e dua na tamata ka a via la'ki cakava e dua na vakalolo mai Lakeba, Lau. Na yaca ni vakalolo na vuki tavu. Ni sa lau kana e qai droka na mavu ka ra mila na kania. Ra tarogi koya ka qai kaya, ne; “Au tiko mai vale qai kau yani”

CAKACAKA LAVAKI

Sauma mai na taro ka koto oqori e ra.

1. A cava soti e dau mavu?

2. Na gauna cava e dau caka kina na vakalolo?

3. A cava na yaca ni vakalolo ka dau yaca na kena mavu?



MADHUVANI SANGAM PRIMARY SCHOOL

WEEKLY HOME STUDY PACKAGE 11 COVID- 19 (EXTENDED SCHOOL BREAK)

SUBJECT	SOCIAL STUDIES	YEAR	3
NAME		ADDRESS	

Strand 4	Resources and Economic Activities
Sub - strand	Use and Management of Resources
Content Learning	Gather information on how members of the family earn their daily living and demonstrate the importance of giving help and support.

Budget

A. Life of a fisherman

Pita is a fisherman. He always spends 4 weeks out in the sea fishing with a group of fishermen. When he gets his pay, he goes home and spends one week with his family. He gets \$300.00 for a month.

Monthly Budget Plan for Pita's Family

Income

Pita \$300.00

Expenditure

Food \$ 200

EFL \$ 30

Bus Fare \$ 40

Other Bills \$ 20

Total Expenditure \$290.00

Savings **\$10.00**

Pita's Family Rules

1. Lights off at 9.00pm.
2. Everyone will travel by bus when going to school or any other place.
3. All cooking to be done in open fire.
4. All family members will eat whatever is prepared and placed on the table at meal times.

B. Life of a mechanic

Ramu is a mechanic in a small bus company. He earns \$250.00 for a month.

Monthly Budget Plan for Ramu's Family

Income

Ramu \$250.00

Expenditure

Food \$100

EFL \$30

Gas \$10

Bus/Taxi Fare \$40

Other Bills \$20

Total Expenditure \$200.00

Savings **\$50.00**

Ramu's family does not have any rules to follow but they make sure that they save \$50 from their family budget every month.

Study both the budget plans and answer the questions below.

ACTIVITY WEEK 18

Circle the letter of the correct answer.

1. Which family will save more money at the end of the year?

A. Ramu's Family B. Pita's Family

2. What is Pita's monthly wages?

A. \$250.00 B. \$300.00

3. Which family spends more money on food?

A. Ramu's Family B. Pita's Family

4. How much will Ramu's family save in a

year? A. \$600.00 B. \$120.00

5. List 2 things your family can do to help save some money.

a). _____

b). _____

ACTIVITY WEEK 19

Write down your family budget.



MADHUVANI SANGAM PRIMARY SCHOOL

WEEKLY HOME STUDY PACKAGE 11 COVID- 19 (EXTENDED SCHOOL BREAK)

SUBJECT	ELEMENTARY SCIENCE	YEAR	3
NAME		ADDRESS	

REVISION

Week 18 - MULTIPLE CHOICE

Circle the letter of the correct answer.

1. The two hydro dams in Fiji are _____.

- A. Monasavu and Nadarivatu
B. Monasavu and Sigatoka
C. Nadarivatu and Tailevu
D. Suva and Nausori

2. _____ are made from the remains of dead animals and plants, found in underground layers of rock.

- A. Coal, oil and natural gas
B. Coal, oil and sunlight
C. Wind, fossil fuel and natural gas
D. Wood, wave and water

3. An example of a non-renewable energy source is _____.

- A. oil
B. Wave energy
C. Solar
D. wind energy

WEEK 19 - TRUE OR FALSE

Write either True or False for the following statements.

1. Hydro generated electricity is renewable energy. _____
2. Oil is changed to petroleum for vehicles and machines _____
3. Natural gas is used for cooking in many homes _____
4. Renewable energy can be replaced in our life time. _____