

SHEET 1

PENANG SANGAM HIGH SCHOOL

P. O. BOX 44, RAKIRAKI

LESSON NOTES - 21

SCHOOL: PENANG SANGAM HIGH

SUBJECT: TECHNICAL DRAWING

YEAR/ LEVEL: 11 C/D

Strand	TD11.3 APPLIED DRAWING
Sub - Strand	TD11.3.3 PICTORIAL PROJECTION
Content Learning Outcome	TD11.3.3.1 Demonstrate knowledge and skills in oblique projections and 1 point perspective of simple woodwork projects and engineering drawings.


PERSPECTIVE DRAWING

Continued from worksheet 20

QUESTION 1

Given: The plan and elevation of a shaped block resting with an elevation on the ground plane and with a plan touching the picture plane.

Required: Draw a one point perspective of the shaped block.



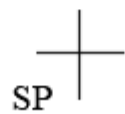
PP

ELL



ELEVATION


GL



QUESTION 2

Given: The plan and elevation of a shaped block resting with an elevation on the ground plane and with a plan touching the picture plane.

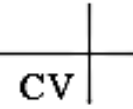
Required: Draw a one point perspective of the shaped block.



PLAN

PP

ELL



ELEVATION

GL

