

2036 Penang Sangam Primary School
Year 3
English
Worksheet 20 - Solution

STRAND	Reading and Viewing
SUB-STARND	English features and rules
CONTENT LEARNING OUTCOME	Read and view with understanding a variety of texts and visuals to identify and interpret useful information.

Questions

A. Multiple Choice

1. Judo players are strong and
 a. fast b. weak c. great d. tough
2. A judo contest is called a
a. fight b. game c. sport d. match
3. Judo players wear strong clothes and a
a. top b. shoes c. belt d, costume
4. The next belt after yellow is
a. blue b. black c. green d. orange
5. A judo match is held
a. outside b. on soft mats c. on soft grass
6. To get a black belt and red belt in judo takes
 a. a lot of luck b. a lot of work c. very little work

B. Vocabulary

The words in the box come from the story.

Unjumble the words from the story.

five belt teaches judo white

1. douj - **judo**
2. vefi - **five**
3. heiwt - **white**
4. lteb - **belt**
5. stcheea - **teaches**

C. Fill in the Blank

1. She goes for judo sport every Sunday.
2. She wears strong white clothes.
3. She has a yellow belt now.
4. Soon she will have an orange belt.
5. She works hard at judo.

goes	go
soft	strong
bit	belt
orange	wide
had	hard

D. Identify 5 nouns from the reading. (Answers may vary)

Judo, mat, clothes, belt, red

E. Name 5 colours mentioned in the reading. (Answers may vary)

yellow, orange, green, blue, black







2036 Penang Sangam Primary School
Year 3
Mathematics
Worksheet 20 - Solution

STRAND	Geometry
SUB-STARND	Shapes/ Angels and direction
CONTENT LEARNING OUTCOME	- Children to be able to identify and name correctly the number of sides of every 2D shape. - Children should know the properties of lines, rays, line segments, parallel lines, curves and angles

Questions

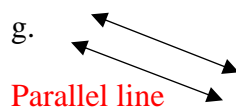

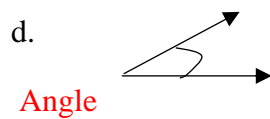
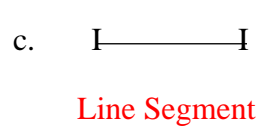
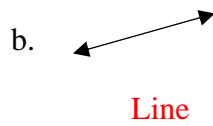

Shapes

Count then record the number of sides and angles on each shape. Write the name of the shapes.

Shape	Number of sides	Number of angles
 <u>Hexagon</u>	6	6
 <u>Square</u>	4	4
 <u>Pentagon</u>	5	5
 <u>Triangle</u>	3	3
 <u>Octagon</u>	8	8
 <u>Parallelogram</u>	4	4

Questions

Write the name of each figure



2036 PENANG SANGAM PRIMARY SCHOOL
YEAR 3
HEALTHY LIVING
WORKSHEET 20 SOLUTION

Strand	Personal and Community Health
Sub Strand	Disease Prevention
Content Learning Outcome	Differentiate ways of preventing airborne, mosquitoes and waterborne diseases.

Solution

Activity

1. Name any two air – borne diseases you are aware of. (Answers may vary)

Measles

Corona virus

2. What can you do to avoid the spread of air- borne disease? (Answers may vary)

Have good ventilation.

Wash hands after handling things.

3. Do you think masks and sanitizers can protect you from air – borne diseases?

Yes

2036 PENANG SANGAM PRIMARY SCHOOL
YEAR 3
HINDI
WORKSHEET 20 SOLUTION

Strand	लिखना एवं निर्माण करना
Sub Strand	तत्त्व का परिणाम विभिन्न परिस्थितियों व संदर्भों में विचारों व अनुभवों को व्यक्त करने हेतु सुपाठ्य व तार्किक दृश्यों, वाक्यों व अनुच्छेदों का निर्माण करना
Content Learning Outcome	स्पष्ट लिखावट में सरल लिखित पाठ्य की योजना, प्रारूप,संपादन व प्रकाशन हेतु विभिन्न सरल युक्तियों का प्रयोग करना

Solutions

विलोम शब्द(OPPOSITES)

सही जवाब चुन कर इन के विलोम शब्द लिखिये ।

गरीब - धनी

नीचे - ऊपर

दूर - पास

दुख - सुख

पुराना - नया


शब्द निर्माण

दिए गए अक्षरों से शब्द बनाकर उसका चित्र बनाएं और उसमें रंग भरें ।

जैसे : ल - लड़का



म -




स -



ब -



क -



दिए गए अक्षरों को जोड़कर शब्द बनाओ ।

1. र + स = रस
2. के + ला = केला
3. सु + ब + ह = सुबह
4. त + र + बू + ज़ = तरबूज़
5. पी + ला = पीला

2036 PENANG SANGAM PRIMARY SCHOOL
YEAR 3
SOCIAL STUDIES
WORKSHEET 20 SOLUTION

Strand	Resources and Economic Activities
Sub Strand	Use and Management of Resources
Content Learning Outcome	Recognize the importance of earning a living.

Solution

Activity

1. Mosese gets his pay at the end of every _____.

- A. week B. fortnight C. month

2. List down some things your family can do to help save money. (Answers may vary)

Use resources wisely.

Save electricity bills.

Save water bills.

3. Which expense is more in Mosese's family?

Food

4. How much are they able to save at the end of the week?

\$30

5. Calculate the amount of savings for one month if they are able to save \$30 a week. **Note:** there are 4 weeks in one month.

$$\$30 \times 4 = \underline{\underline{\$120}}$$

2036 Penang Sangam Primary School

Year 3

Vosa Vakaviti

Worksheet 20 – Solution

1. Ko ira na kawa i Rokola na matai levu, era sega ni dau vakatavulici ena nodra cakacaka.
2. Turaga yalo vinaka ko Rokola, ia e Turaga yalo lekaleka ka dau vosa ga vakadua. sa rauta me vaka oqo na nona itovo ka ni sega ni cakacaka rawarawa na nona cakacaka.

2036 Penang Sangam Primary School
Year 3
Elementary Science
Worksheet 20 - Solution

STRAND	Earth and Beyond
SUB-STARND	Our Changing Earth
CONTENT LEARNING OUTCOME	-Children should be able to understand how the earth is changing. - Children should know about the different types of clouds.

1. The earth is changing continuously.
2. This is due to the increase in population.
3. Due to global warming there is a rise in sea level.
4. The wet weather in Fiji is from November to April.
5. The dry weather is from May to October.

Draw the different types of clouds.

