

NADI SANGAM SCHOOL

WEEKLY HOME STUDY PACKAGE

#25

YEAR 2



2022

1076 NADI SANGAM SCHOOL
Weekly Home Study Package # 25 2022

English **Year: 202**

PLURALS

A. Write the plurals of the words below:

- | | |
|------------------|-------------------|
| 1. house - _____ | 2. beach - _____ |
| 3. leaf - _____ | 4. mango - _____ |
| 5. glass - _____ | 6. church - _____ |
| 7. fox - _____ | 8. banana - _____ |
| 9. plate - _____ | 10. dress - _____ |

B. Change the sentences to the plural forms:

Example: This flower is red.

These flowers are red.

1. This ball is big.

_____.

2. This is a bus.

_____.

3. The box is very heavy.

_____.

4. I like eating peach.

_____.

5. Apple is sweet.

_____.

1076 NADI SANGAM SCHOOL

Weekly Home Study Package # 25

Year: 2 **Mathematics**

Strand	Chance and Data
Sub Strand	Data Representation and Interpretation
Content Learning Outcome	<ul style="list-style-type: none">• To be able to interpret simple data from a table.





LESSON NOTES

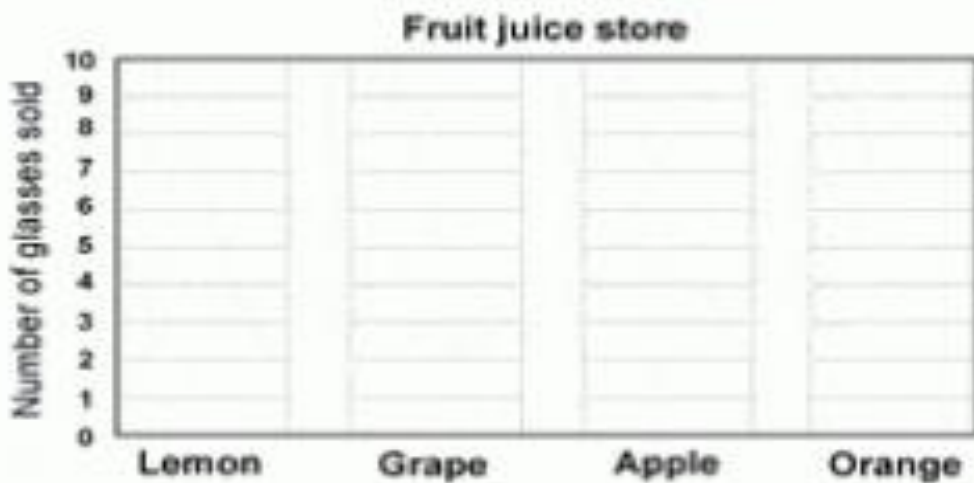
- A graph shows information as a picture or an image.
- This information is called data.
- Graphs display data in a way that is easy to understand and remember.

WORKSHEET

A. A fruit juice store recorded the number of glasses sold.

Colour the number of glasses sold for each type of fruit juice and answer the questions.

Fruit juice	Lemon	Grape	Apple	Orange
Number of glasses sold	 7	 10	 9	 8



Questions

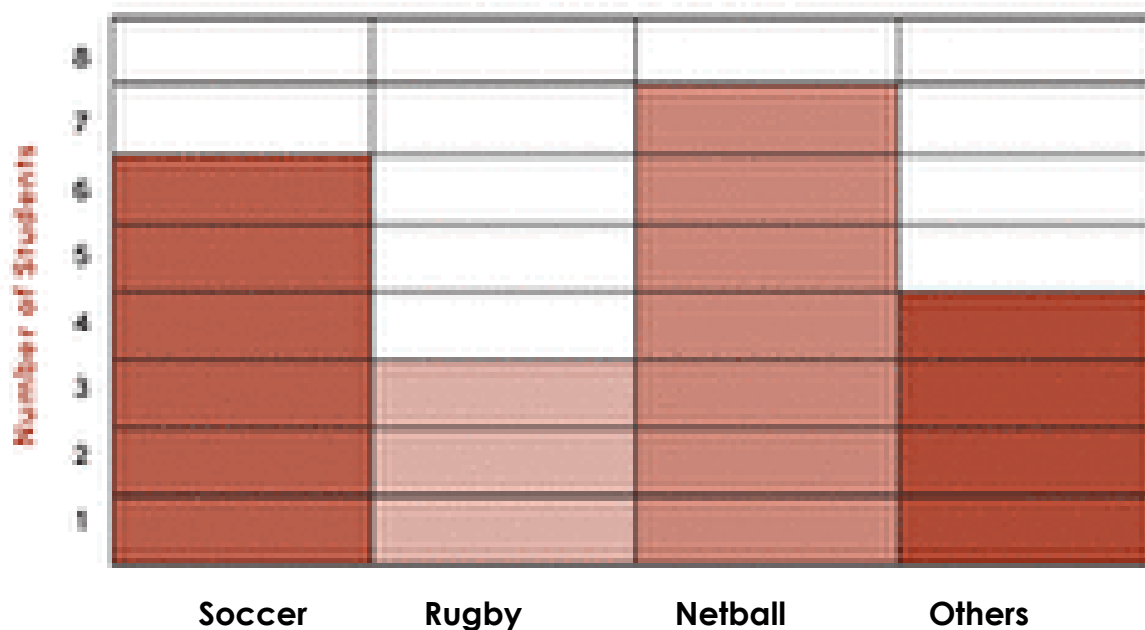
1. Which juice was sold the most? _____
2. Which juice was sold the least? _____
3. How many glasses of apple juice were sold? _____
4. How many more glasses of grapes juice were sold than lemon juice?

5. How many glasses of orange and apple juice together were sold?

6. How many glasses were sold in all? _____

B. The graph below shows the favourite sports for a class.

Favourite Games



Questions

1. How many children like rugby? _____
2. How many children like netball? _____
3. How many children like soccer? _____
4. Which sport is most liked by the children? _____
5. Which sport is least liked in the class? _____
6. How many children are there in the class? _____

A. Matching

Match animal to what it eats by writing the letter of the correct answer in the box provided.

1	horse		A	dalo leaf
2	caterpillar		B	pawpaw
3	chicken		C	housefly
4	spider		D	mouse
5	cat		E	worms
6	dog		F	grass
7	heron		G	bones
8	mynah		H	fish

B. Write down the movement of the following animals.

- | | |
|--------------------|-------------------|
| 1. bat- _____ | 5. fish - _____ |
| 2. horse - _____ | 6. bird - _____ |
| 3. dolphin - _____ | 7. cow - _____ |
| 4. frog - _____ | 8. spider - _____ |

1076 NADI SANGAM SCHOOL

YEAR 2

HINDI

WEEKLY HOME STUDY PACKAGE #25

अ] शब्द पहेली - नीचे दिए गए शब्दों को ढूंढ कर गोल कीजिए ।

तारा बस फल आम जाल प्यारा पजामा राजा
थल थक कल राख माल धन आता नखरा

न	ता	रा	फ	प्या	क
आ	ख	फ	ल	रा	ध
म	ध	रा	जा	क	न
थ	क	ख	ल	फ	आ
ब	स	न	दा	ख	लू
फ	ख	थ	ल	ध	छ
प	जा	मा	क	न	फ

आ] सही जगह पर मात्रा लगाओ ।

1. आ [ा] का ख ग घ च र म प

2. इ [ि] छि ज झ ट ठ स न ब

3. ई [ी] डी त थ द ध ल क प