

NADI SANGAM SCHOOL

WEEKLY HOME

STUDY PACKAGE

# 23

YEAR 3



**NADI SANGAM SCHOOL**  
**WEEKLY HOME STUDY PACKAGE # 23**  
**SUBJECT: MATHEMATICS**  
**YEAR 3**

A. Complete the following pattern

<p>1. The next number in the pattern.</p> <div style="text-align: center; border: 1px solid gray; padding: 5px; display: inline-block;">             2, 4, 6, 8, <span style="border: 1px solid gray; padding: 2px 10px;">  </span> </div> <p> <input type="radio"/> 8                      <input type="radio"/> 10  <input type="radio"/> 9                         <input type="radio"/> 11         </p>	<p>2. Which number is missing from the pattern?</p> <div style="text-align: center; border: 1px solid gray; padding: 5px; display: inline-block;">             10, 12, <span style="border: 1px solid gray; padding: 2px 10px;">  </span>, 16, 18         </div>
<p>3. The next number in the pattern?</p> <div style="text-align: center;"> <span style="border: 1px solid black; border-radius: 50%; padding: 5px 15px;">10</span>               <span style="border: 1px solid black; border-radius: 50%; padding: 5px 15px;">20</span>               <span style="border: 1px solid black; border-radius: 50%; padding: 5px 15px;">30</span>               <span style="border: 1px solid black; border-radius: 50%; padding: 5px 15px;">  </span> </div> <div style="text-align: center; margin-top: 20px;"> <span style="border: 1px solid black; border-radius: 50%; padding: 5px 15px;">30</span>               <span style="border: 1px solid black; border-radius: 50%; padding: 5px 15px;">40</span>               <span style="border: 1px solid black; border-radius: 50%; padding: 5px 15px;">50</span> </div> <p> <input type="radio"/>                      <input type="radio"/>                      <input type="radio"/> </p>	<p>4. The next shape in the pattern.</p> <div style="text-align: center; border: 1px solid black; padding: 5px; display: inline-block;"> </div> <div style="text-align: center; margin-top: 10px;"> <input type="radio"/>                       <input type="radio"/>   <input type="radio"/>                       <input type="radio"/> </div>

B. Work out the following

$$\begin{array}{r} 924 \\ - 327 \\ \hline \end{array}$$

$$\begin{array}{r} 824 \\ + 166 \\ \hline \end{array}$$

$$\begin{array}{r} 120 \\ \times \quad 4 \\ \hline \end{array}$$

$$\begin{array}{r} 830 \\ + 148 \\ \hline \end{array}$$

$8 \div 4 = \underline{\quad}$

$5 \times 3 = \underline{\quad}$

$20 \div 5 = \underline{\quad}$

$10 \times 4 = \underline{\quad}$

$$\begin{array}{r} 321 \\ \times \quad 3 \\ \hline \end{array}$$

$$\begin{array}{r} 421 \\ + 199 \\ \hline \end{array}$$

$$\begin{array}{r} 840 \\ - 368 \\ \hline \end{array}$$

$$\begin{array}{r} 521 \\ - 258 \\ \hline \end{array}$$

$$\begin{array}{r} 301 \\ \times \quad 4 \\ \hline \end{array}$$

$11 \times 4 = \underline{\quad}$

$16 \div 4 = \underline{\quad}$

$30 \div 3 = \underline{\quad}$

$9 \times 2 = \underline{\quad}$

1076 NADI SANGAM SCHOOL

WEEKLY HOME STUDY PACKAGE #23

REVISION QUESTION

SUBJECT : English

YEAR/ LEVEL : 3

**COMPREHENSION**

**Read the passage given below and then answer the questions that follow Choose the best answer.**

**WHY WASTE WATER?**

Mr. I.C.Water,  
President of the Parent Teachers Association  
Riverside Boys School,  
Nausori.

Dear Mr. Water,

My class mates and I have an idea that we think would help our school save water. At home we have just a rainwater tank installed. It is fantastic. The tank has saved us heaps of water and money because we don't have to use as much tap water. We believe our school can save a lot of water and money if it installs rainwater tanks also. These tanks save money because they collect stormwater runoff from the roof. Because we have lots of buildings at school the tanks will fill very quickly, even if it only rains for a short time. This water can be used instead of tap water, which the school pays for from school funds. The tank water is ideal for flushing the toilets and watering the lawn and gardens. Another reason that tanks are worthwhile is that they are very environmentally friendly. Stormwater held in tanks reduces runoff. This water is wasted when it runs straight into stormwater drains and then into our waterways. The extra water from the tanks will allow us to water the gardens more often. This will also make our school look greener. Everyone should be trying to make the grounds look better. Finally, we believe a water tank program is educationally sound. When students are involved with projects like this they learn more about saving the environment. I hope that you and the Parent Teachers Association group support our suggestion so we can work together to make our school a better place.

Yours faithfully,

George Varea,

Year 3.

## **A. Questions**

1. Where had the children seen tanks before?
  - a. at school
  - b. at home
  - c. at the shop
  
2. Rainwater tanks get water from
  - a. the roof
  - b. the grass
  - c. the ground
  
3. Why could the school fill tanks easily?
  - a. It has plenty of water.
  - b. There are lots of children.
  - c. It has lots of buildings.
  
4. Without tanks, runoff will often end up in
  - a. homes
  - b. drains
  - c. toilets
  
5. Why would tanks help make the school look better?
  - a. The tanks are attractive.
  - b. The toilets look better.
  - c. The gardens and grass would be greener.

1076 NADI SANGAM SCHOOL

WEEKLY HOME STUDY PACKAGE #23

SUBJECT: SOCIAL STUDIES

YEAR/ LEVEL: 3

REVISION

Fillers

Artefacts	family	family tree	language	Different
Eid	people	females	speak	live
home	relationships	food	temple	celebrates

1. A \_\_\_\_\_ is a group of \_\_\_\_\_ living together in a \_\_\_\_\_.
2. The people that I \_\_\_\_\_ with are my family members.
3. A \_\_\_\_\_ is a diagram that shows \_\_\_\_\_ in a family
4. Circle denotes \_\_\_\_\_.
5. Mothers' role in a family is to prepare \_\_\_\_\_.
6. The \_\_\_\_\_ that I \_\_\_\_\_ and the special events that I \_\_\_\_\_ are part of my \_\_\_\_\_.
7. \_\_\_\_\_ groups of people have their own culture.
8. Hindus pray in a \_\_\_\_\_.
9. Sawaai is a special dish that Muslims eat during \_\_\_\_\_.
10. Totems and \_\_\_\_\_ are things that make our culture special.

True and False

1. Pooja thali is an example of a Fijian artefact. \_\_\_\_\_
2. Everyone in the family must respect each other and follow the home rules. \_\_\_\_\_
3. A school is a place for playing only. \_\_\_\_\_
4. Every school is guided by its own school rules. \_\_\_\_\_
5. Come to school on school days. \_\_\_\_\_

Short answers

1. Give two rules of your school.

---

---

2. Write down three things that you can do to keep your school clean at all times.


---

---

3. What should you do to the broken tins and bottles?

---

4. Draw and colour two personal belongings.



5. From the word bank write down the correct job beside each picture.

Doctor	teacher	postman	Farmer
fireman	nurse	policewoman	dentist



**1076 NADI SANGAM SCHOOL**

**WEEKLY HOME STUDY PACKAGE #23**

**SUBJECT: HEALTHY LIVING**

**YEAR/ LEVEL: 3**

**REVISION**

**FILLERS**

Honest	turn	milk	sharp	shower	eyes
Ears	comb	handkerchief	healthy	nose	

1. Babies need \_\_\_\_\_ to grow.
2. We use our \_\_\_\_\_ to smell.
3. Do not use \_\_\_\_\_ objects when cleaning your \_\_\_\_\_.
4. Dry your skin after taking a \_\_\_\_\_.
5. Use clean water to wash your \_\_\_\_\_.
6. Use a \_\_\_\_\_ to comb your hair.
7. Always use a \_\_\_\_\_ to clean your nose.
8. We need to have a good and \_\_\_\_\_ relationship with everyone.
9. Always wait for your \_\_\_\_\_.
10. Telling the truth is being \_\_\_\_\_.


**TRUE OR FALSE**

1. I must say **thank you** if I am given something. \_\_\_\_\_
2. Do not say **please** if you want something. \_\_\_\_\_
3. It is polite to listen when someone is talking. \_\_\_\_\_
4. Be respectful to all. \_\_\_\_\_
5. Listen quietly while others are speaking. \_\_\_\_\_
6. Talk to strangers. \_\_\_\_\_
7. Be alert to dangers. \_\_\_\_\_
8. A balanced meal contains food from a particular type of food group only. \_\_\_\_\_
9. Physical activities help prevent heart disease. \_\_\_\_\_
10. Junk foods are good for our teeth. \_\_\_\_\_



SHORT ANSWERS

1. Draw food that is good for your teeth.



2. State three symptoms of food poisoning.

---

---

3. How is food poisoning caused?

---

---

1076 NADI SANGAM SCHOOL  
WEEKLY HOME STUDY PACKAGE #23

SUBJECT: HINDI


YEAR/ LEVEL:3

STRAND	Reading and Viewing
CONTENT LEARNING OUTCOME	Recognize that written materials are representatives of real and imaginary experiences
TOPIC	Comprehension (पाठ-बोधन)

दिए गए गद्यांश को पढ़कर प्रश्नों के उत्तर लिखिए-

एक बंदर बहुत शरारती था | वह लोगों के घरों में जाकर बहुत उधम मचाता था | किसी के बर्तन उठाकर ले जाता था , तो किसी का मुँह नोच लेता था | लोग उस बंदर की शरारतों से बहुत परेशान थे | एक दिन उसने पानी से भरा एक बर्तन देखा | वह नहीं जानता था कि उसमें गरम पानी था | जैसे ही उसने बर्तन उठाया , गरम पानी उसपर गिर गया | वह दर्द से चिल्लाता हुआ वहाँ से भाग गया |

(क) बंदर कैसा था ?



ख) बंदर लोगों को कैसे तंग करता था ?

ग) बर्तन उठाते ही क्या हुआ ?

घ) कोई 4 नाम वाले शब्द ढूँढ़कर लिखिए-

च) दिए गए शब्दों के विपरीत शब्द ढूँढ़कर लिखिए- रात-

ठंडा -

REVISION QUESTIONS

SUBJECT : Elementary Science

YEAR/ LEVEL : 3

**Multiple Choice**

Underline the best answer of your choice.


1. The path the current takes is called an \_\_\_\_\_.  
A. Current                                      B. electrical circuit
2. Batteries are source of \_\_\_\_\_.  
A. electricity                                      B. bulb
3. Materials that do not allow electricity to flow through are called \_\_\_\_\_.  
A. Conductors                                      B. insulators
4. An example of sound energy is \_\_\_\_\_.  
A. Lighting bulb                                      B. a baby crying
5. The sun provides energy in the form of \_\_\_\_\_.  
A. Wind power                                      B. Solar power

**Label the pictures as different forms of energy.**

Light Energy , Sound Energy , Heat Energy

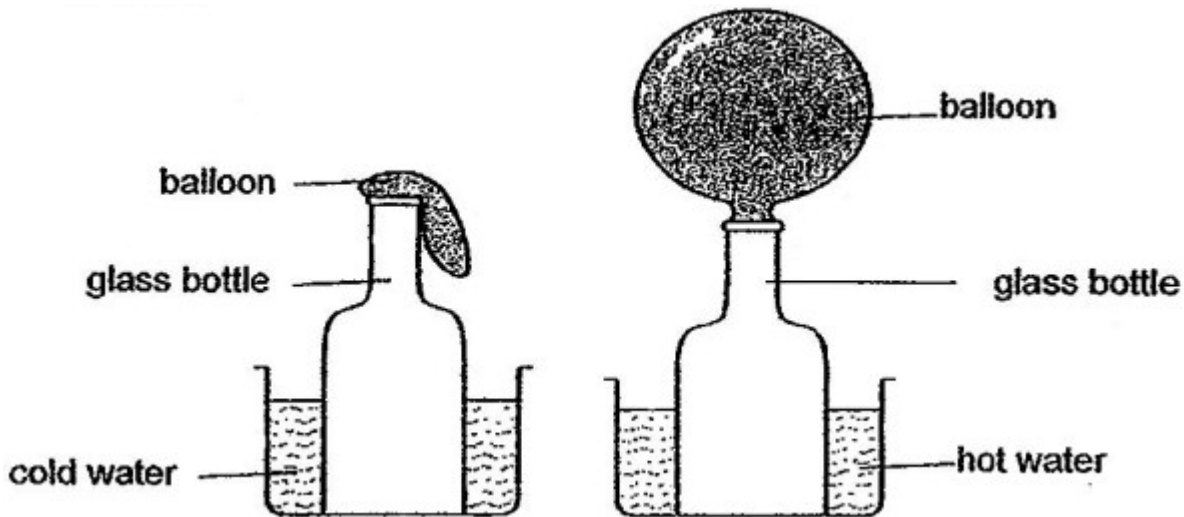


1. \_\_\_\_\_                                      2. \_\_\_\_\_                                      3. \_\_\_\_\_



4. \_\_\_\_\_                                      5. \_\_\_\_\_

Study the experiment and answer the questions below.



1. What is in the bottle ?

---

2. Air is a \_\_\_\_\_.

3. When water gets hot, the air inside the bottle \_\_\_\_\_.

4. As the air expands the balloon \_\_\_\_\_.

5. Molecules in a heated gas \_\_\_\_\_.

gas air expands gets bigger  
moves apart