

Revision Exercise

A.) VOCABULARY

Write the correct spelling of the following words.

- | | |
|-------------------|----------------|
| 1. umbrella _____ | 2. leef _____ |
| 3. amblance _____ | 4. lawer _____ |
| 5. carm _____ | |

B.) SIMILAR WORDS

Match List A with List B by writing the letter of the correct answer in the blank space.

- | A. | B. |
|----------------|----------|
| 1. jump _____ | a.) flat |
| 2. boat _____ | b.) near |
| 3. even _____ | c.) leap |
| 4. swift _____ | d.) slow |
| 5. close _____ | e.) ship |
| | f.) fast |

C.) CLOZE EXERCISE

Complete this story by filling in the correct words.

One day, a wolf _____ to play a trick on the flock of _____. The _____ who owned the sheep did not know that _____ of his flock was a wolf. The wolf was _____ excited that he had fooled the farmer.


D.) VERBS

Write the correct form of the verbs in the blanks.

- Playing _____ some people to relax. (help)
- Kindness _____ nothing. (cost)
- Dust _____ our house look dirty. (make)
- Cruelty _____ pain and suffering. (cause)
- If tar _____ into our lungs, we might suffer from lung cancer. (enter)

Revision

SECTION A

		WORKING	ANSWER
<i>Write <, > or =</i>			
(5 marks)			
1	Four Hundred _____ 40		
2	 _____ 20		
3	100 + 32 _____ 10+32		
4	4 x 3 _____ 6 + 4		
5	35 ÷ 7 _____ 35 ÷ 5		

SECTION B

(5 marks)

Write True or False

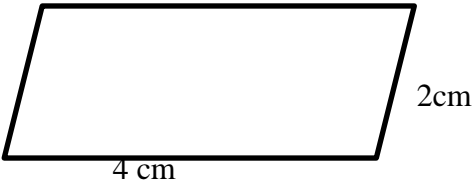
6	January has 30 days.		
7	\$1.00 = 100 cents		
8	$\frac{3}{4} + \frac{1}{4} = \frac{4}{8}$		
9	Teachers use 1 meter ruler.		
10	The length of my classroom is 7 cm.		




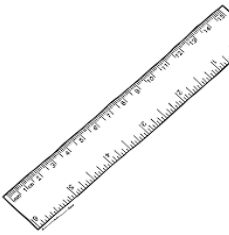

SECTION C

Multiple Choice

(5 marks)

Circle the correct answer

11	2.3 x 2 = _____ A 4.3 B 2.6 C 4.6		
12	 <p>The perimeter of this shape is _____</p> <p>A 6 cm B 12 cm C 8cm</p>		

13	 <p>The length of the nail is _____.</p> <p>A 4 cm B 3 cm C 1 cm</p>		
14	<p>$\\$2.63 - \\$1.72 = \underline{\hspace{2cm}}$</p> <p>A \$1.91 B \$9.10 C \$0.91</p>		
15	<p>$\begin{array}{r} 250 \\ \times \quad 4 \\ \hline \end{array}$</p> <p>A. 100 B. 1000 C. 800</p>		
SECTION D :		<i>Solve</i>	(5 marks)
16	<p>$\begin{array}{r} \\$2.50 \\ \times \quad \underline{2} \\ \hline \end{array}$</p>		
18	<p>$9 \overline{) \\$81}$</p>		
19	<p>$1000 \text{ g} = \underline{\hspace{2cm}} \text{ kg}$</p>		
21	<p>The Sunbeam bus left Suva at 7.00 am and it reached Sigatoka at 9.45 am.</p> <p>7.00 am 9.45am</p> <p>Left Suva Reached Sigatoka</p> <p>How long did it take the bus to reach Sigatoka. _____</p>		
22	<div style="display: flex; justify-content: space-around; align-items: flex-start;"> <div style="text-align: center;">  <p>Ice-cream \$1.50</p> </div> <div style="text-align: center;">  <p>Chocolate \$2.50</p> </div> <div style="text-align: center;">  <p>Ruler \$0.50</p> </div> <div style="text-align: center;">  <p>Exercise Book \$1.00</p> </div> </div> <p>What change will you get from a \$5.00 note if you buy :</p> <p>a) ice cream and a chocolate</p>		<p>a..</p> <p>_____</p>

Section A: Fill In The Blanks.

- 1.As boys and girls grow, there are some changes happening in their _____.
- 2.A balanced meal is a meal that consist of the right amount of _____ from the three food groups.
- 3.The _____ bone in our body is called the femur.
- 4.The _____ process begins in the mouth.
- 5.When we _____ or sneeze, use a handkerchief.

cough	Digestive	longest	food	bodies
-------	-----------	---------	------	--------

Section B: True or False

1. Brush your teeth after one meal. _____
2. The stale the food, the better it is for our health. _____
3. We can get meat from the butcher. _____
4. Junk food is important to the body. _____
5. You can suffer from typhoid if you drink dirty water. _____

Section C : Matching

- | | |
|----------------------|-------------|
| 1. Nutritious snack- | A. cucumber |
| 2. Rubbish- | B. water |
| 3. Sea- | C. bin |
| 4. Gallon- | D. fish |
| 5. Vegetable- | E. sandwich |

Section D : Answer Questions.

1. How can you prevent airborne disease?
_____.
2. Why is water important in our body?
_____.
3. How can you help people with disabilities?
_____.

4. What can happen if you make wrong decisions?

_____.

5. What is another name for desirable emotions.

_____.

Section D : Draw the following .

Draw how you help your parents at home.

--	--	--

Draw 2 nutritious snacks.

--	--

Assessment**Section A : इन्हे पूरा करो**

आ[]म []वेरा दि[] चाँ[]
पा[]शाला

Section B: Gender

लड़का	-	लड़की	जाता	-	जाती
दौड़ता	-	-----	खाता	-	-----
आता	-	-----	रोता	-	-----
सोता	-	-----			

Section D विलोम शब्द

ऊपर	-	नीचे	साफ	-	-----
अन्दर	-	-----	दिन	-	-----
लड़का	-	-----			

लड़की बाहर रात मैला औरत

Section E: समान्य अर्थ शब्दों का मेल करो

- | | | |
|----------|-------|-----------|
| 1. धरती | _____ | क. बालिका |
| 2. लड़की | _____ | ख. अकाश |
| 3. नेत्र | _____ | ग. साँझ |
| 4. शाम | _____ | घ. पृथ्वी |
| 5. गगन | _____ | च. आँख |

Strand	Resources and Economic Activities
Sub Strand	People and Work
Content Learning Outcome	Gather information on services that are available in their communities and compare different roles they play in helping people.

People Who Help Us

1. **Teacher**- in school, teachers teach us how to read, write and good values I must follow every day. Always respect and listen to your teachers.
2. **Doctors / Nurses**- They help us when we are sick. They give us medicines and treat our cuts and wounds. Always go to the hospital when you are not feeling well.
3. **Priests / Pundits**- They teach us the good values we must follow in life. They help us to strengthen our relationship with God.
4. **Policeman / Policewoman** – They catch the thieves. They patrol our community to keep us safe. We must call the police when we see anything suspicious.
5. **Farmers** – They provide us with healthy fruits and vegetables every day. They make use of our land by farming.

Activity

Write down how these people help you in your community

People who help us	How do they help us
1. Farmer	
2. Policeman/Policewoman	
3. Taxi Drivers	
4. Bus Drivers	
5. Doctors	
6. Priest	
7. Shopkeeper	
8. Teacher	

YACAMU: _____

KALASI: _____

WASEWASE A : VAKAYAGATAKA NA MATANIVOLA LEVU ENA VANUA DODONU.

1. lautoka - _____
2. mere - _____
3. noveba- _____
4. moniti- _____
5. niusiladi- _____

WASEWASE B : VOSA VEIBASAI.

vakayadra	veiwekani	veikidavaki	rakorako	marama
-----------	-----------	-------------	----------	--------

1. vakamoce-- _____
2. veimecaki-- _____
3. veitalatala- _____
4. sakasaka-- _____
5. turaga- _____

WASEWASE C : BULI VOSA

1. Vaka_____.
2. Se_____.
3. Ti_____.
4. Ko_____.
5. Bu_____.

WASEWASE D : VAKACURUMA NA VOSA DODONU ENA VANUA E LALA.

vakayadra	vakabula	rakorako	tama	vakacobocobo
-----------	----------	----------	------	--------------

1. E da dau _____ ena mataka.
2. E da dau _____ ena sigalevu.
3. Sa l tovo _____ me da dau vakayadra se vakabula.
4. Na _____ na vakabula se vakayadra vua na turaga.
5. E da dau _____ ni da lululu oti kei na turaga.

School: Lovu Sangam School

Year: 4

Subject: Elementary Science

Term: 4 Worksheet: 1

Revision

Section A Multiple Choice

Read carefully and circle the letter of the correct answer.

1. Forces make things _____.
A. stop B. move C. twist
2. We push, pull or twist with the help of our _____.
A. muscles B. eyes C. book
3. Pull, push or twist is all kinds of _____.
A. magnets B. muscles C. forces
4. There are _____ planets in the solar system.
A. 4 B. 9 C. 8
5. The solar system also consists of bodies like moon, dust and _____.
A. planes B. jets C. gas
6. It takes _____ days for the earth to move around the sun.
A. 563 B. 635 C. 365
7. Earth spins every _____ hours.
A. 60 B. 27 C. 24
8. _____ are the oldest instrument for telling time.
A. Sundials B. Telescope C. Thermometer
9. It takes the moon _____ days to travel around the earth.
A. 37 B. 27 C. 24
10. We use a _____ to view stars.
A. telescope B. sundials C. sunglass

Section B True or False

Write *True* if the sentence is true and write *False* if the sentence is not true.

1. You can see forces. _____
2. There are many types of forces. _____
3. Forces are all around us. _____
4. The Earth is the planet closest to the sun. _____
5. Plants need sunlight to make their food. _____

Section C**Fill in the Blanks**

Choose the word from the box to fill in the blanks.

life	earth	east	planet	365	sun
------	-------	------	--------	-----	-----

1. The _____ moves around the sun. The _____ does not move.
2. It takes the earth _____ days to move around the sun.
3. The sun rises in the _____.
4. Venus is the second _____ in the solar system.
5. Earth is the only planet, which has _____ on it.

Section D: PART A**DIAGRAM**

Draw and name two animals ,one with backbone and one without backbone:

With backbone Name: _____ 	Without backbone Name: _____
---	--

Part B**Drawing****6 marks**

Read the sentences carefully and draw.

a. An animal which have four legs with soft pad.	b. An animal which uses wings for flying.
---	--