





**1076 NADI SANGAM SCHOOL**  
**WORKSHEET 2 ELEMENTARY**

**Year -6**

**(28/6/21-03/7/21)**

**SECTION A**

**Name these science equipment below**

**Draw these science equipment's.**

Tripod stand	Test tube	Bunsen burner	Gauze mat	Measuring cylinder

### **SHORT ANSWER QUESTIONS**

1. What is a thermometer used for?

\_\_\_\_\_

2. What is the:

a. boiling point-\_\_\_\_\_

b. freezing point-\_\_\_\_\_

3. What is a matter?

\_\_\_\_\_

4. Name three states of matter.

a. \_\_\_\_\_

b. \_\_\_\_\_

c. \_\_\_\_\_

5. What is needed to change solid to liquid to gas ?

\_\_\_\_\_

### **Name the processes**

1. Liquid to gas-\_\_\_\_\_

2. Gas to liquid-\_\_\_\_\_

3. Solid to liquid-\_\_\_\_\_

4. Liquid to solid-\_\_\_\_\_

5. Solid to gas - \_\_\_\_\_

6. Gas to solid-\_\_\_\_\_

***....THE END....***