

Sangam SKM College – Nadi




Year 12

Home Economics

Worksheet 4

Questions

1. Complete the table given below stating the name and the uses of the following sewing equipment.

Diagram	Name	Uses
		
		
		

2. Illustrate the following pattern markings:

(i) Buttonholes and buttons

(ii) Darts

3. Fill in the blanks.

- (i) _____ - Tucks that meet at the fold line.
- (ii) _____ - Tucks that have a space between.
- (iii) _____ - Tucks which is very narrow.