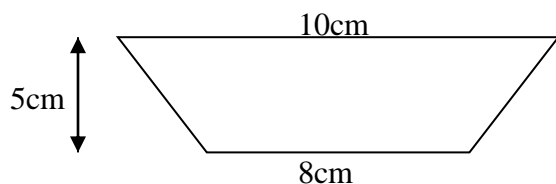


6. The area of the shape is



- A. 80 cm^2 B. 15 cm^2 C. 20 cm^2 D. 45 cm^2

7. $1 \frac{7}{10}$ is equal to

- A. 1.07 B. 0.17 C. 1.7 D. 10.7

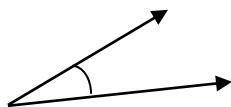
8. What is 5% of 120?

- A. 16 B. 50 C. 6 D. 10.7

9. Find the average speed of a car if it travelled 560 km in 4 hrs?

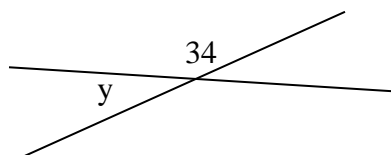
- A. 135 km/h B. 140 km/h C. 104 km/h D. 150 km/h

10. What special name is given to the angle shown below?



- A. Acute B. Obtuse C. Reflex D. Straight

11. What is the size of the missing angle y?



- A. 146° B. 48° C. 75° D. 65°

12. What fraction of 3cm is 5mm?

- A. $\frac{5}{3}$ B. $\frac{1}{6}$ C. $\frac{1}{30}$ D. $\frac{1}{60}$

13. The rule of a number machine is $r = 2(I - 4)$. If the input number is 10, what is the output number?

- A. 12 B. 16 C. 20 D. 40