

# 1874 Nasinu Sangam School

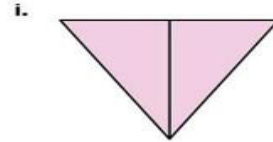
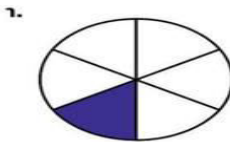
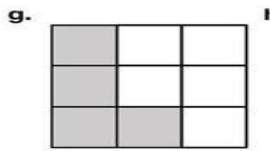
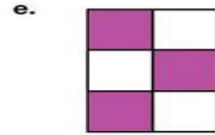
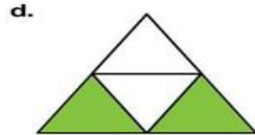
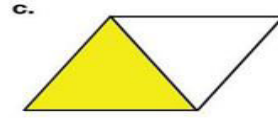
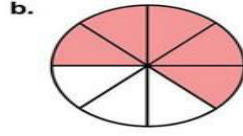
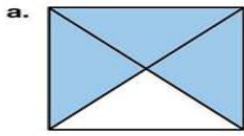
## Year 3

## Hindi


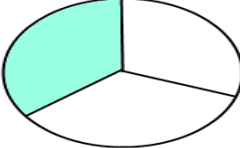
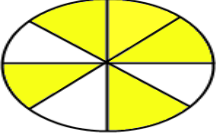
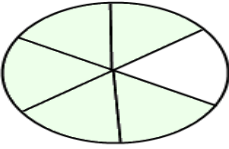
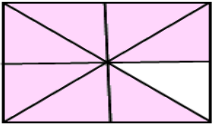
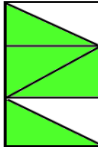
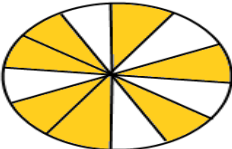
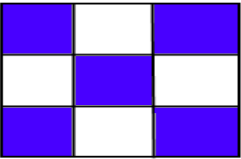
## Worksheet 1

### Fractions

Write the fraction of the shaded part.



Circle the fraction of the shaded part.

1. 	$\frac{1}{2}$	$\frac{3}{2}$	2. 	$\frac{1}{3}$	$\frac{3}{4}$
	$\frac{2}{3}$	$\frac{1}{3}$		$\frac{1}{2}$	$\frac{2}{3}$
3. 	$\frac{3}{8}$	$\frac{5}{8}$	4. 	$\frac{6}{5}$	$\frac{3}{6}$
	$\frac{3}{4}$	$\frac{2}{7}$		$\frac{2}{5}$	$\frac{5}{6}$
5. 	$\frac{3}{8}$	$\frac{6}{8}$	6. 	$\frac{4}{6}$	$\frac{5}{6}$
	$\frac{7}{8}$	$\frac{8}{7}$		$\frac{6}{5}$	$\frac{2}{6}$
7. 	$\frac{11}{12}$	$\frac{7}{12}$	8. 	$\frac{5}{9}$	$\frac{7}{9}$
	$\frac{7}{11}$	$\frac{8}{12}$		$\frac{6}{9}$	$\frac{9}{6}$

