

SANGAM SKM COLLEGE - NADI
GEOGRAPHY – YEAR 11
WEEK 4 – WORKSHEET 4
MODEL SOLUTION

TOPIC: RELIEF - NZ & FIJI

QUESTION 1: FILL IN THE BLANK

- 1.] Barrier
- 2.] Fringing.
- 3.] Transform, Two, Destroyed
- 4.] Continental.
- 5.] Oceanic, Magnesium
- 6.] Subduction, Heavier, Lighter.
- 7.] Indo – Australian plate, Convergent.
- 8.] Volcanic, Deep.

QUESTION 2: MATCHING
Match the following from Column A to B.

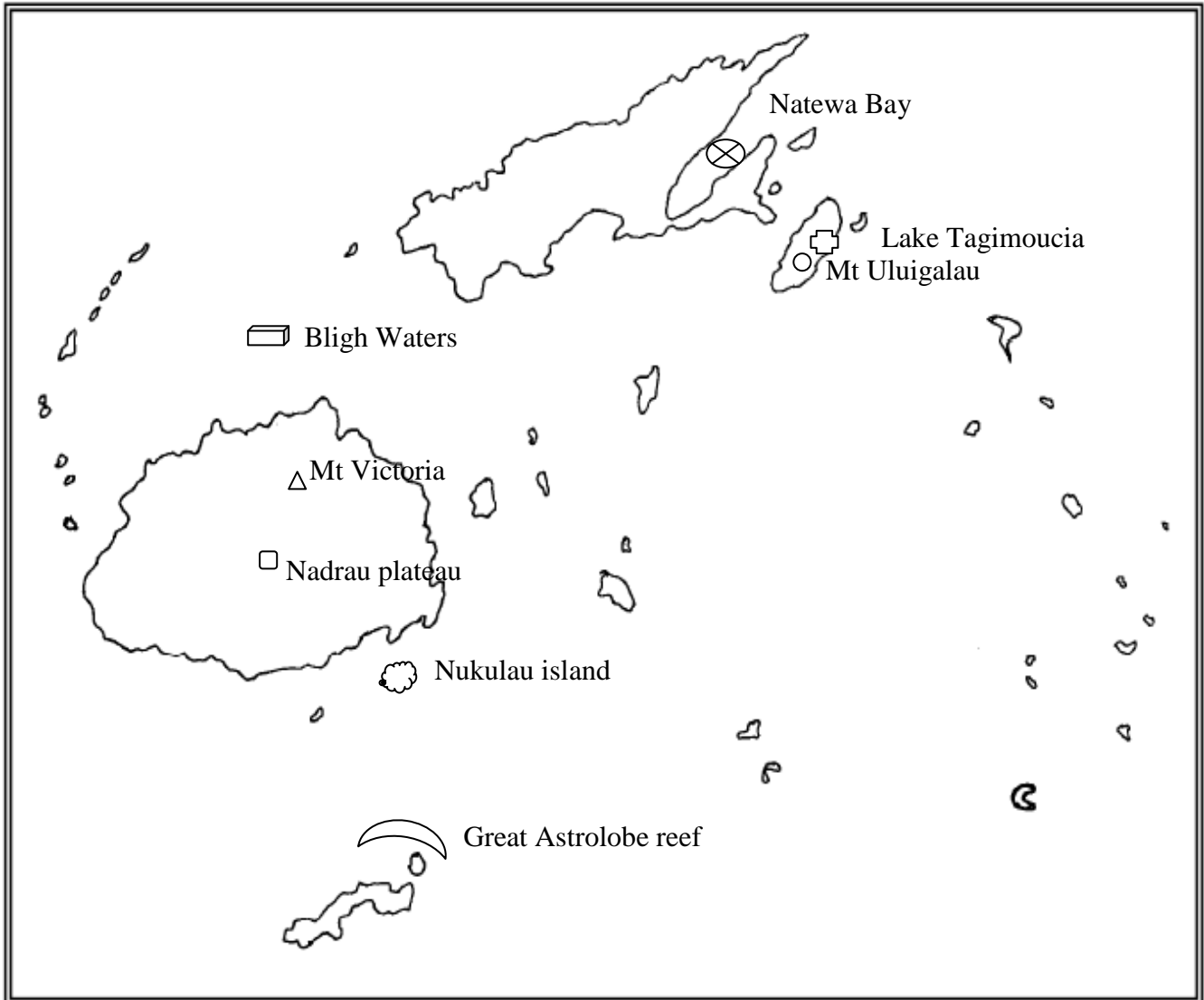
COLUMN A









COLUMN B

1.] Dendritic River		a.) a river pattern that radiates from the top of a mountain
2.] Radial River		b.) a river pattern that has many bends as it flows down
3.] Meandering River		c.) a river pattern that flow through a drainage basin that causes the channel to twist and bend at right angles.
4.] Trellis River		d.) a river that has a complex pattern of many channels
5.] Braided river		e.) A typical river pattern that has many small twigs and branches at the edge which join larger branches and finally the trunk

QUESTION 3: MAPPING - RELIEF FIJI

On the outline map of Fiji, name and locate the following features;

**KEY:**

f.)		A partly drowned caldera
g.)		Barrier reef
h.)		A coral Island
i.)		Mt Uluigalau
j.)		Nadrau plateau
k.)		Highest Mt Peak in Fiji
l.)		Nateway Bay
m.)		Bligh waters