

UCIWAI SANGAM SCHOOL

YEAR 8

ENGLISH WORKSHEET NO. 2 - Solution

DICTIONARY EXERCISE

Write the following names in alphabetical order:

(a) Isimeli, Kamal, Lusi, Mildred, Peter, Salote, Sushila, , Tebuaki, Tupeni Vincent

(b) Arieta, Asenaca, Kaushik, Koresi, Panapasa, Ranjani, Sekaia, Silio

GRAMMAR ACTIVITIES

WORD BUILDING EXERCISE

1. The nurse was very **careful** when she lifted the child.
2. The man had many cuts which were very **painful**.
3. Everyone was very **respectful** to the chief.
4. The man's house was very **colourful**.
5. A snow plough wouldn't be very **useful** in Fiji.
6. It's a very **powerful** engine.
7. Our annual concert was very **successful**.
8. They are very **harmful** to our crops.
9. He is a very **skilful** carver. (Note: There should be only one 'l' in skilful)
10. It's best to build a fish canning factory in a place where fish is **plentiful**.

LITERATURE – POEMS

Answers to the questions.

1. Who is the poet of this poem?
Elizabeth Smither
2. What is the setting of this poem?
The sky is the setting
3. What is the mood of the poem?
The mood of the poem is playful.
4. Write an example of personification from the poem.
The sheep referred to in the poem are clouds.
5. What did you learn after reading this poem?
 - **Keep moving and work hard in life**
 - **Be passionate of what you do and let your hard work speak the volume of your success**
 - **Appreciate Mother Nature.**

UCIWAI SANGAM SCHOOL**YEAR 8****MATHEMATICS WORKSHEET NO. 2 SOLUTION****Exercise**

1. Convert each of the following to the unit given.

a) 7L = 7 000 ml

b) 69 500ml = 69.5 L

c) 4 587ml = 4.587 L

d) 20.8 L = 20 800 ml

e) 6 ½ L = 6 500 ml

2. Find the total of the quantities below, giving your answer in the units written.

a) 4.3 L + 7.5 L = 11.8 L x 1000 = 11 800 ml

b) 6.8 L + 550 ml = 6 800 + 550 = 7 350 ml ÷ 1000 = 7.35 L

c) 45 L + 15 250 ml = 45 000 + 15 250 = 60 250 ml

d) 2.4 L + 3450 ml + 4.6 L = 2.4 + 3.45 + 4.6 = 10.45 L

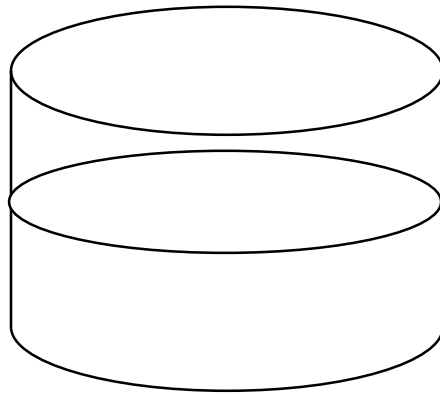
e) 54.4 L + 25 000 ml = 54.4 + 25 = 79.4 L

3. Calculate the volume of these cuboids in cm³ and convert it into ml.

(a) $V = l \times w \times h$
 $= 15 \text{ cm} \times 8 \text{ cm} \times 3 \text{ cm}$
 $= 360 \text{ cm}^3$
 $= \underline{360 \text{ ml}}$

(b) $V = l \times w \times h$
 $= 6 \text{ cm} \times 4 \text{ cm} \times 12 \text{ cm}$
 $= 288 \text{ cm}^3$
 $= \underline{288 \text{ ml}}$

4. If tank A has the capacity of 1.8L when full, then calculate the volume of water in the tank. Write your answer in ml.





$\frac{1}{2}$ full of water




$$\begin{aligned} V &= 1800 \text{ ml} \div 2 \\ &= \underline{\underline{900 \text{ ml}}} \end{aligned}$$

UCIWAI SANGAM SCHOOL**YEAR 8****BASIC SCIENCE WORKSHEET NO. 2 Solution****Electrical Energy****Exercise**

Electrical energy cannot be destroyed but it can change to other forms

Complete the table below.

	Item	What form of energy is electricity changed into for the following items?
1.	Iron 	Heat energy
2.	Cooking stove 	Light and heat energy Sound energy (bit low)

3.	<p>Desk Lamp</p> 	Light and heat energy
4.	<p>Table Fan</p> 	Sound and heat energy
5.	<p>Television</p> 	Light, sound and heat energy

UCIWAI SANGAM SCHOOL**YEAR 8****HEALTHY LIVING WORKSHEET NO. 2 SOLUTION****The Physical Environment****Activity How safe is your home**

You will inspect your home and the compound to see that it is safe to you and your family members. Be precise in your comments and recommendations. **Below are some examples but your answers will depend upon your home environment.**

Inspected Area	Safe / Unsafe	Comment	Recommendations
Eg. Door	Unsafe	Hinge is broken – door is hanging to one side	Repair the hinge – buy new one, get a carpenter to repair it.
Door	Unsafe	The paints have faded on the door	Paint the door. Buy paint and it can be painted by you.
Ceiling	Unsafe	The board is hanging.	Nail the board. Buy nails and get a carpenter or your father to nail it.
Wall	Safe	The walls are clean and neatly painted	-
Windows	Unsafe	Some louvre blades are missing.	Buy louvre blades and get a carpenter to cut the blades and put it on.
Toilet	Safe	The toilet is clean and can be used by the members	-
Gates (if you have one)	Unsafe	Some rods are missing from the gate.	Buy the rods and get a welder to repair it.
Compound	Unsafe	Some rubbish laying in the compound	It can be raked by you and disposed safely.

Verandah	Unsafe	The floor is rough.	Buy materials and ask a carpenter to plaster the floor.
Flower gardens	Safe	All types of flowering plants beautifully planted and maintained	It is fine. Plants needs to be watered due to drought.
Drains	Unsafe	The drains are blocked with weed.	Get together with your father or elder brother and clean it.
Water Taps	Unsafe	The tap is leaking.	Buy a new tap and change it. Ask father to do it if not then a carpenter can also do it.
Furniture	Unsafe	There are a few broken chairs	Get the chairs repaired by a joiner or buy new one and discard the broken ones.
Power points	Safe	They are good and new and safely positioned away (out of reach) from small children	-

Your answers may vary.

Write the things as they are at your home and ask your Parents if they can be made safe for you and your family members.

DO NOT FORCE THEM TO DO ANYTHING WHICH THEY CANNOT AFFORD TO DO.

UCIWAI SANGAM SCHOOL

YEAR 8

HINDI WORKSHEET NO. 2- SOLUTION

उपन्यास - “ कृष्ण सुदामा की दोस्ती”

क. पर्यायवाची शब्द

- | | | | | |
|-------------------------|------------|----------|------------|--------------|
| १. ईश्वर/परमात्मा/प्रभु | २. विश्वास | ३. मित्र | ४. भागता | ५. प्रसन्नता |
| ६. भीतर | ७. चकित | ८. रुकना | ९. इन्तजार | १०. पता |

ख. उत्तर पूरे वाक्य में लिखिए ।

१. द्वारपाल को यकीन नहीं आया कि सुदामा कृष्ण के दोस्त हैं क्योंकि सुदामा एक दरिद्र आदमी लगता था ।
२. सुदामा का नाम द्वारपाल के मुख से सुनते ही कृष्ण ने खेल छोड़कर उनसे मिल ने को भागा ।
३. भगवान कृष्ण और रानी रुक्मणी चौपड़ खेल रहे थे ।
४. भगवान कृष्ण खेल छोड़कर दौड़ने लगे क्योंकि बहुत सालों बाद दोस्त सुदामा से भेंट होंगी ।
५. राजम हल में भाग- दौड़ मच गई थी क्योंकि अपने राजा श्री कृष्ण को उस तरह भागता देख वे घबड़ा गए थे और फिर खुद पीछे-पीछे भागे ।

ग. सही या गलत

१. ✓ २. × ३. ✓ ४. ✓ ५. ×

घ. चित्र चर्चा और लेखन कार्य



उत्तर पूरे वाक्य में लिखिए ।

१. ऊपर दिखाया गया चित्र श्री कृष्ण का है ।
२. यह चित्र श्री कृष्ण के महल का है ।
३. वे सुदामा से मिलने के लिए भागे जा रहे हैं क्योंकि बहुत सालों बाद दोनों की भेंट होगी ।

सारांश

सुदामा ने द्वापाराल से कहा कि वह राजा श्री कृष्ण से मिलना चाहते हैं । द्वापाराल सन्देश राजा श्री कृष्ण के पास भिजवाता है । समाचार सुनते ही श्री कृष्ण फाटक की ओर दौड़ पड़े । स्कमणी चकित होकर श्री कृष्ण के पीछे भागने लगी । यह भाग-दौड़ देखकर सभासद के साथ-साथ नौकर-चारक भी घबरा कर उनके पीछे भागने लगे ।

सीख

- पराने दोस्त को कभी नहीं भूलना चाहिए ।
- सभी से प्रेम से मिलना चाहिए ।
- दोस्ती में ऊँच-नीच नहीं देखी जाती है ।

UCIWAI SANGAM SCHOOL

YEAR 8

SOCIAL SCIENCE WORKSHEET NO. 2 SOLUTION

Medical Epidemic

For You to Do

1. Name a disease that causes an epidemic in your community?

Dengue Fever

2. What causes it?

It is caused by mosquitoes carrying dengue virus.

3. How was it treated?

There is no specific medicine to treat dengue infection. If you think you may have dengue fever, you should use pain relievers with acetaminophen and avoid medicines with aspirin, which could worsen bleeding. You should also rest, drink plenty of fluids and see your doctor.

Pacific Games

For You to Do

1. Name the countries that usually take part in the South Pacific Games?

New Caledonia, Papua New Guinea, Samoa, Tahiti, Fiji, Australia, Nauru, Tonga, New Zealand, Vanuatu, Kiribati, Cook Islands, Solomon Islands, Guam, Wallis and Futuna, Northern Mariana Islands, Norfolk Island, American Samoa, Niue, Tuvalu, Federated State of Micronesia, Marshall Islands, Tokelau and Palau

2. Which country won the last South Pacific Games?

New Caledonia

3. When and where will the next South Pacific Games be held?

Solomon Islands in the year 2023

1078 UCIWAI SANGAM SCHOOL

CAKACAKA LAVAKI KALASI 8 - I sau ni taro

NA VEIKA VAKA –VITI

1. E tini na taqa voivoi sa dua na _____.
A. **Vutu** C. vatū
B. Wai D. mata
2. E na vula vaka Viti, na vula I Gasau na _____.
A. Veverueri C. **Evereli**
B. Maji D. Me
3. Na I cavuti ni vanua vakaturaga ko Nadroga na _____.
A. Lalagavesi C. Caumatalevu
B. **Nakuruvakarua** D. Burebasaga
4. Na vakabogidrau e dau caka e na gauna ni _____.
A. Vakamau C. vakasucu
B. **Mate** D. vakacirisalusalu
5. Na manumanu cava e dau soki?
A. **Beka** C. vuaka
B. Vusi D. lulu

.NA VAKAYAGATAKI NI VOSA

1. **Vola vakadodonu na iyatuvosa ka koto e ra.**

au na lako vata kei wati ni suka na vuli ki deuba e na siga tusiti

Au na lako vata kei Wati ni suka na vuli ki Deuba e na siga Tusiti.

2. **Vola na taro e a taroga ko Meli.(1 m)**

A taroga ko Meli e na gole mai e na gauna cava ko tinana.

"E na gole mai e na siga cava ko tinaqu?" e ataroga ko Meli.