


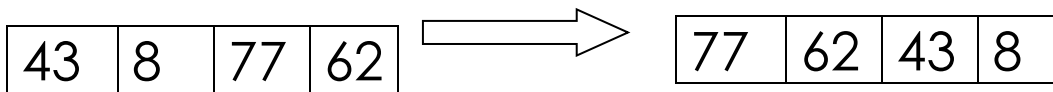
RAVIRAVI SANGAM SCHOOL

YEAR 2

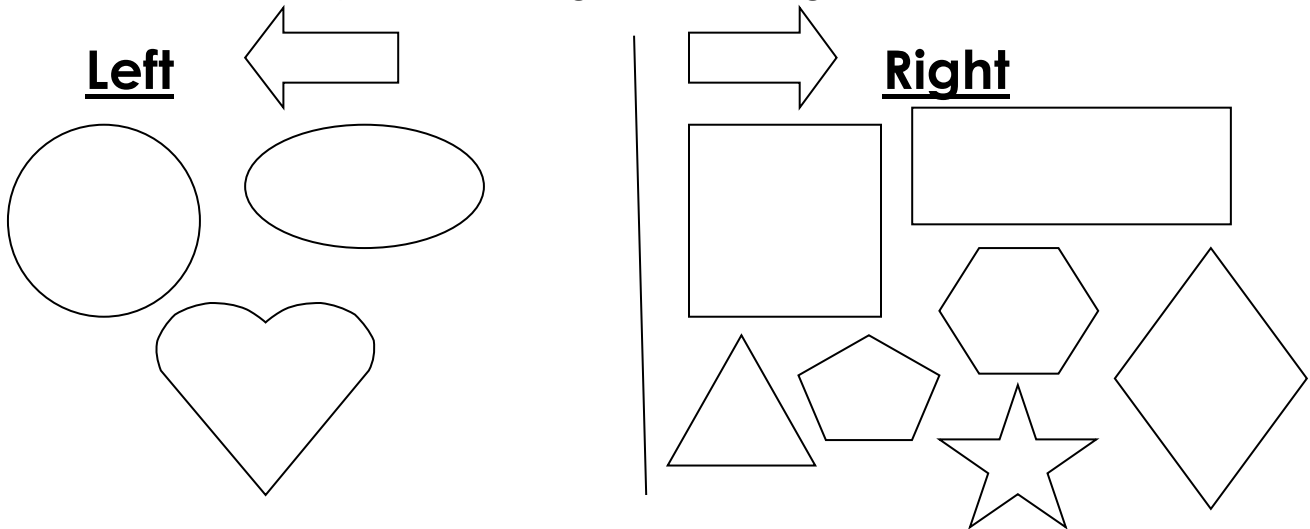
NUMERACY

WORKSHEET 1 SOLUTIONS

QUESTION 1- Ordering numbers- write these numbers in descending order(biggest to smallest)



QUESTION 2- SHAPES / DIRECTION- Draw shapes with curved lines on left side and shapes with straight lines on right side.



QUESTION 3- Write the number names for these numerals.

61- sixty one 53 – fifty three

97 - ninety seven

24 - twenty four

12 - twelve

38 - thirty eight