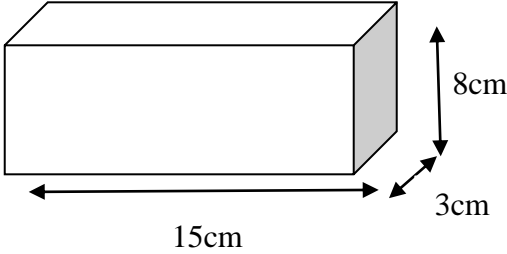
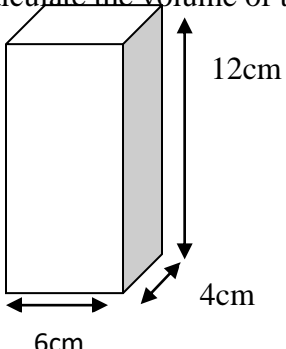
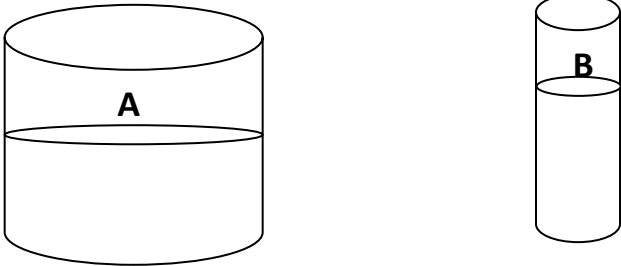


No:	Question	Working	Answer
1.	Convert each of the following to the unit given in brackets. a) 7L = _____ ml b) 6 ½ L = _____ ml c) 69 500ml = _____ L		a) 7000 ml b) 6500 ml c) 69.5 L or 69 ½ L
2.	Calculate the volume of these cuboids in cm ³ and then convert it into ml. a) 		360cm ³ 360 ml
3.	b) Calculate the volume of these cuboids in cm ³ 		288 cm ³
4.	 <p style="text-align: center;"> ½ full of water ¾ full of water </p> <p>If Tank A has the capacity of 1.8L and Tank B has 1.6L of water when full, then calculate the volume of water in each tank. Write your answer in ml.</p>		A = 900 ml B= 1200 ml