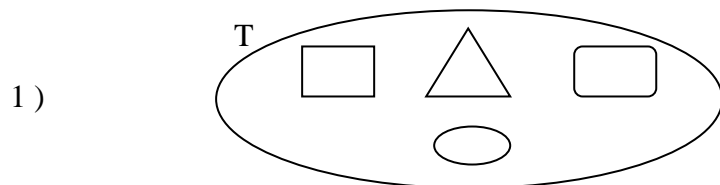


1080 BA SANGAM PRIMARY

YEAR 3 WORKSHEET

NUMERACY



i) The cardinal number of set T =

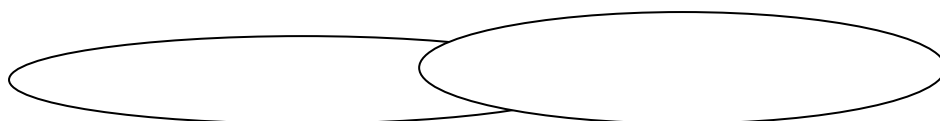
ii) The number property of set T =

iii) $n(T) = \dots\dots\dots$

2) Write down the elements of the following sets using a venn diagram

i) $H = \{ 10, 20, 30, 40, 50, 60 \}$

ii) $K = \{ 1, 3, 5, 7, 9, 11 \}$



3) Arrange these numbers in descending order :

a) 673 , 346 , 582 , 129 , 289 , 862

.....

b) 28 , 102 , 93 , 76 , 12 , 61

.....

4) Arrange these numbers in ascending order :

a) 91 , 10 , 35 , 42 , 70 , 9 , 11 , 57

.....

b) 989 , 789 , 189 , 389 , 589

.....

5) Partition these numbers :(For eg: $37 = 30 + 7$)

a) $82 = \dots\dots\dots + \dots\dots\dots$

b) $29 = \dots\dots\dots + \dots\dots\dots$

1080 BA SANGAM PRIMARY

YEAR 3 WORKSHEET

LITERACY

1) Define the following words with examples:

a) nouns

.....

b) pronouns -

.....

c) verbs -

.....

2) Making Sentences - make a sentence with the following words:

a) parents -

.....

b) naughty -

.....

3) Write down the gender nouns for the following words:

a) Prince -

b) Sister -

c) Uncle -

d) Grandmother -

e) Madam -

5) Write down the plurals_ for the following words:

a) chair -

d) leaf -

b) woman -

e) baby -

c) tooth -

f) box -

1080 BA SANGAM PRIMARY

YEAR 3 WORKSHEET

SOCIAL STUDIES

Answer these questions :

1. Define these words :

i) family -

.....

ii) family tree -

.....

iii) roles -

.....

iv) culture -

.....

2. What are the 4 places of worship ?

.....

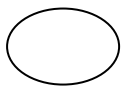
.....

3. What festivals / celebrations do these people celebrate :

Hindus - Muslims -

Christians -


4. Name these symbols in a family tree :



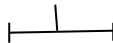
.....



.....



.....



.....

5. Draw your family tree :

1080 BA SANGAM PRIMARY

YEAR 3 WORKSHEET

ELEMENTARY SCIENCE

Answer these questions

1. What is the function of the :

i) root -

.....

ii) stem -

.....

2. What do the plants breathe in ?

3. Why do frogs have webbed feet?

4. Name two insects with six legs :,

.....

5. What are natural materials ?

.....

.....

.....

6. Give two examples of man-made materials .

.....

7. What are two properties of wood ?

.....

.....

1080 BA SANGAM PRIMARY

YEAR 3 WORKSHEET

HEALTHY LIVING

TRUE / FALSE

Write either True or False for the following :

1. We need to love everyone
2. There are six senses
3. The second stage of growth is infant
4. Babies do not need mothers milk
5. We use our tongue to taste things

SHORT ANSWER

1. Name any two moral values you learn in school :
.....
2. How can you help an old person ?
i).....
ii).....

MATCHING Match by writing the correct letter in the blank space :

- | | |
|------------------------|-----------------------------------|
| 1. Social | A. increase in height and weight |
| 2. Emotion | B. ability to think |
| 3. Physical | C. comparing yourself with others |
| 4. Intellectual | D. has to do with one's feelings |
| 5. Psychological | E. having fun with friends |

Put Either A Tick (√) Or a Cross (x)

1. Our nose are the most delicate organs .	
2. We should brush after every meal.	
3. It is important to keep ourselves clean .	

Ba Sangam Primary School

Kalasi – 3

Na Vosa Vaka Viti

Yacamu: _____

1. Veisataka mai na kena rawa mai e so na ka

A	B
kaikoso/lumi/dairo	taki
wai	keli
uvi /tivoli/rauva	canu
moli	dolo
via	tau
dovu	tuli
tavioka/dalo	qe
bele / rourou	cavu
sigawale	sagi/gutu
kaikuku	qoli/siwa
buka	ta
duruka	kola/ta
ika	cici
balolo	tibi
niu	se

2. Vakacuruma na veivosa oqo e na vanua e lala

I sevusevu	sevusevu	sevu	I sevusevu	sevu
------------	----------	------	------------	------

E ra dau _____ na neimami qase vua na Gone Turaga na Vunivalu. E nodra _____ na uvi. Ni se bera na _____ e ra dau _____ taumada. N a nodra _____ e dua na tama ni vuni yaqona levu.