

3037 NALOVO SANGAM SCHOOL

YEAR 3

MATHS

WORKSHEET #1

Strand 1 Number and Numeration

Whole Numbers

1. Write odd or even besides the numbers:

a. 42 - _____

b. 53 - _____

c. 12 - _____

2. Use the braces to :

a. Write five even numbers less than 20 = _____

b. Write five odd numbers less than 20 = _____

c. Write five whole numbers more than 20 = _____

d. Write the first five counting numbers = _____

Activity 2 Ordering Numbers

1. Arrange the numbers from the smallest to the largest.

a. 24, 47.12, 90, 120, 1, 356 = _____

b. 80, 100, 300, 10, 40, 50, 20, 30 = _____

2. Arrange the number from the largest to the smallest

a. 201, 210, 236, 326 = _____

b. 145, 154, 324, 234 = _____

3037 NALOVO SANGAM SCHOOL

YEAR 3
ENGLISH
WORKSHEET #1

CIRCLE THE CORRECT ANSWER:

- Which of these is **not** a noun?
a. girl b. dog c. Tina d. sit
- What is the rhyming word for **went**?
a. Send b. sent c. go d. come
- From the sentence given below choose **a noun**
This is a red flower.
a. This b. is c. red d. flower
- Which of these are **not** rhyming words?
a. hot, pot, got
b. may, say, day
c. dog, log, leg
d. in, bin, tin
- Father is sitting on the _____.
a. Bed b. bad c. bird d. bade
- Which of these sentences is written correctly?
a. tina is a good girl
b. Tina Is a good girl.
c. Tina is a good girl.
d. Tina is a good girl
- Which of these words **do not** rhyme with **mat**?
a. Cat b. rat c. door d. bat
- _____ is a **common noun**.
a. Boy b. Kitty c. James d. run
- "Mango" is a _____ noun.
a. Common b. proper c. verb d. adjective
- From the list given below choose the **correct set of rhyming words**.
a. Bee, fee, buy
b. Face, legs, eggs
c. Pen, pencil, ten
d. Best, rest, test

3037 NALOVO SANGAM SCHOOL
YEAR 3
HINDI
WORKSHEET # 1

शब्द निर्माण:

- | | |
|-------------|-------------|
| 1. वि----- | 6. पौ----- |
| 2. अ----- | 7. भो----- |
| 3. बू----- | 8. खो----- |
| 4. चाँ----- | 9. सु----- |
| 5. गो----- | 10. मे----- |

वाक्य बनाओ:

1. तुम -----

 2. नदी -----

 3. देखो -----

 4. पेड़ -----

 5. सुन्दर -----

 6. पाठशाला -----

 7. रास्ता -----

-





3037 NALOVO SANGAM SCHOOL

YEAR 3
HEALTHY LIVING
WORKSHEET #1

HUMAN GROWTH AND DEVELOPMENT

STAGES OF GROWTH

1. Label the stages of growth below

1. Babies need _____ to grow.
2. _____ milk is the best for babies.

3037 NALOVO SANGAM SCHOOL
YEAR 3
ELEMENTARY SCIENCE
WORKSHEET #1

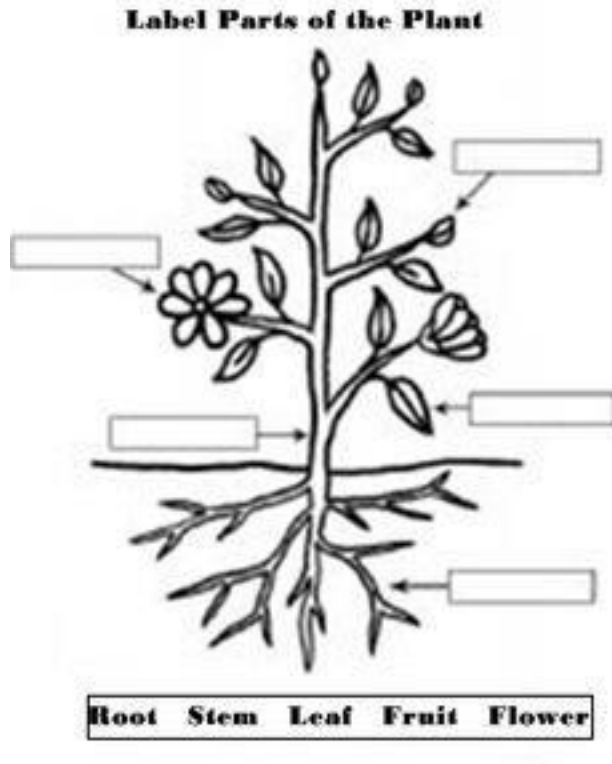
STRAND 1 LIVING THINGS AND ENVIRONMENT

Plants

1. Identify some flowering and non-flowering plant from your own surrounding and fill it in the table below.

Flowering Plant	Non – Flowering plant

Activity 2 Label the parts of the plants






3037 NALOVO SANGAM SCHOOL

YEAR 3

SOCIAL STUDIES

WORKSHEET #1

MY BIO- DATA

<p>1. My picture</p> 	<p>Name: _____</p> <p>Parents /Guardians Names: _____ _____</p> <p>Write the meaning of your name: _____</p>
<p>2. Age</p> 	<p>Date of birth: _____</p> <p>Age: _____ years.</p>
<p>3. Home</p> 	<p>I live at: _____ _____</p> <p>Telephone: _____</p>

3037 NALOVO SANGAM SCHOOL

YEAR 3

VEIKA VAKA VITI

WORKSHEET #1

WASEWASE : A

Vakacuruma na veivosa e dodonu:

turaga	Kena turaga	duadua	magiti	vakarokoroko
--------	-------------	--------	--------	--------------

1. Au rarawa ni lako _____ ki na I teitei.
2. Sa _____ sara ga ko tukaqu.
3. E _____ bale na Vunivalu.
4. E moku na vuaka me I coi ni _____.
5. E dodonu me da dau _____ vei ira noda I tubutubu.

WASEWASE : B

Veisataka na vosa ena B kei na ke nai Vosa Veibasai ena A.

A		B	
1	Tukaqu	A	Siga rugurugua
2	Velavela	B	Dula
3	Tagi	C	Buqu
4	Siga katakata	D	Kamikamica
5	Taubale	E	Vulagi
6	Cata	F	Vakalevu
7	Murimuri	G	Vinakata
8	Cala	H	Matai
9	Taukei	I	Cici
10	makutu	J	Donu

WASEWASE: C

Veisataka na vosa ena B kei na ke nai Vosa Tautauvata ena A.

A		B	
1	Turaga	A	besetaka
2	Marama	B	ramase
3	Lade	C	Tagane
4	rarama	D	yalewa
5	Cata	E	Rika