

NADI SANGAM SCHOOL

WEEKLY

HOME STUDY PACKAGE

16/08/21- 20/08/21

YEAR 5

WORKSHEET 9- SOLUTIONS

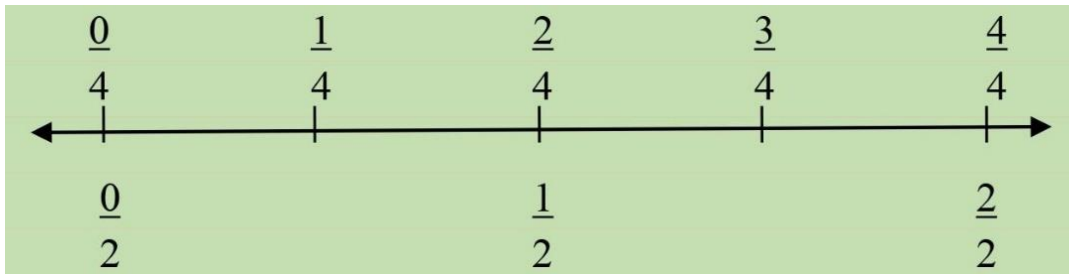
1076 NADI SANGAM SCHOOL

YEAR 5

MATH

ACTIVITY SHEET 9 - SOLUTIONS

Refer to the number line diagram below and draw an arrow to match each fraction with its place on the number line. ***The first one is done for you.***



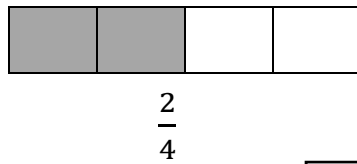
1. $\frac{2}{4} \boxed{<} \frac{3}{4}$

2. $\frac{2}{4} \boxed{>} \frac{1}{4}$

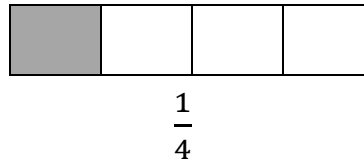
3. $\frac{1}{4} \boxed{<} \frac{4}{4}$

For numbers 4 and 5. Use the diagram to compare the fractions. Use **< or >** as your answers. **Shade the number of blocks as the fractions states.** Use the example from the notes to help you solve these problems.

4.



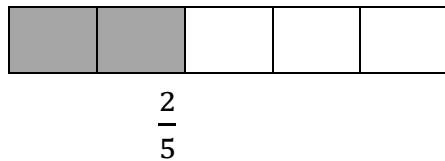
$\frac{2}{4}$



$\frac{1}{4}$

$\frac{2}{4} \boxed{>} \frac{1}{4}$

5.



$\frac{2}{5}$



$\frac{4}{5}$

$\frac{2}{5} \boxed{<} \frac{4}{5}$

1076 NADI SANGAM SCHOOL

YEAR 5

ENGLISH

ACTIVITY WORKSHEET 9

Rewrite the following sentences using the correct punctuation marks.

1. mary jone steven are in year 501

Mary, Jone and Steven are in Year 501.

2. next week rosemary and I are going to ireland

Next week Rosemary and I are going to Ireland.

3. simon said Sorry I can't right now

Simon said, "Sorry I can't right now".

4. did you see that

Did you see that?

5. joel has been accepted from the university of the south pacific

Joel has been accepted from The University of the South Pacific.

1076 NADI SANGAM PRIMARY SCHOOL

YEAR 5

SOCIAL STUDIES

WORKSHEET 9- SOLUTIONS

Complete the following table: (Research)

<u>COUNTRY</u>	<u>CAPITAL</u>
Fiji	Suva
Tonga	Nuku'alofa
Nauru	Yaren
Solomon Islands	Honiara
Tuvalu	Funafuti
Kiribati	South Tarawa
Papua New Guinea	Port Moresby
New Caledonia	Noumea
Tahiti	Papeete
Vanuatu	Port Vila
Samoa	Apia
Marshall Islands	Majuro
Palau	Ngerulmud
Cook Islands	Avarua / Avarua District
New Zealand	Wellington
Australia	Canberra

1076 NADI SANGAM SCHOOL

YEAR 5

ELEMENTARY SCIENCE

WORKSHEET 9- SOLUTIONS

Write the name of species based on its description:

1. Medium-sized brown dove- **Friendly Ground Dove**
2. Fresh water snail with height of 14mm- **Fiji Doma Maculata**
3. World's second largest beetle- **Giant Fijian Longhorn Beetle**
4. Has bright orange eyes and pointed teeth- **Fijian Flying Fox**
5. One of the world's largest coral fish- **Humphead Moari Wrasse**
6. Has slightly-down curved bill and dull feathers- **Giant Forest Honeyeater**
7. Small bird with red throat, cheeks and thighs- **Red-throated Lorikeet**
8. Is a marine Bivalvia- **Devil Clam**
9. A rare insect that can grow up to 10cm in length- **Fijian Stick**
10. A small, soft, worm-like animal with 2 tentacles but no shell- **Acochlidium Fieense**

1076 NADI SANGAM PRIMARY SCHOOL

YEAR 5

HEALTHY LIVING

WORKSHEET 9- SOLUTIONS

Answer the following questions:

1. Define emergency-
Is a situation that pose an immediate risk to health, life, property or environment.

2. When does government declare a state of emergency?
In the event of major incidents.
3. What type of emergency is Fiji currently experiencing?
Outbreak of disease.
4. Write the emergency numbers of the following:
 - a. Fire- **910**
 - b. Police- **917**
 - c. COVID 19- **158**

1076 NADI SANGAM SCHOOL
YEAR 5
HINDI WORKSHEET 9 – SOLUTION

अभ्यास (Activity)

क. दिए गए शब्दों को स्त्रीलिंग में लिखो।

1. दादा – दादी
2. मोर – मोरनी
3. छात्र – छात्रा
4. धोबी – धोबिन
5. अध्यापक - अध्यापिका

ख. दिए गए शब्दों को पुल्लिंग में लिखो।

1. चाची - चाचा
2. शेरनी - शेर
3. नौकरानी - नौकर
4. चुहिया - चूहा
5. पुत्री - पुत्र