

DREKETI SANGAM SCHOOL

YEAR 5

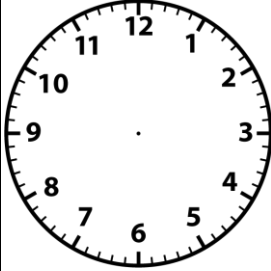


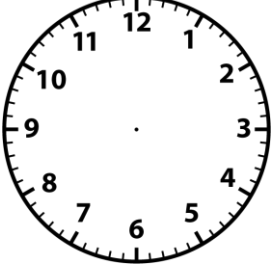
MATHS

NAME: _____ WORKSHEET # 4


QUESTIONS

Draw, write each of these examples in:

- i) am or pm time,
- ii) digital 24-hour time
- iii) analogue time.

Analogue	Draw 	Draw 		Draw 
24 hour time		Fourteen thirty hours		
a.m / p.m	8.30 a.m		_____ p.m	11.45 p.m


Draw the missing hour and minute hands of the clock faces.




1. 3.37 p.m



2. 9.11 a.m



3. 11.21 a.m



4. 4.12 p.m

The End