

DREKETI SANGAM SCHOOL

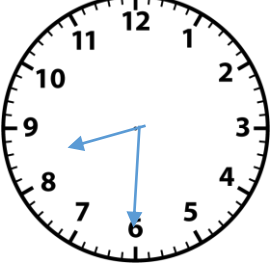
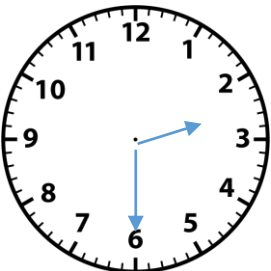

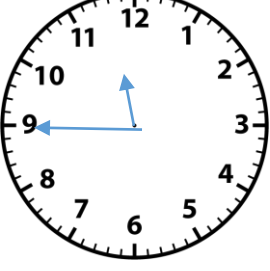
YEAR 6

MATHS

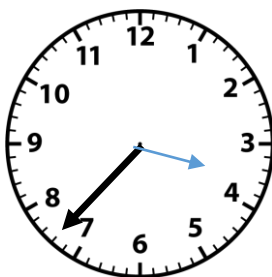
SOLUTIONS

Draw, write each of these examples in:

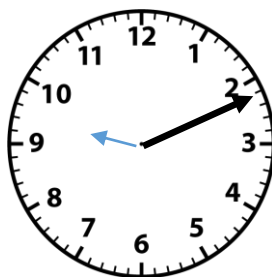
- ← i) am or pm time,
 ii) digital 24 hour time
 iii) analogue time.

Analogue	Draw 	Draw 		Draw 
24-hour time	<u>Eight thirty hours</u>	Fourteen thirty hours	<u>Twenty hours</u>	<u>Twenty three forty five hours</u>
a.m / p.m	8.30 a.m	<u>2.30pm</u>	<u>8.00 p.m</u>	11.45 p.m


Draw the missing hour and minute hands of the clock faces.



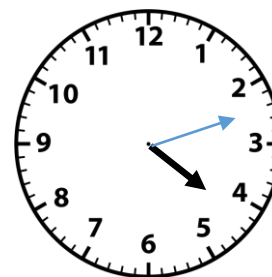
1. 3.37 p.m



2. 9.11 a.m



3. 11.21 a.m



4. 4.12 p.m