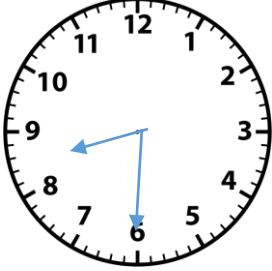
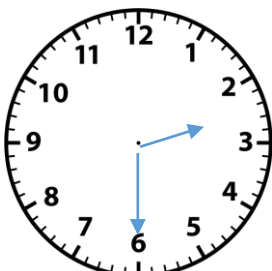

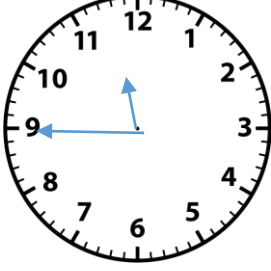


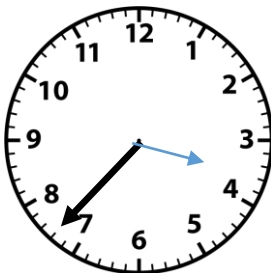
SOLUTIONS

Draw, write each of these examples in:

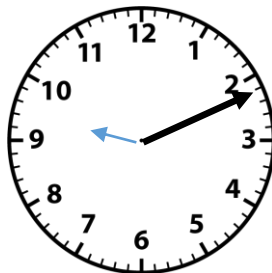
- i) am or pm time,
- ii) digital 24 hour time
- iii) analogue time.

| | | | | |
|--------------|---|---|--|---|
| Analogue | <p>Draw</p>  | <p>Draw</p>  |  | <p>Draw</p>  |
| 24-hour time | <u>Eight thirty hours</u> | Fourteen thirty hours | <u>Twenty hours</u> | <u>Twenty three forty five hours</u> |
| a.m / p.m | 8.30 a.m | <u>2.30pm</u> | <u>8.00 p.m</u> | 11.45 p.m |

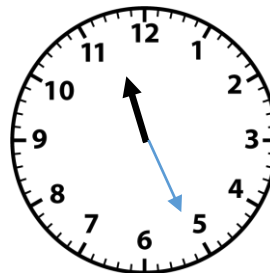
Draw the missing hour and minute hands of the clock faces.



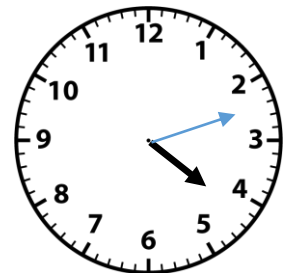
1. 3.37 p.m



2. 9.11 a.m



3. 11.21 a.m



4. 4.12 p.m

The end