

3037 NALOVO SANGAM SCHOOL

YEAR 3
ENGLISH
WORKSHEET #2

Write down the other gender of noun for people in each blank space below using the word list.

mum sir princess boy actress gentleman bride
brother queen grandmother nephew husband man
aunt

Feminine - Masculine

Feminine - Masculine

- a. woman - _____ h. _____ - bridegroom
b. _____ - dad i. madam - _____
c. girl - _____ j. _____ - prince
d. _____ - grandfather k. sister - _____
e. wife - _____ l. _____ - uncle
f. _____ - king m. lady - _____
g. niece - _____ n. _____ - actor

PUNCTUATIONS

QUESTIONS

When we want an answer to something, we ask a **question**.

A question ends with a **question mark(?)**

Some words that can ask are :How What Where When Why







Tick the sentences below that ask questions.

- | | | | |
|-------------------------------|--------------------------|------------------------|--------------------------|
| a. He is going to the garden. | <input type="checkbox"/> | e. Who is that girl? | <input type="checkbox"/> |
| b. Why is the sky so blue? | <input type="checkbox"/> | f. Come home now. | <input type="checkbox"/> |
| c. She is a great dancer! | <input type="checkbox"/> | g. What is in the box? | <input type="checkbox"/> |
| d. Is that your new bag? | <input type="checkbox"/> | i. When will you go? | <input type="checkbox"/> |

3037 NALOVO SANGAM SCHOOL

YEAR 3
MATHS
WORKSHEET #2

CIRCLE THE CORRECT ANSWER

1. A **hexagon** has _____ sides.
a. 5 b. 6 c. 7 d. 8
2. $83 + 473 =$ _____
a. 556 b. 456 c. 450 d. 410
3. _____ - 123 = 326
a. 203 b. 243 c. 443 d. 449
4.  This shape is a _____.
a. square b. cone c. sphere d. cube
5. $807 - 492 =$ _____
a. 1299 b. 475 c. 405 d. 315
6. $439 +$ _____ $= 947$
a. 1386 b. 572 c. 512 d. 508
7.  This shape has how many right angles?
a. 1 b. 2 c. 3 d.
8. The **length of a classroom** can be measured in _____.
a. Cm b. M c. Kg d. L
9. Identify the **cylinder** in these shapes:
- a.  b.  c.  d. 
10. What is the place value of **5** in the number 6521?
a. Thousands b. hundreds c. tens d. ones

3037 NALOVO SANGAM SCHOOL

YEAR 3

HEALTHY LIVING

WORKSHEET # 2

CHOOSE THE WORDS FROM THE LIST TO FILL IN THE BLANKS

(healthy, love, help, happiness, important)

1. We should _____ one another.
2. _____ those who are in need.
3. We need to have good _____ relationship with everyone.
4. Friends are very _____ for us.
5. We share our _____ and sorrow with our friends.
6. Write down three things you love to do with your friend:

7. **Choose the words from the list to answer the following questions**

turn	share	helping	Love	honest
------	-------	---------	------	--------

1. The boy is _____ the old man cross the road.
 2. I like to _____ my things with others.
 3. Telling the truth is being _____.
 4. Always wait for your _____.
 5. _____ your neighbours.
-

3037 NALOVO SANGAM SCHOOL

YEAR 3

HINDI

WORKSHEET # 2

नीचे दिए गए कबीता को पढ़ो और सवालो के जवाब लिखो:

मदकची

पीकर मदक मदकची एक
चला कहीं को लाठी टेक

चलते चलते पीनक आई
गिरा भूमि पर धड़ से भाई

हुआ होश तब उठा विचारा
बोला किस ने धक्का मारा

चला गया वह कहाँ गँवार
मुझे व्यर्थ ही धक्का मार

मार रहा था शेखी यों ही
उड़ कर आई मक्खी त्यों ही

शीघ्र नाक पर वैठी जाए
इसने उसको दिया उड़ाए

वह मक्खी फिर फिर के आवे
वह उसको तब तुरन्त उड़ावे

एक बार रिस इस को आई
काढ़ घुरी झट नाक उड़ाई

इतने पर कहता नादान
अब वैठेगी कहाँ अजान

जो यह मदक न पीता होता
पागल सा हो नाक न होता

ऐसों से बस दूर रहेंगे
कभी नशा हम नहीं करेंगे

1. नशा करने से मदकची की क्या हानी हुई ?

2. वह मक्खी पर क्यों नाराज़ हो गया?

3. क्या किसी ने उसे धक्का मार कर गिराया था?
तुम्हें कैसे मालूम ?

4. मदकची क्यों लाठी टेक कर चलता था ?

3037 NALOVO SANGAM SCHOOL

YEAR 3

SOCIAL STUDIES

WORKSHEET # 2

Read the story and answer the questions given below:

My name is Vijay. It means *Winner* in my language. I live on a farm in Vaivai, Lautoka. My mother and I live in our own house beside my grandparents. We eat *roti* and curry every morning.

I am a Hindu and I often go to the temple to pray. Every year we celebrate *Diwali* in October. We light up candles and *diya* because it is the festival of lights.



My best friend is Mohammed. We go to the same school. His family celebrates *Eid* because they are Muslims. It is a special time when we eat *sawaii*.

I go to Vaivai Christian School. We have Bible classes two times a week. We learn Christian songs and take part in Easter activities.

Choose the correct word from the box to fill in the blanks.

Lautoka Eid Easter temple Diwali

1. Hindus pray in a _____.
2. Sawaii is a special dish that Muslims eat during _____.
3. Vijay lives in _____.
4. _____ is a Christian celebration.
5. _____ is the Hindu festival of lights.


3037 NALOVO SANGAM SCHOOL

KALASI 3 - VEIKA VAKAVITI

WORKSHEET #2

Wilika vinaka na nomu taro ka wiriga mai na isau ni taro e dodonu.

1. Na vosa "au kerea saka" e dau vakayagataki ena _____.
A. Veikidavaki ena mataka
B. Gauna eda kerekere kina
C. Ni da veitalatala
D. Sota ena sigalevu
2. 'Lauti koya na sui ni kena' e kena I balebale na _____.
A. Lauti koya na sui
B. Butuka na sui
C. Lauti koya tale na ca ni ka e vakarautaka me yaco vei ua tale.
D. Sui ni ika
3. Ni 10 na tabua sa dua na _____.
A. 1 na buli
B. 1 na bure
C. 1 na tamata
D. 1 na vulo
4. Tamata liga mate e cavuti vei koya e dau _____.
A. Mate naka e tea
B. Bula naka e tea
C. Wadrovu naka e tea
D. Musuki naka e tea
5. Na kakana cava e vakaraitaki tiko qo ena yaloyalo.



- A. uvi
- B. uto
- C. kumala
- D. dalo

Vosa Veibasai

Veisataka mai na kena vosa veibasai mai na wasewase B.

	Wasewase A			Wasewase B
1	Lewe levu		A	Bogi
2	Vakasabusabu		B	Lewe lailai
3	Taukei		C	Mamaroroi
4	Vakaukautaka		D	Vakamalumalumutaka
5	Siga		E	Vulagi

3037 NALOVO SANGAM SCHOOL

YEAR 3

ELEMENTARY SCIENCE

WORKSHEET # 2

DRAW AND COLOUR:

ANIMALS WITH NO LEGS:

--	--	--	--

ANIMALS WITH 6 LEGS

--	--	--	--

ANIMALS WITH 8 LEGS

--	--	--	--

ANIMALS WITH MORE THAN 8 LEGS

--	--	--	--