

1076 NADI SANGAM SCHOOL

YEAR 6

HOME STUDY PACKAGE 13

FORMATIVE ASSESSMENT 1

MATHS

SECTION A

MULTIPLE CHOICE

2 marks each

Circle the letter of the best answer

1. Tom is carrying 1.5kg of goods while Peter is carrying 750g of goods. How much more needs to be carried by Peter to equal Tom?

A. 600g
B. 300g
C. 1.5kg
D. 750g

2. $12.38 - 1.56 =$ _____

A. 13.94
B. 10.82
C. 31.92
D. 8.86

3. How many milliliters (ml) are there in half a liter?

A. 5 ml
B. 50ml
C. 500ml
D. 5,000ml

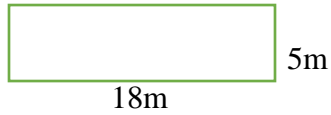
4. $(4 \times 2) \times n = 24$. The value of n is equal to

A. 6 B. 5 C. 4 **D. 3**

5. The number $213.458 \times 1,000 =$ ___

- A. 213,458
- B. 213.458
- C. 2.13458
- D. 0.0213458

6.



John wants to fence his farm. How much wire will he need?

- A. 13m
 - B. 46m
 - C. 23m
 - D. 90m
7. Jone is twice as heavy as his brother. If his brother is 24kg, what is Jone's weight?
- A. 24kg
 - B. 48kg
 - C. 12kg
 - D. 36kg

SECTION B WORK OUT

1 mark each

Question	Working	Answer
1. $2\frac{1}{3} + 1\frac{4}{6} =$	$\begin{aligned} 2\frac{1}{3} + 1\frac{4}{6} &= \frac{7}{3} + \frac{10}{6} \\ &= \frac{14}{6} + \frac{10}{6} \\ &= \frac{24}{6} \end{aligned}$	24 6
2. The distance from Suva to Navua is 36 _____.		Kilometre / km
3. A student's height is 159 centimeters . What is the student's height in metres?		1.59m

<p>4. Calculate to find the answer.</p> <p>(a) In a class there are 25 students. If $\frac{1}{5}$ of these students are absent for a day, how many are absent?</p> <p>b. The students present formed a circle with a radius of 150cm. Find the diameter of the circle.</p>	<p>$1/5$ of 25 is 5</p> <p>Diameter = 2 X radius $= 2 \times 150$ $= 300\text{cm}$</p>	<p>a. 5</p> <p>b. 300cm</p>
<p>c. Jone went to sleep at 8.45pm and woke up at 6.15am the next day. How long did he sleep?</p>	<p>8.45 – 9.45 -1 9.45- 10.45- 1 10.45-11.45-1 11.45-12.45-1 12.45-1.45-1 1.45-2.45-1 2.45-3.45-1 3.45-4.45- 1 4.45-5.45-1- 9hrs+ 5.45-6.15-30mins</p>	<p>9 hours 30 minutes</p>

1076 NADI SANGAM SCHOOL

YEAR 6

HOME STUDY PACKAGE 13

FORMATIVE ASSESSMENT 1

ENGLISH SOLUTION

TOTAL: 20 MARKS

NAME: _____

SECTION A

GRAMMAR

15 MARKS

Choose the correct answer and circle the letter of the best answer.

1. Ramesh has just _____ a letter to his brother in New Zealand.
A. write
C. written
B. wrote
D. writing
2. When did Satish _____ his teeth?
A. brushed
C. brushing
B. brush
D. brushes
3. Mere kept on reading _____ her teacher told her to stop.
A. because
C. for
D. until
B. as soon as
4. Instead of _____ to school yesterday, Rosa went to town.
A. coming
C. came
B. comes
D. come
5. Pravin _____ chicken curry and roti for breakfast yesterday.
A. had
C. has
B. having
D. have

6. My brother is taller _____ my sister.
 A. then
 B. with
 C. by
 D. **than**
7. Does an octopus _____ in the sea?
 A. lives
 B. living
 C. lived
 D. **live**
8. Kaushneel hasn't come to school today, _____?
 A. will he
 B. did he
 C. **has he**
 D. had he
9. There aren't many books on the desk. The underlined words can be replaced by:
 A. **are only a few**
 B. is only a little
 C. were a little
 D. were only a few
10. The boy felt very hungry. He ate his food _____.
 A. hungry
 B. angrily
 C. thirstily
 D. **hungrily**
11. My brother picked _____ orange from the tree.
 A. a
 B. many
 C. **an**
 D. some
12. Choose the answer which is similar in meaning to the underlined word
 Please come for an interview at a time which is convenient to you
 A. **suitable**
 B. correct
 C. easy
 D. early
13. The girl's attendance at school was _____ so the teacher complained to her parents
 A. unregular
 B. **irregular**
 C. dis-regular
 D. mis-regular
14. What is the masculine form for the underlined word?
 The heroine of the story was Zeena
 A. **hero**
 B. heroic
 C. heros
 D. heroism

15. Identify the noun in this sentence

The dog quickly ran after her

- A. dog
- B. ran

- C. quickly
- D. her

SECTION B

Fill in the Blanks

(5m)

Write a suitable word in each blank space to complete the paragraph given below.

A Thief

One day Roma's little daughter was/ got very sick. When night came, she was very thirsty. She wanted some water to drink. Roma went to get some water. It was dark. She couldn't see the way. She put the light on. A man was standing in the kitchen. He had a big knife his hands. Roma shouted loudly and the thief jumped out of the window and ran quickly.

1076 NADI SANGAM SCHOOL

YEAR 6

HOME STUDY PACKAGE 13

FORMATIVE ASSESSMENT 1

HINDI

Marks: 20

Name: _____

पहला भाग भाषा

सही जवाब को चुनकर उसके बगल वाले अक्षर पर गोलाकार निशान बनाकर दिए गए वाक्यों को पूरा कीजिए ।

१. वे लड़कियाँ बड़ी जोर से हँस _____ थीं ।
क. रहे ख. रहा **ग. रही** घ. रहती
२. तुम _____ काम चुपचाप करो ।
क. अपनी **ख. अपना** ग. अपने घ. आपका
३. नौकर सो रहा है, _____ जगा दो ।
क. उसे ख. उनको ग. उन्हें घ. उसका
४. मेरी बहन लाल कपड़े पसन्द _____ है ।
क. करत ख. करतें **ग. करती** घ. करता
५. आप _____ पुस्तक से मत खेलो ।
क. अपनी ख. अपने ग. अपना घ. अपनो

इन शब्दों के विलोम (**Opposite**) शब्द बतलाइए ।

६. पुराने

क. मैले

ख. फटे

ग. नए

घ. प्राचीन

७. नीचे

क. दूर

ख. ऊपर

ग. बगल

घ. पास

८. मेहनती

क. चतुर

ख. ताकतवर

ग. मजबूत

घ. आलसी

९. गरमी

क. धूप

ख. वर्षा

ग. सर्दी

घ. सूखा

इन शब्दों के स्त्रीलिंग (**Feminine**) शब्द बतलाइए ।

१०. वर

क. बालक

ख. पिता

ग. वधू

घ. देवता

११. चिड़ा

क. चीता

ख. चिड़िया

ग. चींटी

घ. चील

१२. पंडित

क. अध्यापिका

ख. शिष्या

ग. धोबिन

घ. पंडिता

इन शब्दों के पुलिंग (**Masculine**) शब्द बतलाइए ।

१३. महिला

क. पुरुष

ख. मौसा

ग. पुत्र

घ. नौकर

१४. चुहिया

क. शेर

ख. बिल्ला

ग. चूहा

घ. हाथी

१५. धोबिन

क. अध्यापक
दूसरा भाग : वर्तनी

ख. शिष्या

ग. धोबी

घ. पंडित

सही रूप वाले शब्द को चुनकर लिखिए ।

(अंक ५)

१. मेरी **माँ** भोजन पकाती है । (माँ / मा)

२. हर **सुबह** मैं पार्थना करती हूँ । (सुबह / सुबहा)

३. **चोर** भाग गए । (चोर / जोर)

४. बच्चों को कभी गाली **नहीं** देनी चाहिए । (नही / नहीं)

५. **कक्षा** में बच्चे पढ़ते हैं । (कक्षा /कछा)

1076 NADI SANGAM SCHOOL
YEAR 6
HOME STUDY PACKAGE 13
SOCIAL STUDIES-FORMATIVE ASSESSMENT 1
SOLUTION

MARKS: 20

NAME: _____

SECTION A TRUE/FALSE (5M)

1. Love is a moral value. **True**
2. Levuka is the Capital of Fiji. **False**
3. A map is a drawing seen from above. **True**
4. A Lion dance is performed by Chinese people. **True**

SECTION B SHORT ANSWER (10M)

1. List one sea resource. **Fish, Sand, Crab, Coral, Whales, Shark, etc**
2. Give two examples of Natural Environment.
Mountains, Sea, Forest, Soil,
3. Name the four island groups of Fiji.
Yasawa, Mamanuca, Lau, Lomaiviti.
4. Define Agroforestry
Is planting tall trees between crops to prevent soil erosion.
5. Identify two ways in which sea resources can be protected.
Put spot fines
Educate people
Use safe method for fishing
Avoid catching during breeding season.

SECTION C

Study the diagram and answer the questions that follow



i. What do you call the law of the country?(1m)

Constitution

ii. Who makes the members of parliament? (1m)

Cabinet Ministers and Opposition members

iii. What happens to people who do not follow the laws of a country? (2m)

People who do not obey the law are arrested and charged by police.

iv. In which Year new Constitution was written? **2013** (1m)

1076 NADI SANGAM SCHOOL
YEAR 6
HOME STUDY PACKAGE 13
ELEMENTARY-FORMATIVE ASSESSMENT 1
SOLUTION

MARKS-20

NAME: _____

SECTION A- TRUE/FALSE (5M)

1. An example of Rhizomes is ginger. **True**
2. The fertilized ovule develops into a fruit. **False**
3. The spotted Dove is a long-tailed pigeon. **True**
4. A series circuit is connected side by side. **False**
5. An example of Synthetic Material is Polyester. **True**

SECTION B-SHORT ANSWER (10M)

1. Give two characteristics of Reptiles.
Cold blooded, scales, lay eggs eg. Iguana, lizard, Gecko
2. Define the term Germination
Early stage of seed growth.
3. Which part of the flower attracts insects? **Petals**
4. Name the 3 parts of a seeds.
Seed coat, Embryo. Cotyledon (food store)
5. List two introduced species of plant in Fiji.
Pine, Mahogany, Eucalyptus, African Tulips and Water Hyacinth.
6. Explain what you would do if the science laboratory catches fire.
Inform the teacher in charge quickly and will not panic and move out quickly.

SECTION C Using the particle theory draw 3 states of matter.

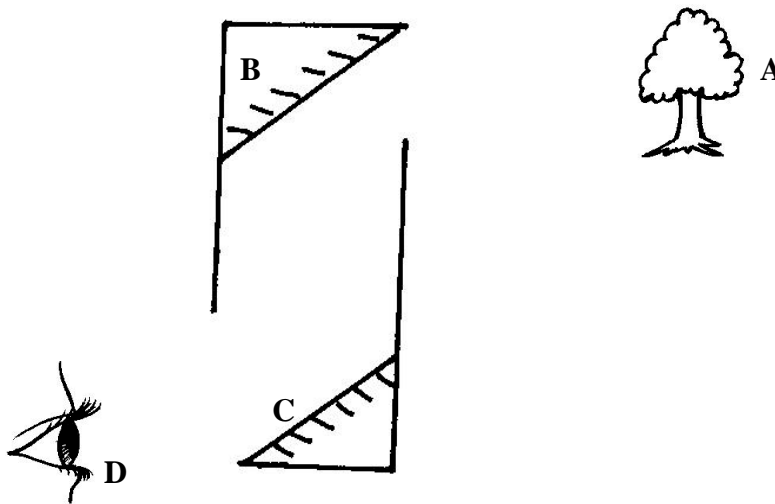
(3M)

States of matter



shutterstock.com · 1709778085

(b) The diagram below shows a periscope. Use the diagram and your knowledge to answer the questions that follow.



- (i) Name the object. **Periscope**
- (ii) Where will you see the image? **Mirror C**

1076 NADI SANGAM SCHOOL
YEAR 6
HOME STUDY PACKAGE 13
HEALTHY LIVING-FORMATIVE ASSESSMENT 1
SOLUTION

MARKS-20

NAME: _____

SECTION A TRUE/FALSE (5M)

1. Putting labels on household chemical is not important. **False**
2. Personal safety is freedom from harm or threat. **True**
3. Peripheral nervous system consists of the nerves and ganglia. **True**
4. Body Building food provides us with protein. **True**
5. Cornea is the part of the eye. **True**

SECTION B SHORT ANSWER (10M)

1. List down three diseases that arise after the natural disaster.
Diarrhoea, Typhoid, Dysentery and Dengue fever.
2. Give the function of:
 - a) Iris-**contains the pigment which gives the eye its colour.**
 - b) Pinna-**directs the sound into ear canal.**
3. Define Joint-**is where two or more bones meet or come together.**
4. Give two benefits of home gardening.
Fresh Food, Saves time and money and Physical activity.
5. Give two examples of communicable disease. **Measles, Flu, Cough, Dhani and Ringworm.**

SECTION C MATCHING



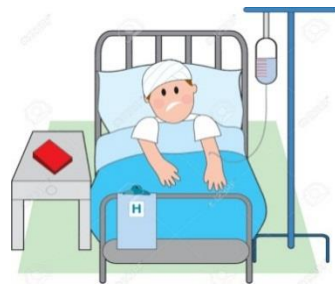
C

A. Fire



D

B. Sick Person



B

C. Need



A

D. Robbery



E

E. Household products

1076 Nadi Sangam School

Year 6 Vosa VakaViti HSP 13 Solution

Na Veika VakaViti:

Kau tani ni kuli se qa ni kakana:

1. Moli- liga (civi), isele (civi)
2. Tiaina dreu- liga (voci)
3. Ika- vari
4. Tavioka- qasi
5. Maqo dreu- voci
6. Uvi, dalo, kawai, dalonitana, uto, kumala- droka (civi), buta (voci)
7. Niu- sua

Kau tani ni kuli se vuti ni manumanu:

1. Bulumakau, me, sumusumu- drudru
2. Vuaka- coro
3. Toa, ga, soqe- vuti

Na tagi ni manumanu:

1. Belo- suru
2. Toa- koko
3. Koli- kodro/ lolo
4. Namu- gi
5. Soqe- dugu
6. Kaka- kara
7. Beka- kose, soki
8. Vusi- gau